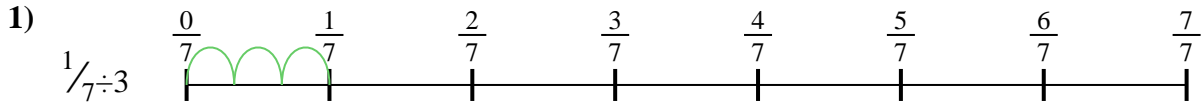





Usa la línea numérica para resolver cada problema. El primero ya está hecho como ejemplo

**Respuestas**




1. \_\_\_\_\_

2. \_\_\_\_\_



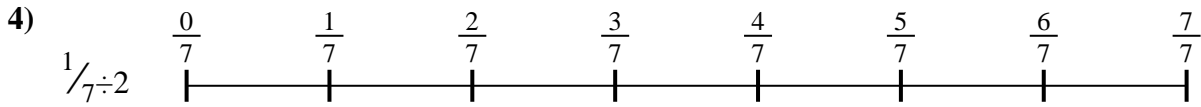
3. \_\_\_\_\_

4. \_\_\_\_\_




5. \_\_\_\_\_

6. \_\_\_\_\_





7. \_\_\_\_\_

8. \_\_\_\_\_



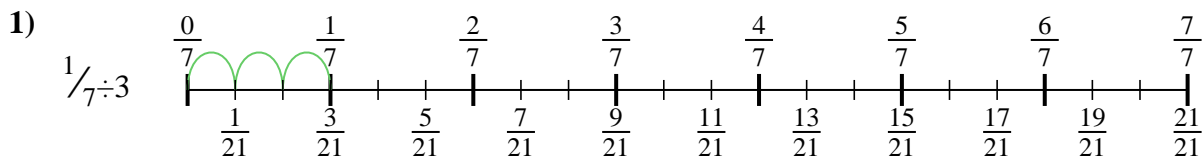
9. \_\_\_\_\_



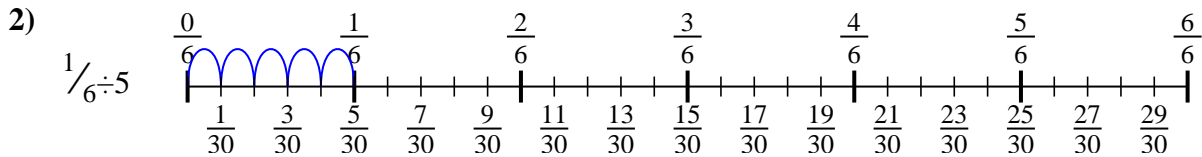


Usa la línea numérica para resolver cada problema. El primero ya está hecho como ejemplo

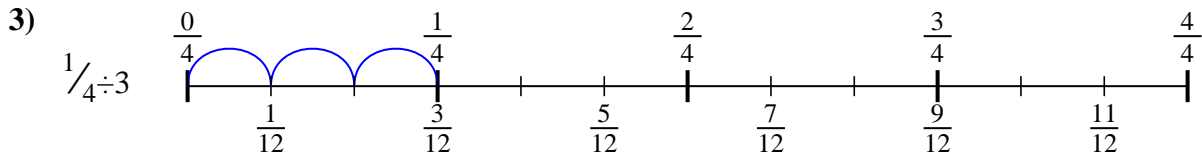
**Respuestas**



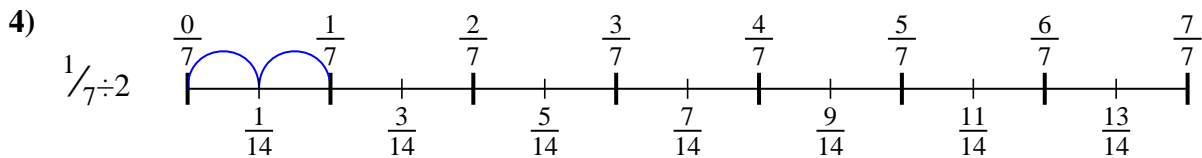
1.  $\frac{1}{21}$



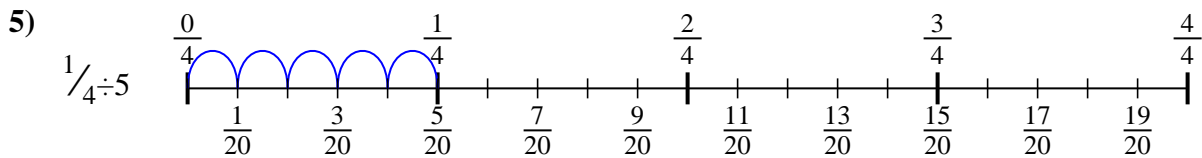
2.  $\frac{1}{30}$



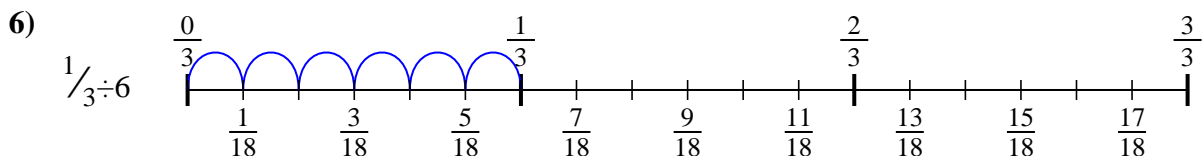
3.  $\frac{1}{12}$



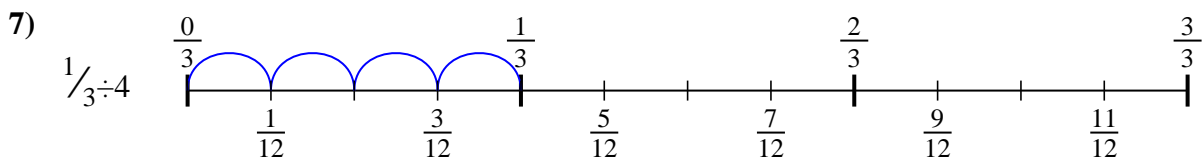
4.  $\frac{1}{14}$



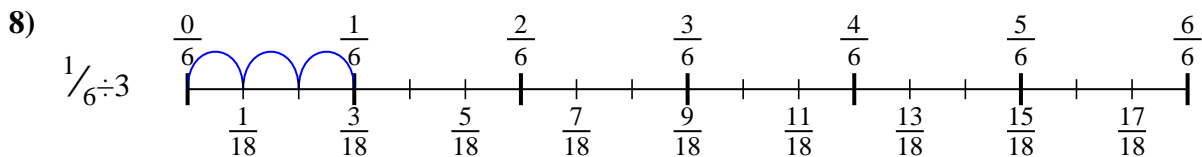
5.  $\frac{1}{20}$



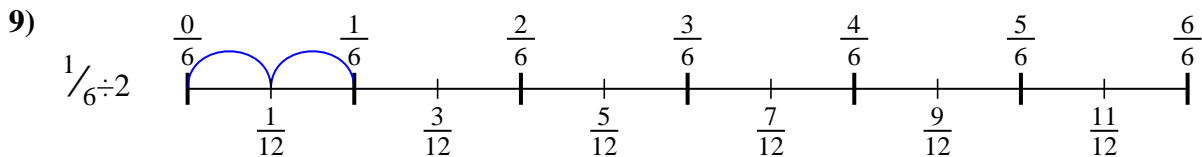
6.  $\frac{1}{18}$



7.  $\frac{1}{12}$



8.  $\frac{1}{18}$




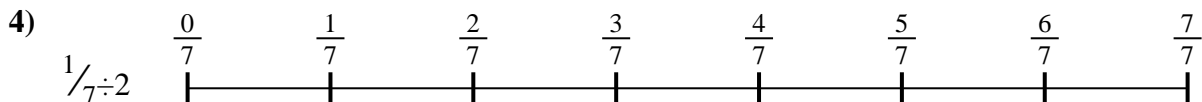

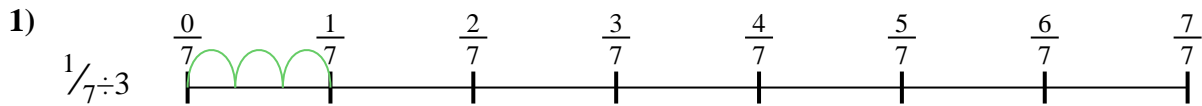
9.  $\frac{1}{12}$



Usa la línea numérica para resolver cada problema. El primero ya está hecho como ejemplo

**Respuestas**

$\frac{1}{30}$	$\frac{1}{12}$	$\frac{1}{12}$	$\frac{1}{20}$
$\frac{1}{21}$	$\frac{1}{18}$	$\frac{1}{18}$	$\frac{1}{12}$
$\frac{1}{14}$			



1. \_\_\_\_\_
2. \_\_\_\_\_
3. \_\_\_\_\_
4. \_\_\_\_\_
5. \_\_\_\_\_
6. \_\_\_\_\_
7. \_\_\_\_\_
8. \_\_\_\_\_
9. \_\_\_\_\_