




Usa la línea numérica para resolver cada problema. El primero ya está hecho como ejemplo

Respuestas



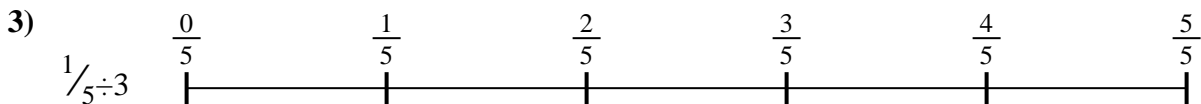
1. _____

2. _____



3. _____

4. _____



5. _____

6. _____


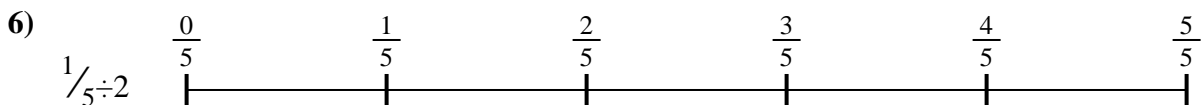


7. _____

8. _____



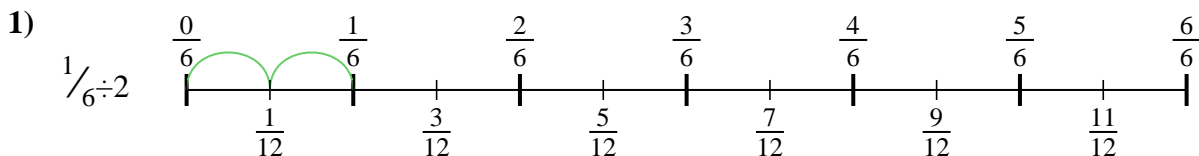
9. _____



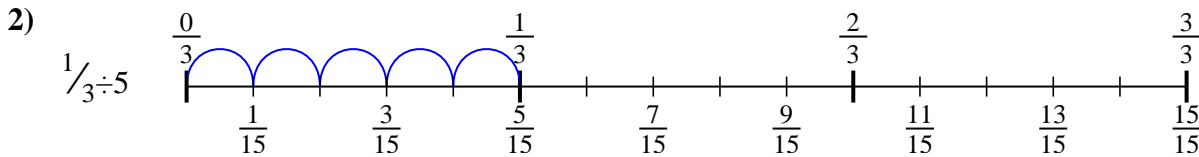


Usa la línea numérica para resolver cada problema. El primero ya está hecho como ejemplo

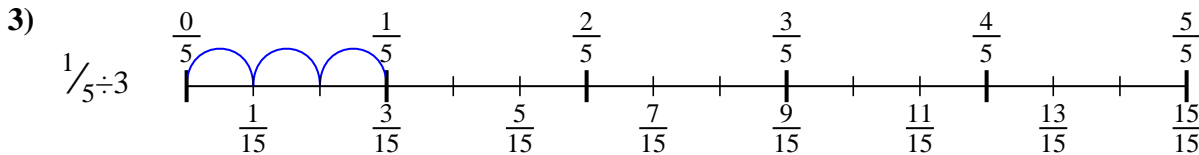
Respuestas



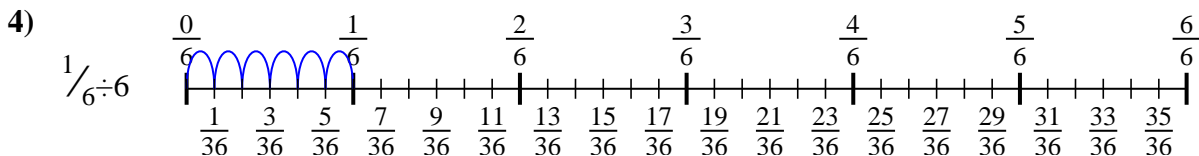
1. $\frac{1}{12}$



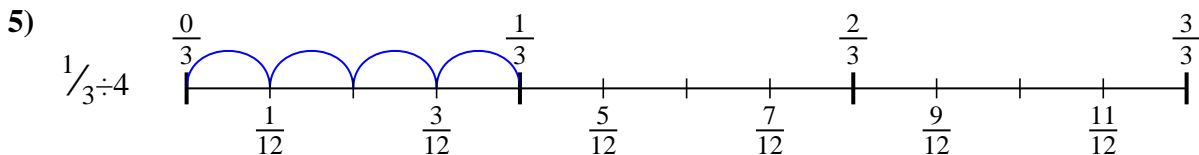
2. $\frac{1}{15}$



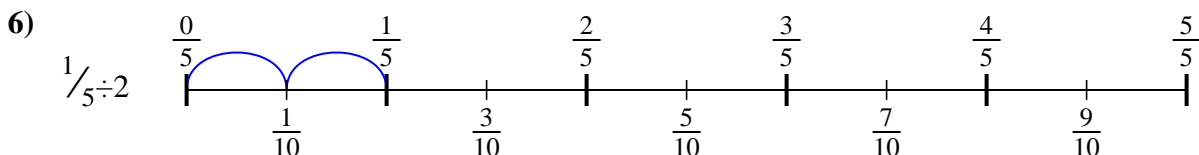
3. $\frac{1}{15}$



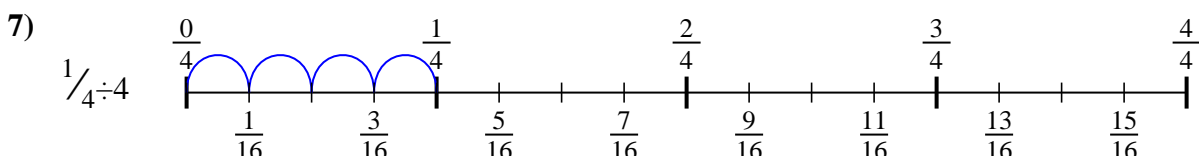
4. $\frac{1}{36}$



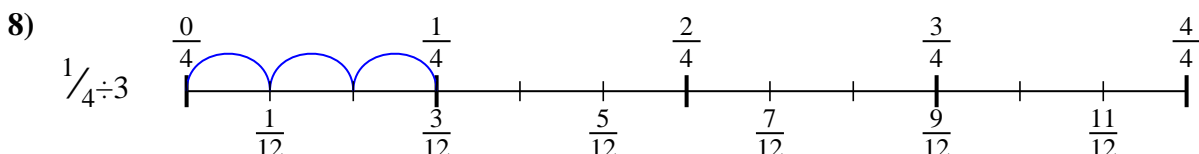
5. $\frac{1}{12}$



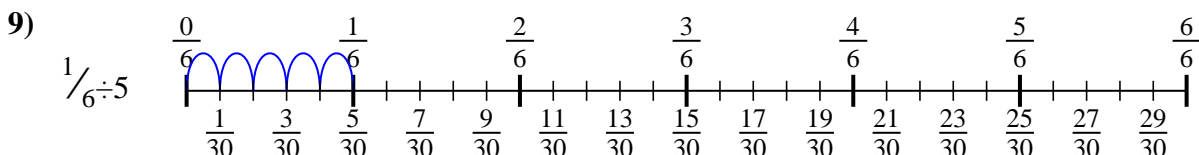
6. $\frac{1}{10}$



7. $\frac{1}{16}$



8. $\frac{1}{12}$





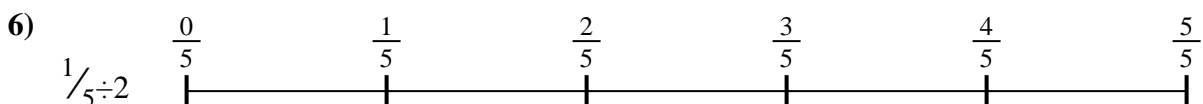
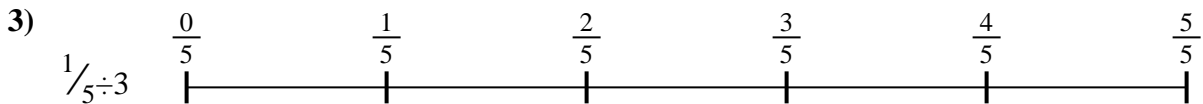
9. $\frac{1}{30}$



Usa la línea numérica para resolver cada problema. El primero ya está hecho como ejemplo

Respuestas

$\frac{1}{36}$	$\frac{1}{12}$	$\frac{1}{30}$	$\frac{1}{12}$
$\frac{1}{15}$	$\frac{1}{10}$	$\frac{1}{12}$	$\frac{1}{16}$
$\frac{1}{15}$			



1. _____
2. _____
3. _____
4. _____
5. _____
6. _____
7. _____
8. _____
9. _____