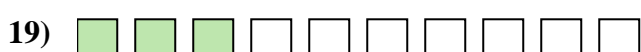

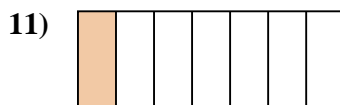
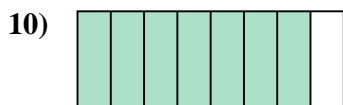

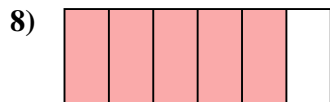
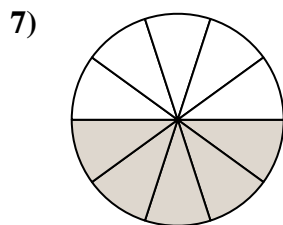
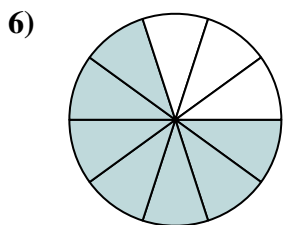
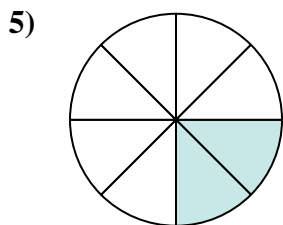


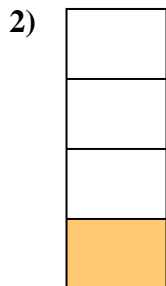





Determina si el área sombreada es 'más', 'menos' o 'igual' que la mitad.

Respuestas



1. _____

2. _____

3. _____

4. _____

5. _____

6. _____

7. _____

8. _____

9. _____

10. _____

11. _____

12. _____

13. _____

14. _____

15. _____

16. _____

17. _____

18. _____


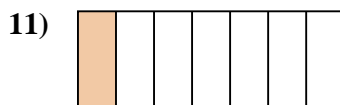
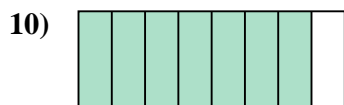
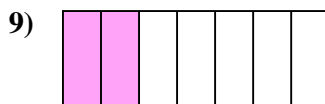

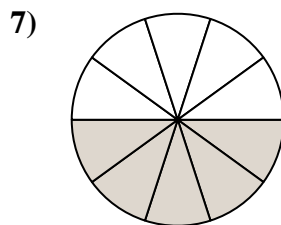
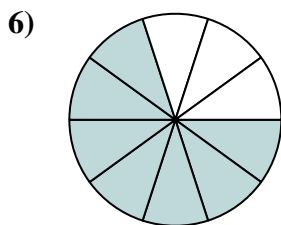
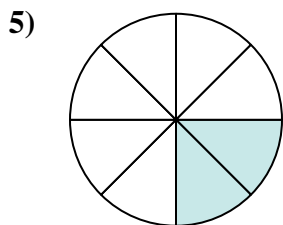



19. _____

20. _____



Determina si el área sombreada es 'más', 'menos' o 'igual' que la mitad.

Respuestas



1. menor

2. menor

3. mayor

4. mayor

5. menor

6. mayor

7. igual

8. mayor

9. menor

10. mayor

11. menor

12. mayor

13. menor

14. menor

15. mayor

16. igual

17. menor

18. menor

19. menor

20. menor