
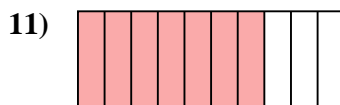
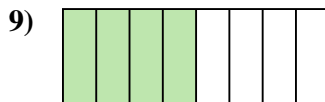
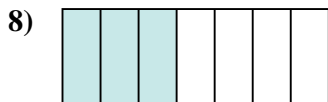
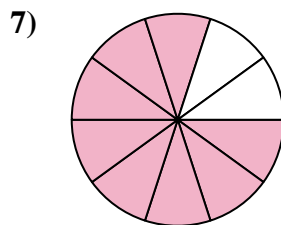
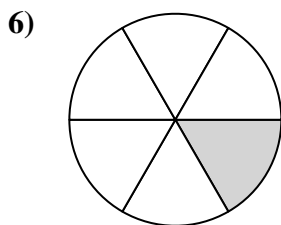
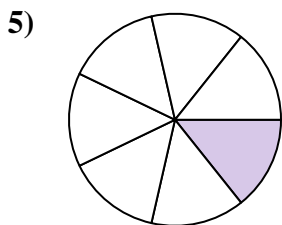
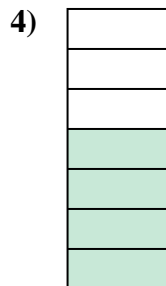
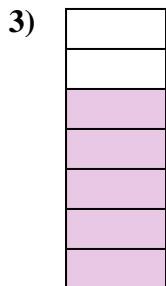
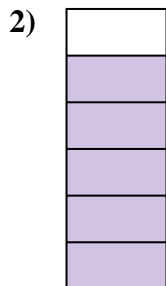
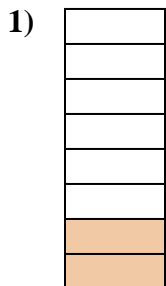




Determina si el área sombreada es 'más', 'menos' o 'igual' que la mitad.

Respuestas



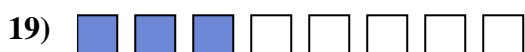


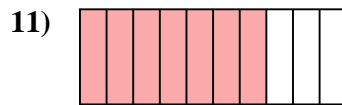
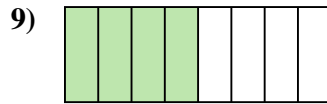
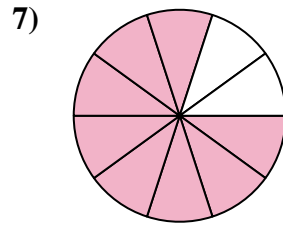
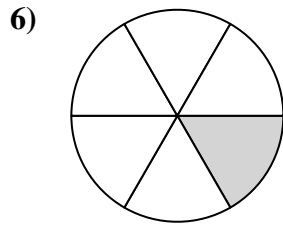
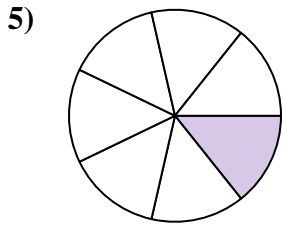
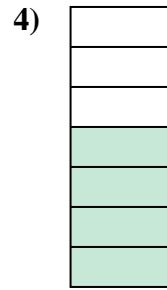
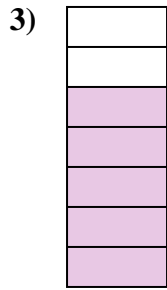
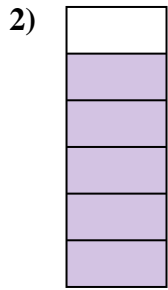
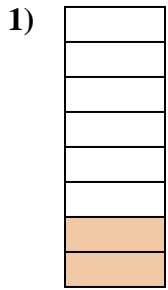
1. _____
2. _____
3. _____
4. _____
5. _____
6. _____
7. _____
8. _____
9. _____
10. _____
11. _____
12. _____
13. _____
14. _____
15. _____
16. _____
17. _____
18. _____
19. _____
20. _____

1-10	95	90	85	80	75	70	65	60	55	50
11-20	45	40	35	30	25	20	15	10	5	0



Determina si el área sombreada es 'más', 'menos' o 'igual' que la mitad.

Respuestas



1. menor

2. mayor

3. mayor

4. mayor

5. menor

6. menor

7. mayor

8. menor

9. igual

10. igual

11. mayor

12. mayor

13. menor

14. igual

15. igual

16. menor

17. mayor

18. mayor

19. menor

20. mayor