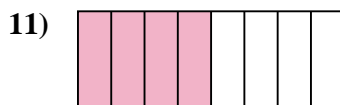
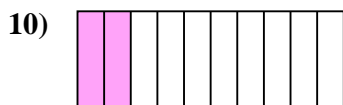
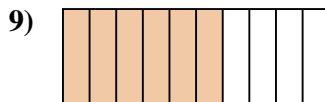

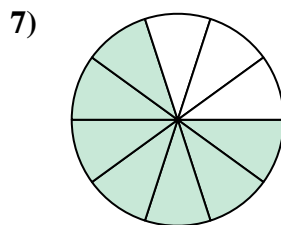
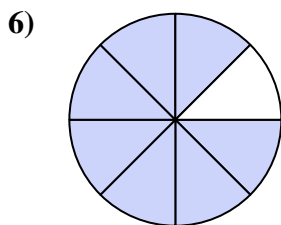
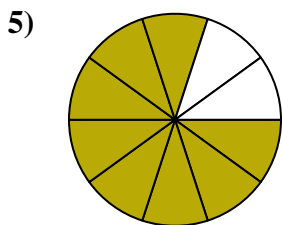







Determina si el área sombreada es 'más', 'menos' o 'igual' que la mitad.

Respuestas

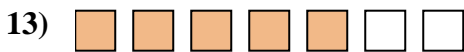

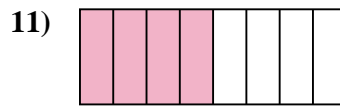
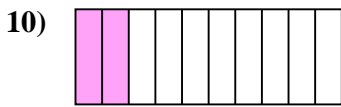
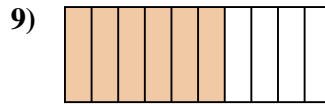
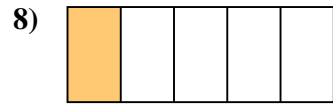
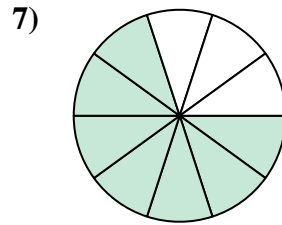
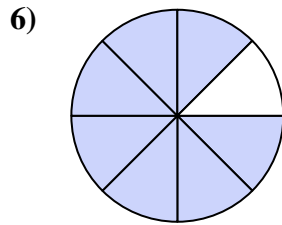
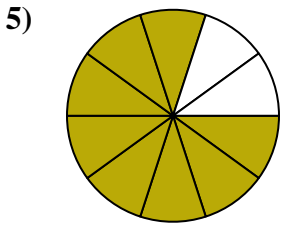


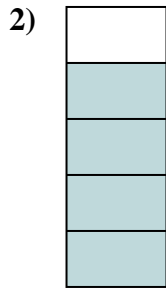


1. _____
2. _____
3. _____
4. _____
5. _____
6. _____
7. _____
8. _____
9. _____
10. _____
11. _____
12. _____
13. _____
14. _____
15. _____
16. _____
17. _____
18. _____
19. _____
20. _____



Determina si el área sombreada es 'más', 'menos' o 'igual' que la mitad.

Respuestas



1. **menor**

2. **mayor**

3. **menor**

4. **menor**

5. **mayor**

6. **mayor**

7. **mayor**

8. **menor**

9. **mayor**

10. **menor**

11. **igual**

12. **mayor**

13. **mayor**

14. **igual**

15. **igual**

16. **menor**

17. **menor**

18. **mayor**

19. **menor**

20. **menor**

1-10	95	90	85	80	75	70	65	60	55	50
11-20	45	40	35	30	25	20	15	10	5	0