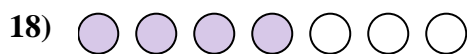


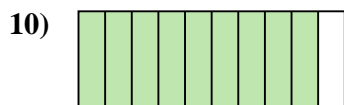
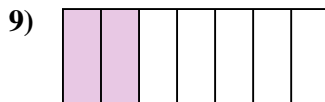
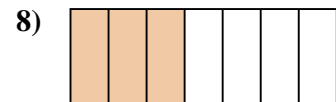
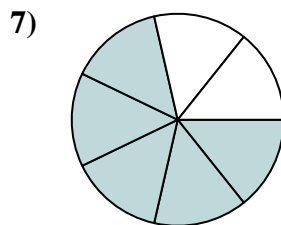
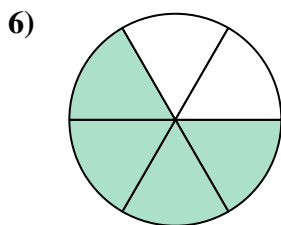
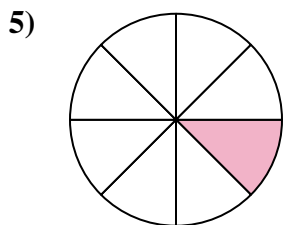
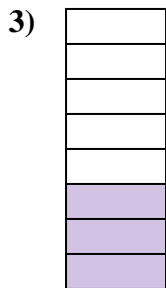






Determina si el área sombreada es 'más', 'menos' o 'igual' que la mitad.

Respuestas



1. _____

2. _____

3. _____

4. _____

5. _____

6. _____

7. _____

8. _____

9. _____

10. _____

11. _____

12. _____

13. _____

14. _____

15. _____

16. _____

17. _____

18. _____





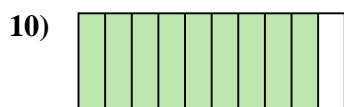
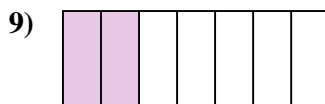
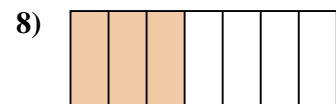
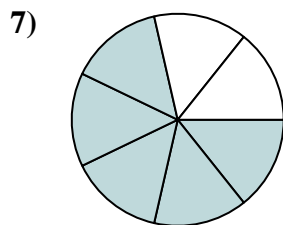
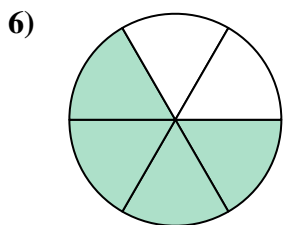
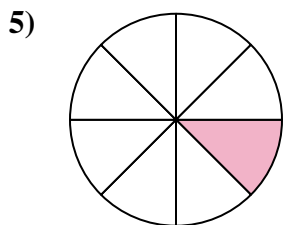
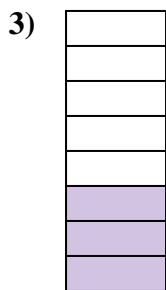


19. _____

20. _____



Determina si el área sombreada es 'más', 'menos' o 'igual' que la mitad.

Respuestas



1. **mayor**

2. **igual**

3. **menor**

4. **menor**

5. **menor**

6. **mayor**

7. **mayor**

8. **menor**

9. **menor**

10. **mayor**

11. **igual**

12. **mayor**

13. **menor**

14. **menor**

15. **menor**

16. **mayor**

17. **menor**

18. **mayor**

19. **mayor**

20. **igual**