

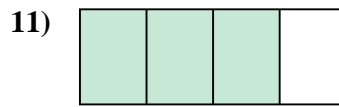
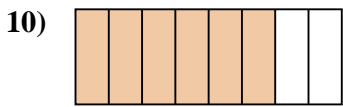
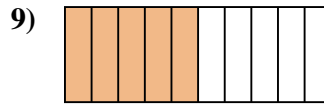
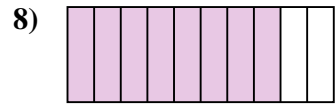
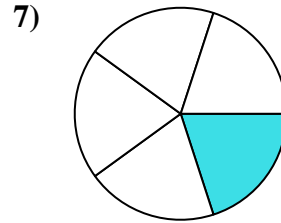
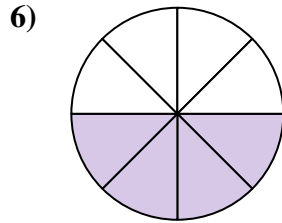
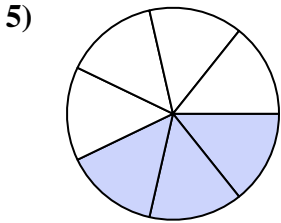

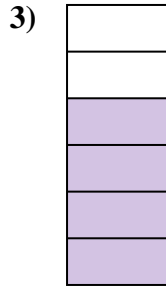
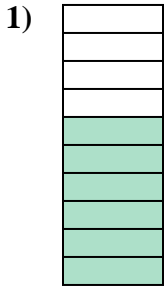




Determina si el área sombreada es 'más', 'menos' o 'igual' que la mitad.

**Respuestas**


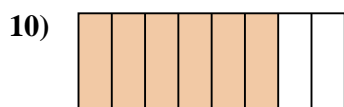
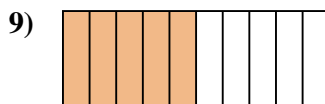
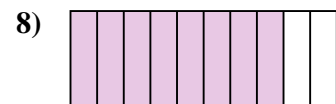
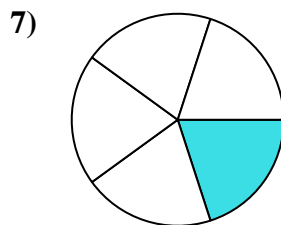
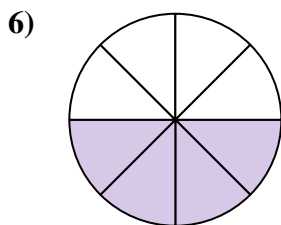
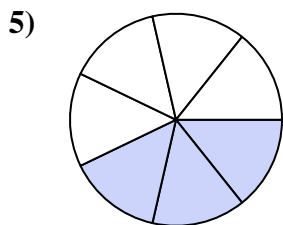

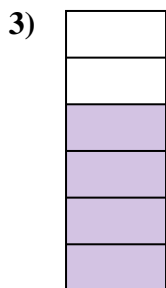



1. \_\_\_\_\_
2. \_\_\_\_\_
3. \_\_\_\_\_
4. \_\_\_\_\_
5. \_\_\_\_\_
6. \_\_\_\_\_
7. \_\_\_\_\_
8. \_\_\_\_\_
9. \_\_\_\_\_
10. \_\_\_\_\_
11. \_\_\_\_\_
12. \_\_\_\_\_
13. \_\_\_\_\_
14. \_\_\_\_\_
15. \_\_\_\_\_
16. \_\_\_\_\_
17. \_\_\_\_\_
18. \_\_\_\_\_
19. \_\_\_\_\_
20. \_\_\_\_\_



Determina si el área sombreada es 'más', 'menos' o 'igual' que la mitad.

**Respuestas**



1. mayor

2. menor

3. mayor

4. menor

5. menor

6. igual

7. menor

8. mayor

9. igual

10. mayor

11. mayor

12. menor

13. mayor

14. mayor

15. menor

16. mayor

17. menor

18. menor

19. menor

20. mayor