
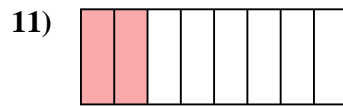
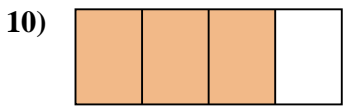
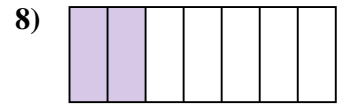
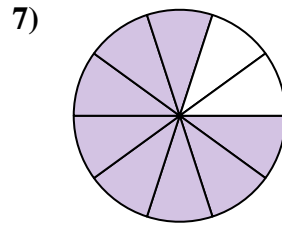
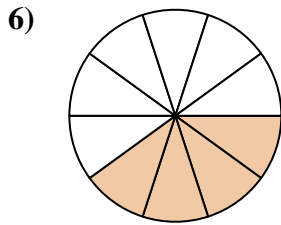
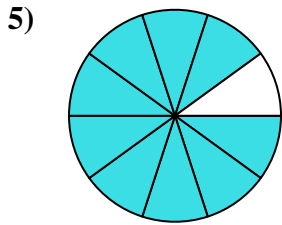

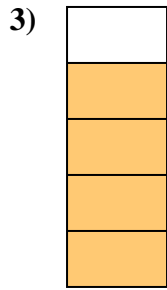
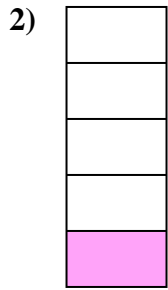





Determina si el área sombreada es 'más', 'menos' o 'igual' que la mitad.

Respuestas

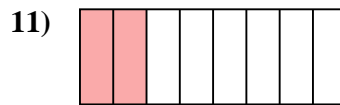
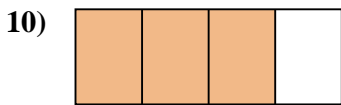
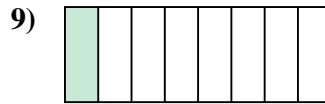
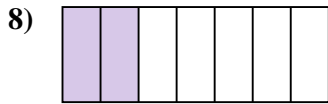
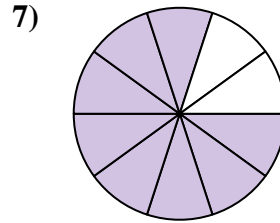
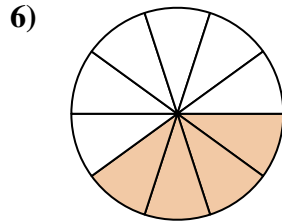
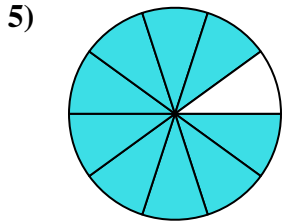

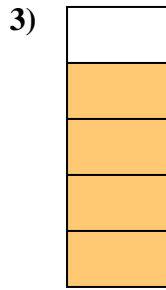
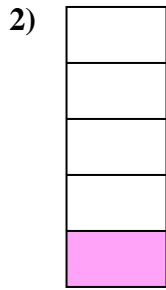



1. _____
2. _____
3. _____
4. _____
5. _____
6. _____
7. _____
8. _____
9. _____
10. _____
11. _____
12. _____
13. _____
14. _____
15. _____
16. _____
17. _____
18. _____
19. _____
20. _____



Determina si el área sombreada es 'más', 'menos' o 'igual' que la mitad.

Respuestas



1. **mayor**

2. **menor**

3. **mayor**

4. **mayor**

5. **mayor**

6. **menor**

7. **mayor**

8. **menor**

9. **menor**

10. **mayor**

11. **menor**

12. **mayor**

13. **menor**

14. **menor**

15. **menor**

16. **igual**

17. **mayor**

18. **igual**

19. **igual**

20. **mayor**