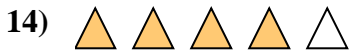
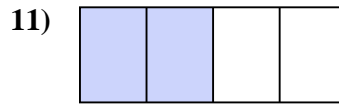
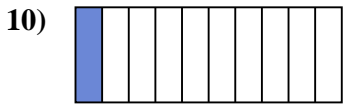
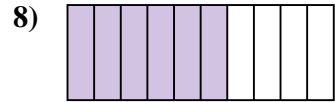
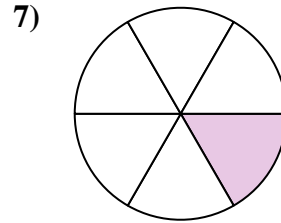
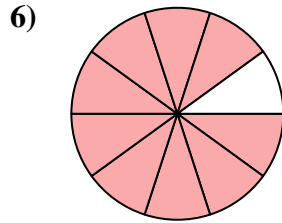
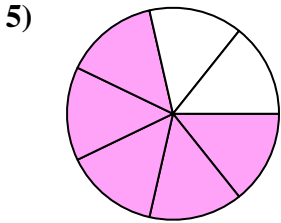



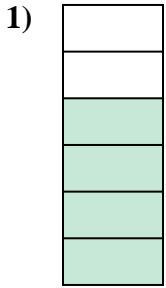




Determina si el área sombreada es 'más', 'menos' o 'igual' que la mitad.

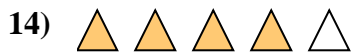
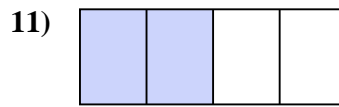
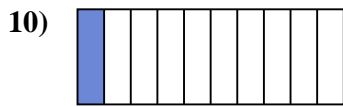
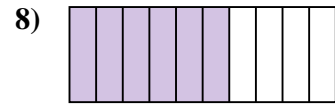
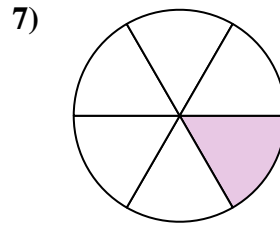
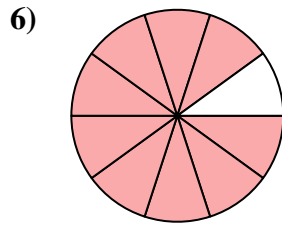
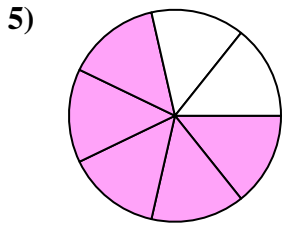



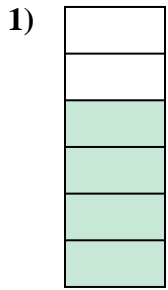
Respuestas



1. _____
2. _____
3. _____
4. _____
5. _____
6. _____
7. _____
8. _____
9. _____
10. _____
11. _____
12. _____
13. _____
14. _____
15. _____
16. _____
17. _____
18. _____
19. _____
20. _____



Determina si el área sombreada es 'más', 'menos' o 'igual' que la mitad.



Respuestas

1. mayor

2. igual

3. menor

4. menor

5. mayor

6. mayor

7. menor

8. mayor

9. mayor

10. menor

11. igual

12. mayor

13. mayor

14. mayor

15. menor

16. menor

17. igual

18. mayor

19. mayor

20. igual