
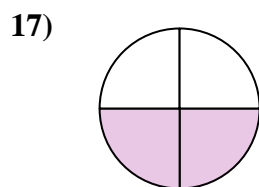

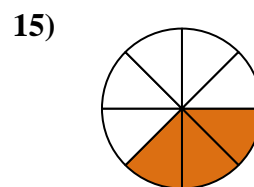
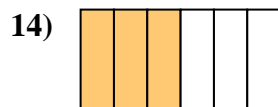

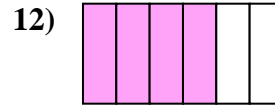
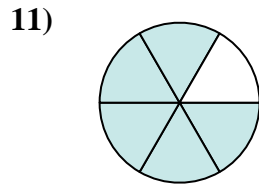
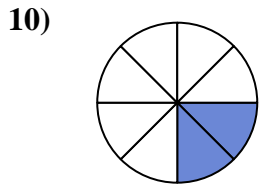
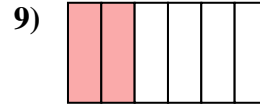
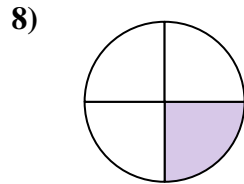
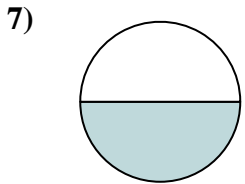
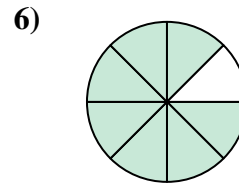
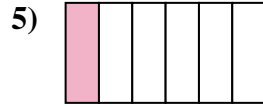
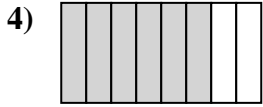
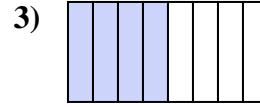
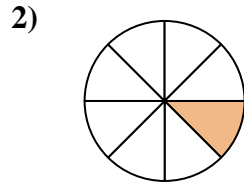
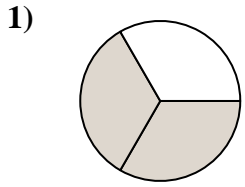




Escribe la cantidad sombreada como una fracción de la cantidad total.

Respuestas


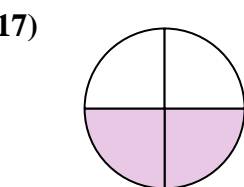

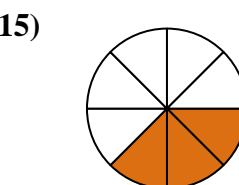
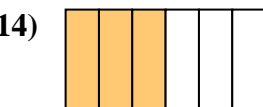
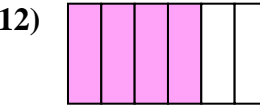
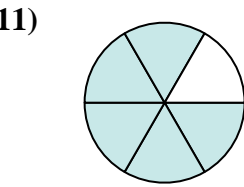
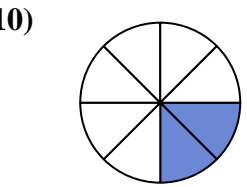
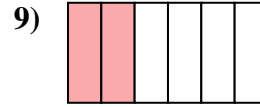
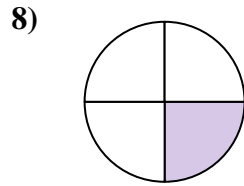
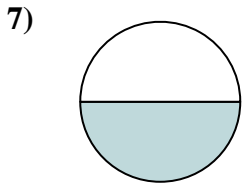
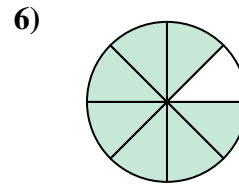
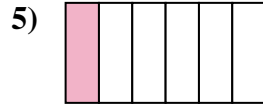
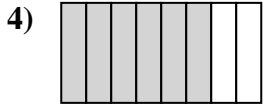
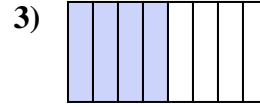
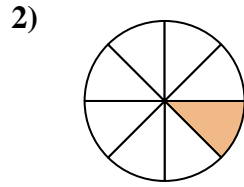
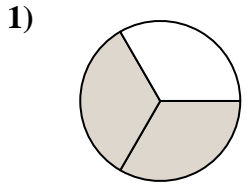


1. _____
2. _____
3. _____
4. _____
5. _____
6. _____
7. _____
8. _____
9. _____
10. _____
11. _____
12. _____
13. _____
14. _____
15. _____
16. _____
17. _____
18. _____



Escribe la cantidad sombreada como una fracción de la cantidad total.

Respuestas



1. $\frac{2}{3}$
2. $\frac{1}{8}$
3. $\frac{4}{8}$
4. $\frac{6}{8}$
5. $\frac{1}{6}$
6. $\frac{7}{8}$
7. $\frac{1}{2}$
8. $\frac{1}{4}$
9. $\frac{2}{6}$
10. $\frac{2}{8}$
11. $\frac{5}{6}$
12. $\frac{4}{6}$
13. $\frac{5}{8}$
14. $\frac{3}{6}$
15. $\frac{3}{8}$
16. $\frac{1}{3}$
17. $\frac{2}{4}$
18. $\frac{3}{4}$