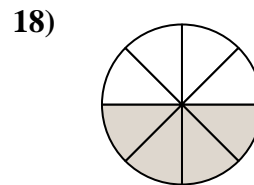
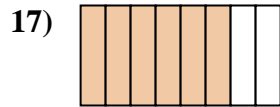
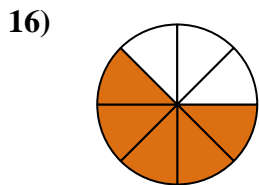
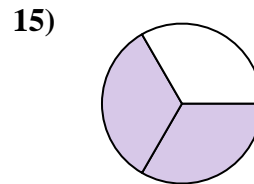
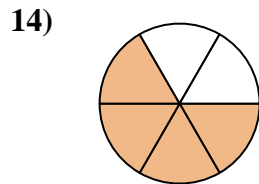
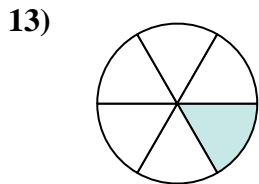
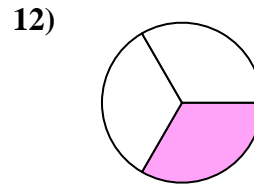
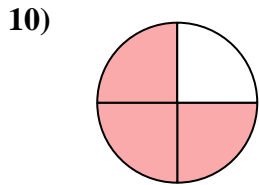
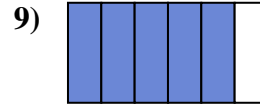
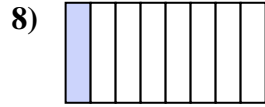
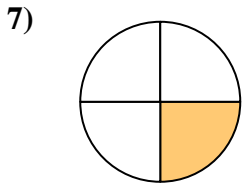
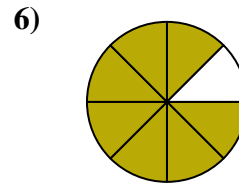
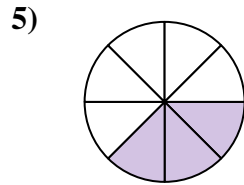
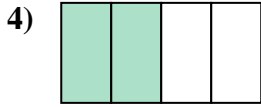
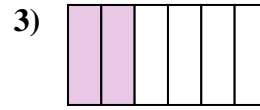
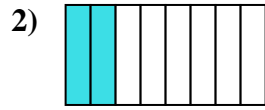




Escribe la cantidad sombreada como una fracción de la cantidad total.

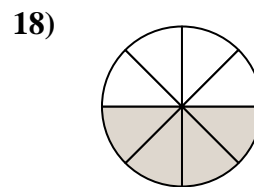
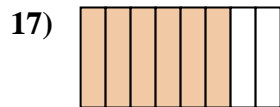
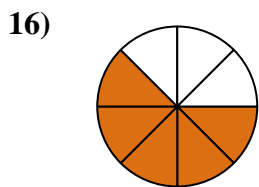
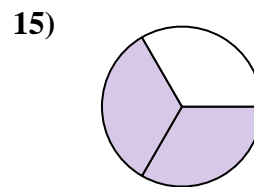
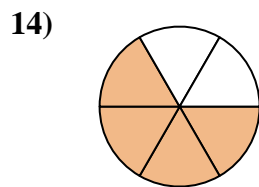
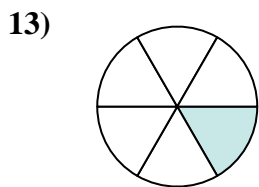
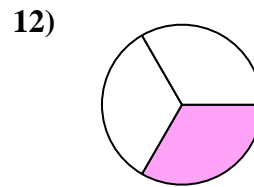
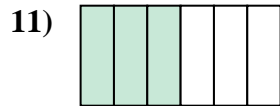
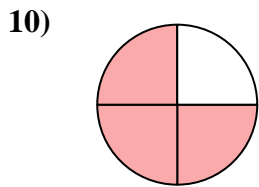
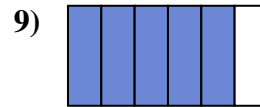
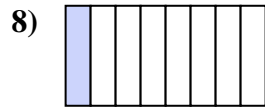
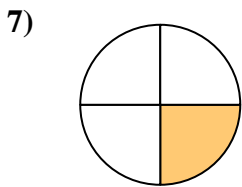
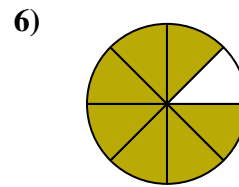
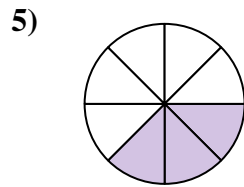
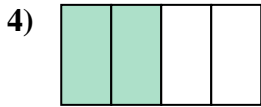
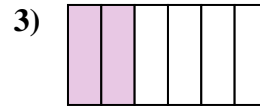


**Respuestas**

1. \_\_\_\_\_
2. \_\_\_\_\_
3. \_\_\_\_\_
4. \_\_\_\_\_
5. \_\_\_\_\_
6. \_\_\_\_\_
7. \_\_\_\_\_
8. \_\_\_\_\_
9. \_\_\_\_\_
10. \_\_\_\_\_
11. \_\_\_\_\_
12. \_\_\_\_\_
13. \_\_\_\_\_
14. \_\_\_\_\_
15. \_\_\_\_\_
16. \_\_\_\_\_
17. \_\_\_\_\_
18. \_\_\_\_\_



Escribe la cantidad sombreada como una fracción de la cantidad total.



**Respuestas**

1.  $\frac{1}{2}$

2.  $\frac{2}{8}$

3.  $\frac{2}{6}$

4.  $\frac{2}{4}$

5.  $\frac{3}{8}$

6.  $\frac{7}{8}$

7.  $\frac{1}{4}$

8.  $\frac{1}{8}$

9.  $\frac{5}{6}$

10.  $\frac{3}{4}$

11.  $\frac{3}{6}$

12.  $\frac{1}{3}$

13.  $\frac{1}{6}$

14.  $\frac{4}{6}$

15.  $\frac{2}{3}$

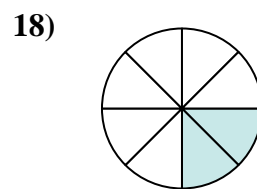
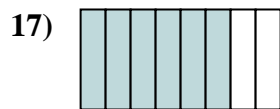
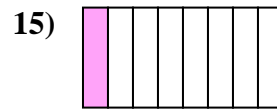
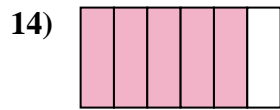
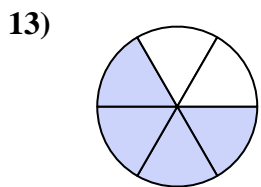
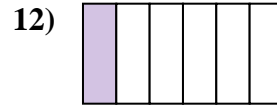
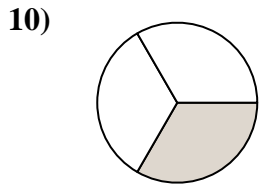
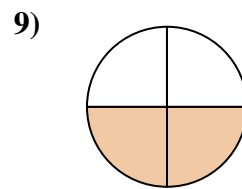
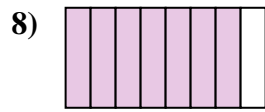
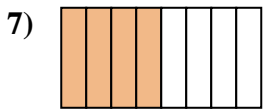
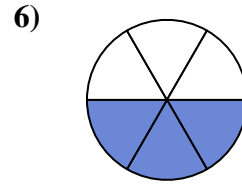
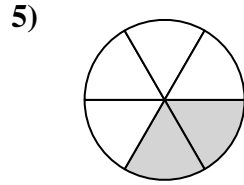
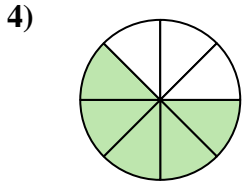
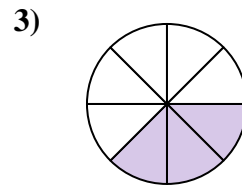
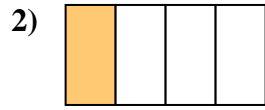
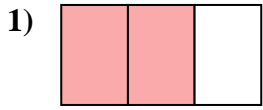
16.  $\frac{5}{8}$

17.  $\frac{6}{8}$

18.  $\frac{4}{8}$



Escribe la cantidad sombreada como una fracción de la cantidad total.

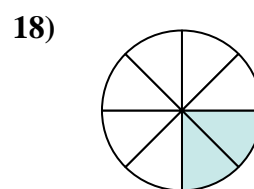
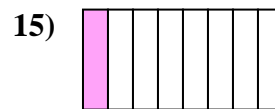
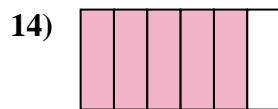
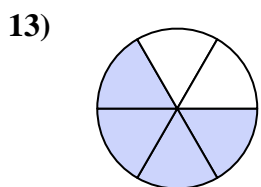
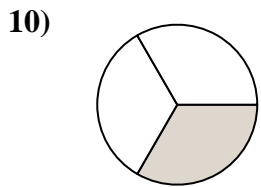
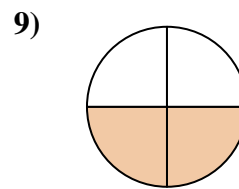
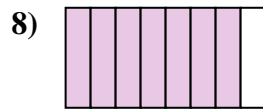
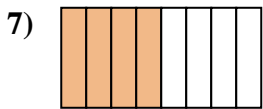
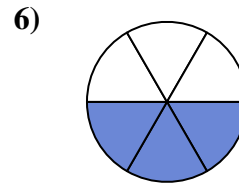
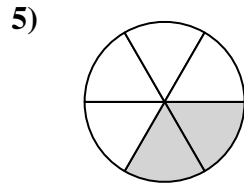
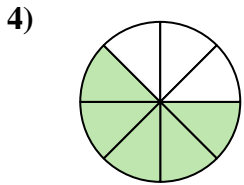
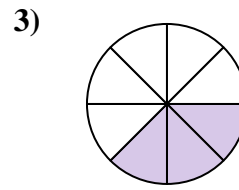
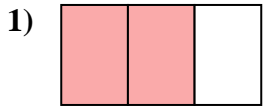


**Respuestas**

1. \_\_\_\_\_
2. \_\_\_\_\_
3. \_\_\_\_\_
4. \_\_\_\_\_
5. \_\_\_\_\_
6. \_\_\_\_\_
7. \_\_\_\_\_
8. \_\_\_\_\_
9. \_\_\_\_\_
10. \_\_\_\_\_
11. \_\_\_\_\_
12. \_\_\_\_\_
13. \_\_\_\_\_
14. \_\_\_\_\_
15. \_\_\_\_\_
16. \_\_\_\_\_
17. \_\_\_\_\_
18. \_\_\_\_\_



Escribe la cantidad sombreada como una fracción de la cantidad total.



**Respuestas**

1.  $\frac{2}{3}$

2.  $\frac{1}{4}$

3.  $\frac{3}{8}$

4.  $\frac{5}{8}$

5.  $\frac{2}{6}$

6.  $\frac{3}{6}$

7.  $\frac{4}{8}$

8.  $\frac{7}{8}$

9.  $\frac{2}{4}$

10.  $\frac{1}{3}$

11.  $\frac{1}{2}$

12.  $\frac{1}{6}$

13.  $\frac{4}{6}$

14.  $\frac{5}{6}$

15.  $\frac{1}{8}$

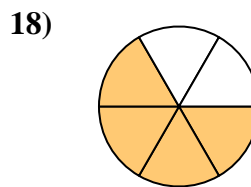
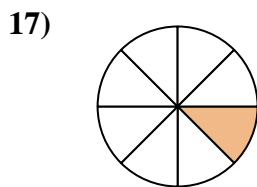
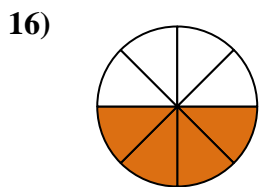
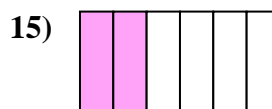

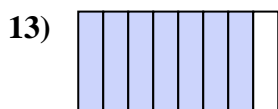
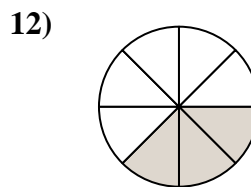

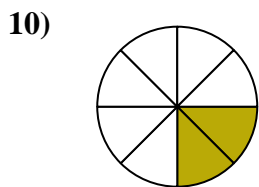
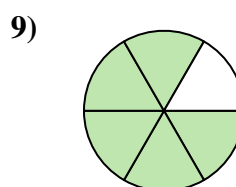
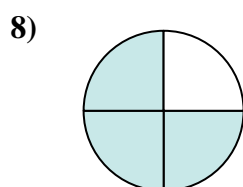
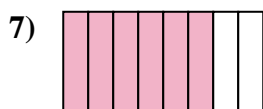
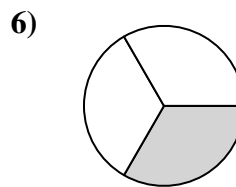

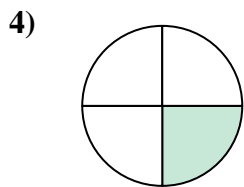
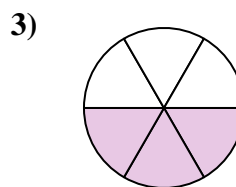
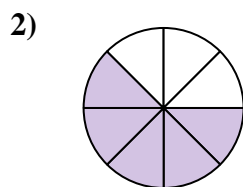
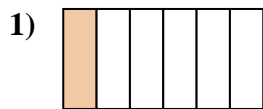
16.  $\frac{3}{4}$

17.  $\frac{6}{8}$

18.  $\frac{2}{8}$



Escribe la cantidad sombreada como una fracción de la cantidad total.

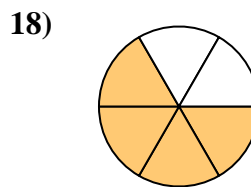
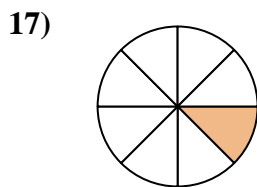
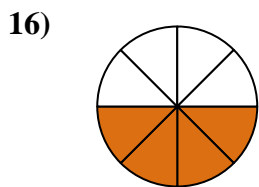
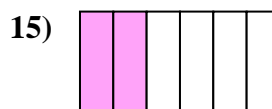

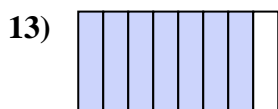
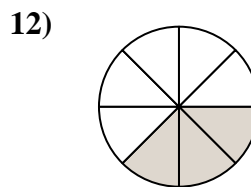

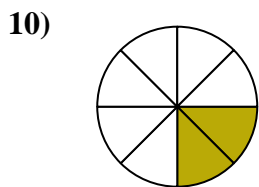
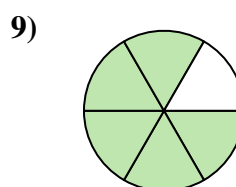
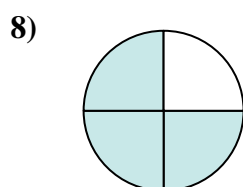
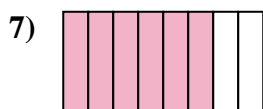
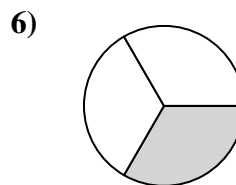

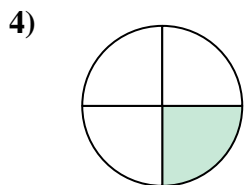
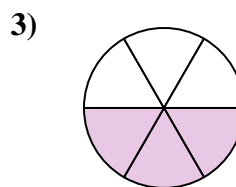
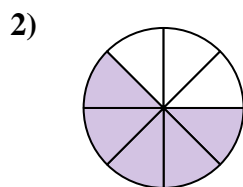
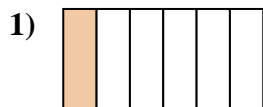


**Respuestas**

1. \_\_\_\_\_
2. \_\_\_\_\_
3. \_\_\_\_\_
4. \_\_\_\_\_
5. \_\_\_\_\_
6. \_\_\_\_\_
7. \_\_\_\_\_
8. \_\_\_\_\_
9. \_\_\_\_\_
10. \_\_\_\_\_
11. \_\_\_\_\_
12. \_\_\_\_\_
13. \_\_\_\_\_
14. \_\_\_\_\_
15. \_\_\_\_\_
16. \_\_\_\_\_
17. \_\_\_\_\_
18. \_\_\_\_\_



Escribe la cantidad sombreada como una fracción de la cantidad total.



**Respuestas**

1.  $\frac{1}{6}$

2.  $\frac{5}{8}$

3.  $\frac{3}{6}$

4.  $\frac{1}{4}$

5.  $\frac{1}{2}$

6.  $\frac{1}{3}$

7.  $\frac{6}{8}$

8.  $\frac{3}{4}$

9.  $\frac{5}{6}$

10.  $\frac{2}{8}$

11.  $\frac{2}{3}$

12.  $\frac{3}{8}$

13.  $\frac{7}{8}$

14.  $\frac{2}{4}$

15.  $\frac{2}{6}$

16.  $\frac{4}{8}$

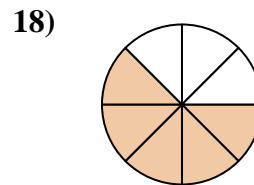
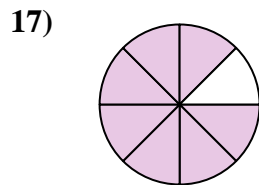
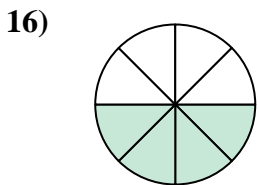
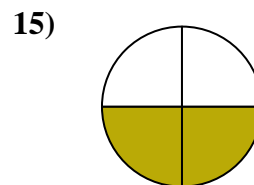
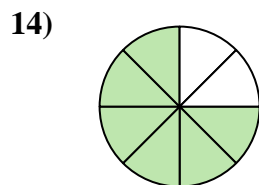
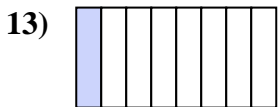
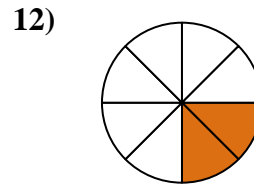
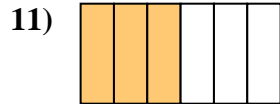
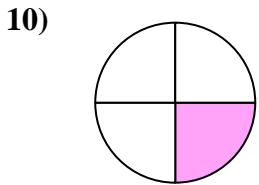
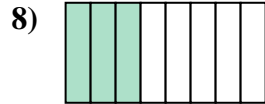
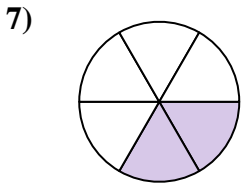
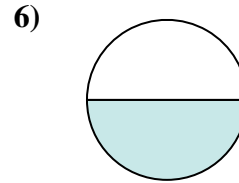
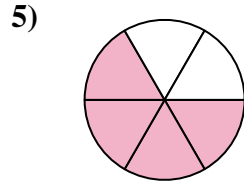
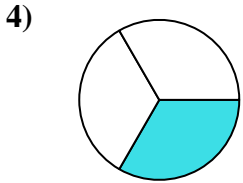
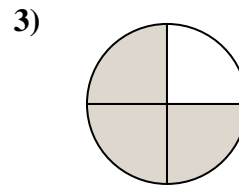
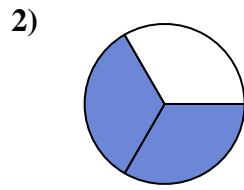
17.  $\frac{1}{8}$

18.  $\frac{4}{6}$



Escribe la cantidad sombreada como una fracción de la cantidad total.

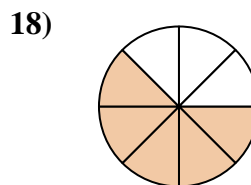
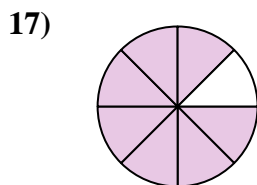
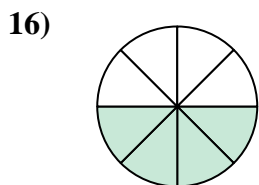
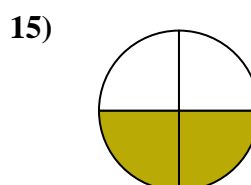
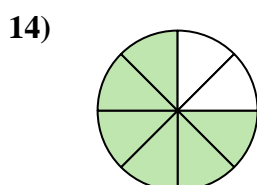
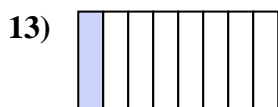
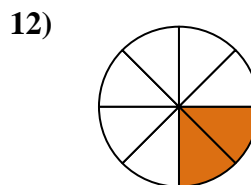
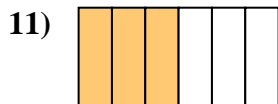
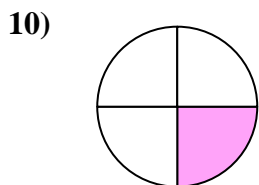
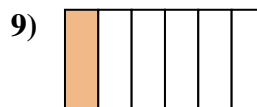
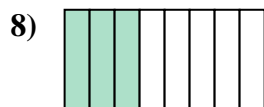
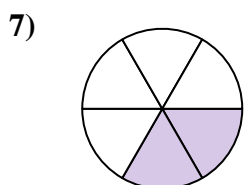
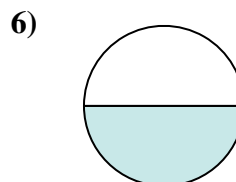
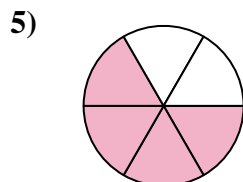
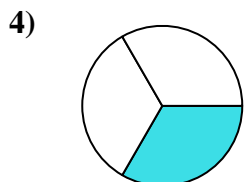
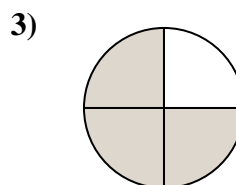
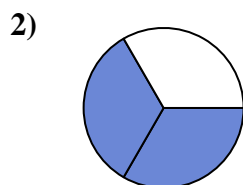
**Respuestas**



1. \_\_\_\_\_
2. \_\_\_\_\_
3. \_\_\_\_\_
4. \_\_\_\_\_
5. \_\_\_\_\_
6. \_\_\_\_\_
7. \_\_\_\_\_
8. \_\_\_\_\_
9. \_\_\_\_\_
10. \_\_\_\_\_
11. \_\_\_\_\_
12. \_\_\_\_\_
13. \_\_\_\_\_
14. \_\_\_\_\_
15. \_\_\_\_\_
16. \_\_\_\_\_
17. \_\_\_\_\_
18. \_\_\_\_\_



Escribe la cantidad sombreada como una fracción de la cantidad total.



**Respuestas**

1.  $\frac{5}{6}$

2.  $\frac{2}{3}$

3.  $\frac{3}{4}$

4.  $\frac{1}{3}$

5.  $\frac{4}{6}$

6.  $\frac{1}{2}$

7.  $\frac{2}{6}$

8.  $\frac{3}{8}$

9.  $\frac{1}{6}$

10.  $\frac{1}{4}$

11.  $\frac{3}{6}$

12.  $\frac{2}{8}$

13.  $\frac{1}{8}$

14.  $\frac{6}{8}$

15.  $\frac{2}{4}$

16.  $\frac{4}{8}$

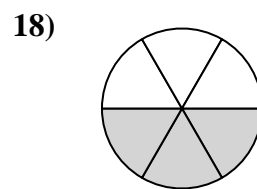
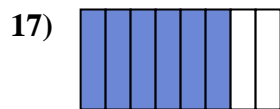
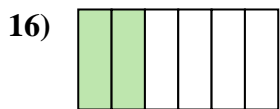
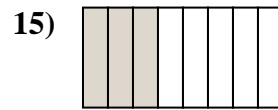
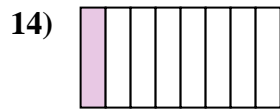
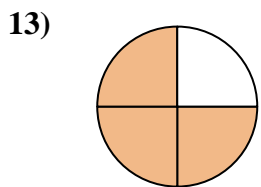
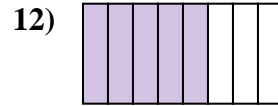
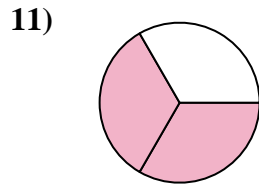
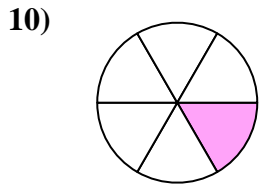
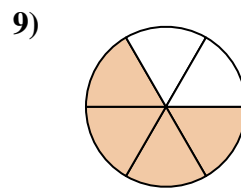
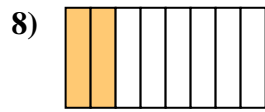
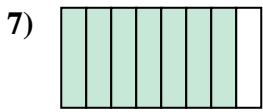
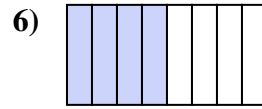
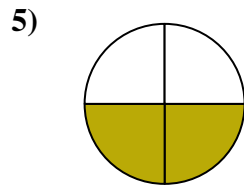
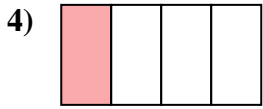
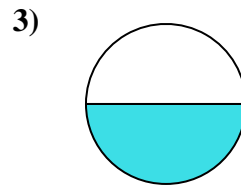
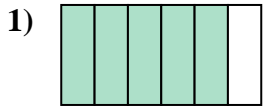
17.  $\frac{7}{8}$

18.  $\frac{5}{8}$





Escribe la cantidad sombreada como una fracción de la cantidad total.



**Respuestas**

1. \_\_\_\_\_

2. \_\_\_\_\_

3. \_\_\_\_\_

4. \_\_\_\_\_

5. \_\_\_\_\_

6. \_\_\_\_\_

7. \_\_\_\_\_

8. \_\_\_\_\_

9. \_\_\_\_\_

10. \_\_\_\_\_

11. \_\_\_\_\_

12. \_\_\_\_\_

13. \_\_\_\_\_

14. \_\_\_\_\_

15. \_\_\_\_\_

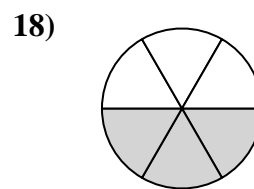
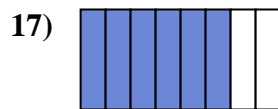
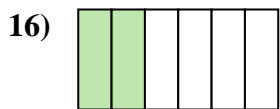
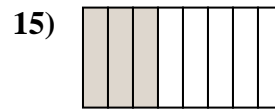
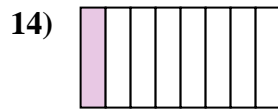
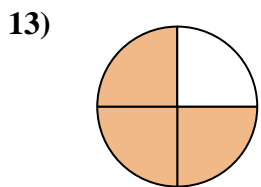
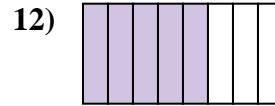
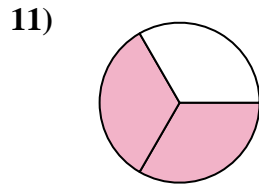
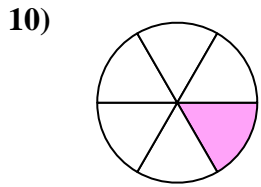
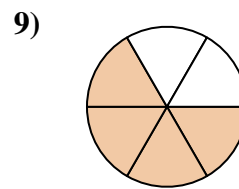
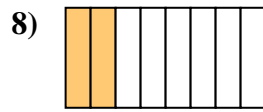
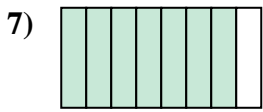
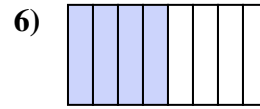
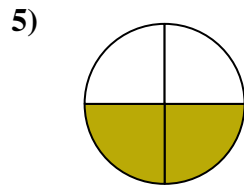
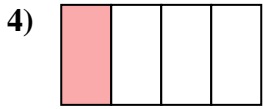
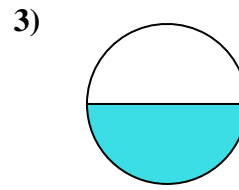
16. \_\_\_\_\_

17. \_\_\_\_\_

18. \_\_\_\_\_



Escribe la cantidad sombreada como una fracción de la cantidad total.



**Respuestas**

1.  $\frac{5}{6}$

2.  $\frac{1}{3}$

3.  $\frac{1}{2}$

4.  $\frac{1}{4}$

5.  $\frac{2}{4}$

6.  $\frac{4}{8}$

7.  $\frac{7}{8}$

8.  $\frac{2}{8}$

9.  $\frac{4}{6}$

10.  $\frac{1}{6}$

11.  $\frac{2}{3}$

12.  $\frac{5}{8}$

13.  $\frac{3}{4}$

14.  $\frac{1}{8}$

15.  $\frac{3}{8}$

16.  $\frac{2}{6}$

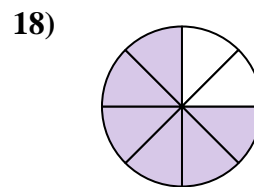
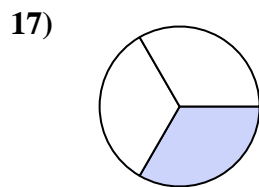
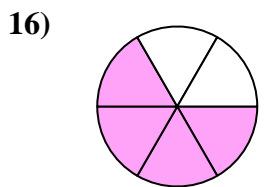
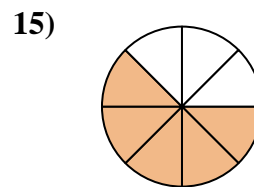
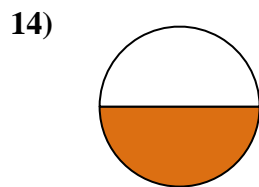
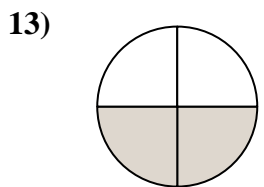
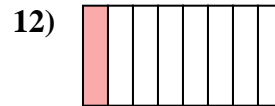

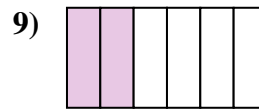
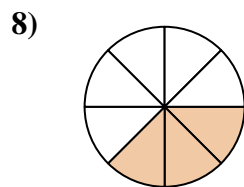
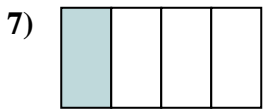
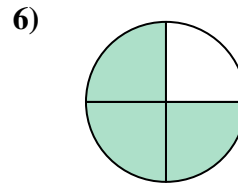
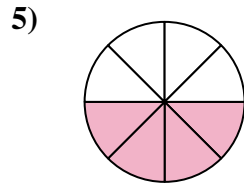
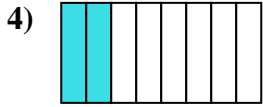
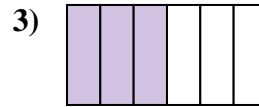
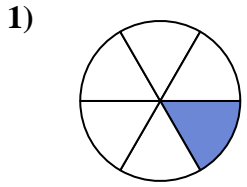
17.  $\frac{6}{8}$

18.  $\frac{3}{6}$



Escribe la cantidad sombreada como una fracción de la cantidad total.

**Respuestas**

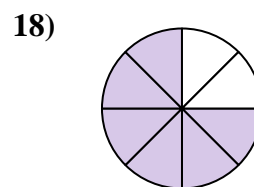
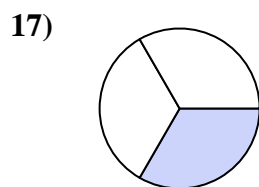
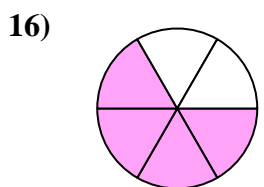
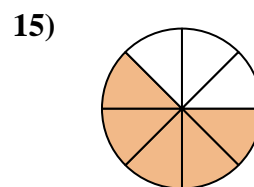
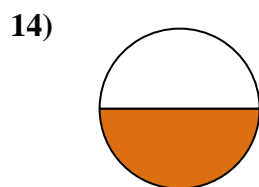
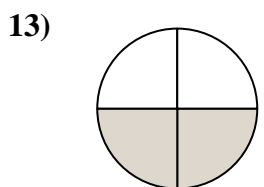
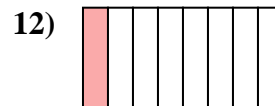

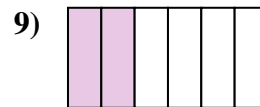
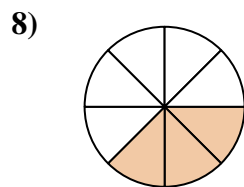

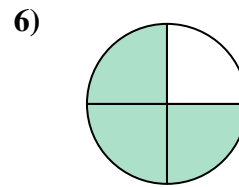
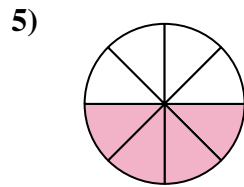
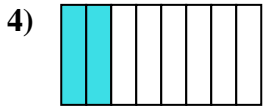
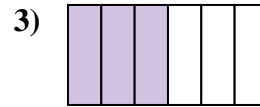
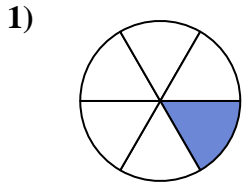


1. \_\_\_\_\_
2. \_\_\_\_\_
3. \_\_\_\_\_
4. \_\_\_\_\_
5. \_\_\_\_\_
6. \_\_\_\_\_
7. \_\_\_\_\_
8. \_\_\_\_\_
9. \_\_\_\_\_
10. \_\_\_\_\_
11. \_\_\_\_\_
12. \_\_\_\_\_
13. \_\_\_\_\_
14. \_\_\_\_\_
15. \_\_\_\_\_
16. \_\_\_\_\_
17. \_\_\_\_\_
18. \_\_\_\_\_



Escribe la cantidad sombreada como una fracción de la cantidad total.

**Respuestas**



1. 1/6

2. 5/6

3. 3/6

4. 2/8

5. 4/8

6. 3/4

7. 1/4

8. 3/8

9. 2/6

10. 2/3

11. 7/8

12. 1/8

13. 2/4

14. 1/2

15. 5/8

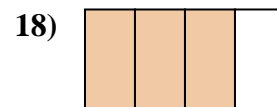
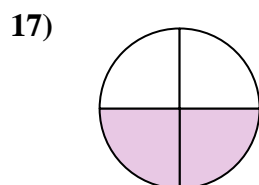

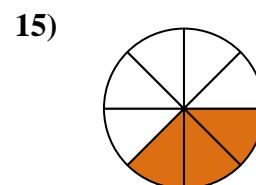
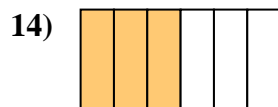

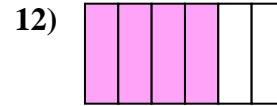
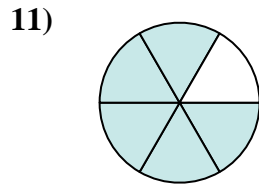
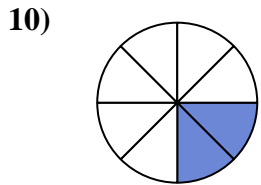
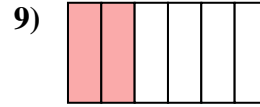
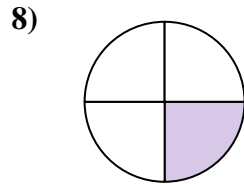
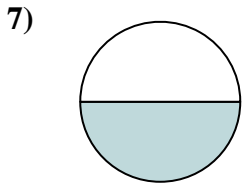
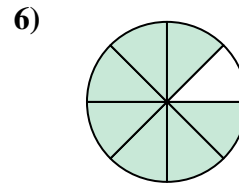
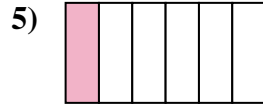
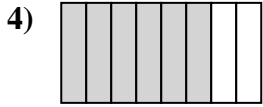
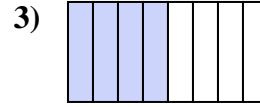
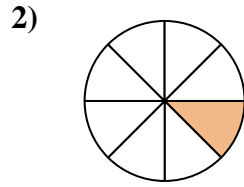
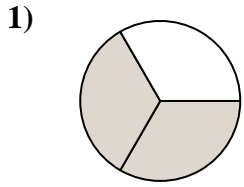
16. 4/6

17. 1/3

18. 6/8



Escribe la cantidad sombreada como una fracción de la cantidad total.



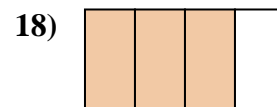
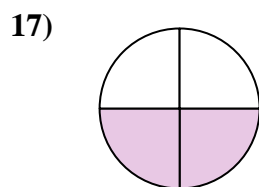

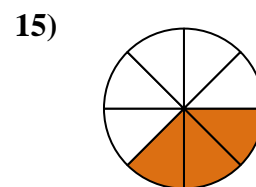
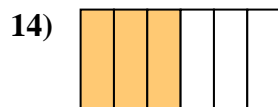

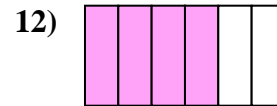
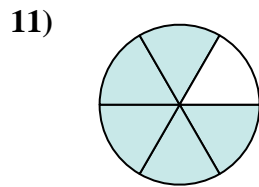
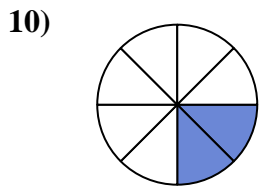
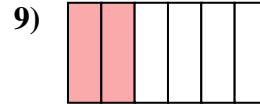
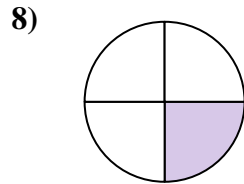
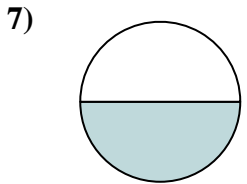
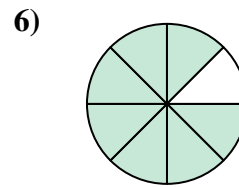
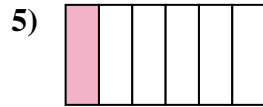
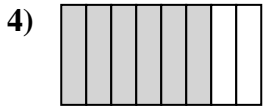
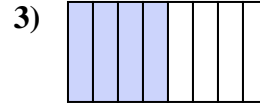
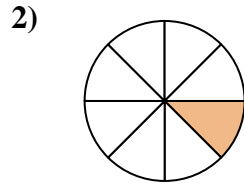
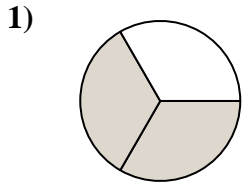
**Respuestas**

1. \_\_\_\_\_
2. \_\_\_\_\_
3. \_\_\_\_\_
4. \_\_\_\_\_
5. \_\_\_\_\_
6. \_\_\_\_\_
7. \_\_\_\_\_
8. \_\_\_\_\_
9. \_\_\_\_\_
10. \_\_\_\_\_
11. \_\_\_\_\_
12. \_\_\_\_\_
13. \_\_\_\_\_
14. \_\_\_\_\_
15. \_\_\_\_\_
16. \_\_\_\_\_
17. \_\_\_\_\_
18. \_\_\_\_\_



Escribe la cantidad sombreada como una fracción de la cantidad total.

**Respuestas**



1.  $\frac{2}{3}$

2.  $\frac{1}{8}$

3.  $\frac{4}{8}$

4.  $\frac{6}{8}$

5.  $\frac{1}{6}$

6.  $\frac{7}{8}$

7.  $\frac{1}{2}$

8.  $\frac{1}{4}$

9.  $\frac{2}{6}$

10.  $\frac{2}{8}$

11.  $\frac{5}{6}$

12.  $\frac{4}{6}$

13.  $\frac{5}{8}$

14.  $\frac{3}{6}$

15.  $\frac{3}{8}$

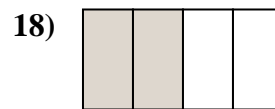
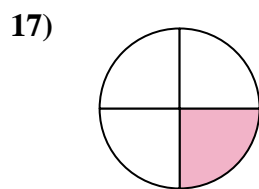
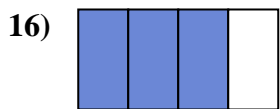
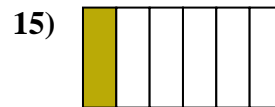
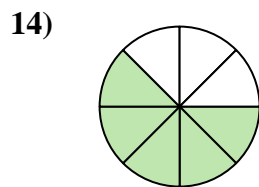
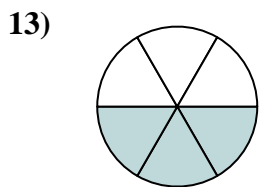
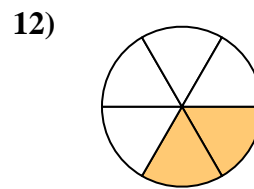
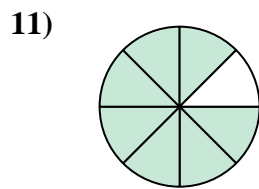
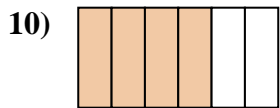

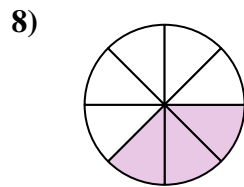
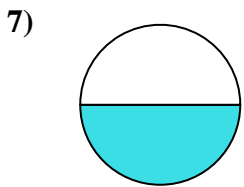
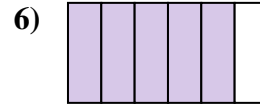
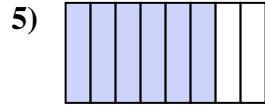
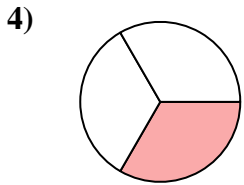
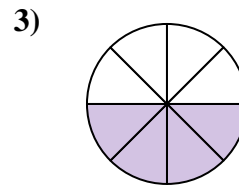
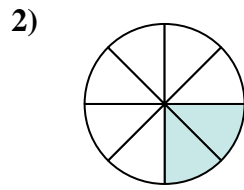
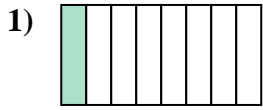
16.  $\frac{1}{3}$

17.  $\frac{2}{4}$

18.  $\frac{3}{4}$



Escribe la cantidad sombreada como una fracción de la cantidad total.


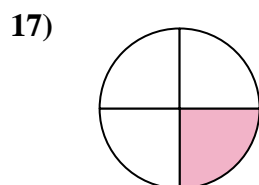

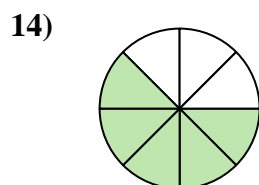
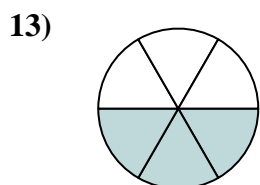
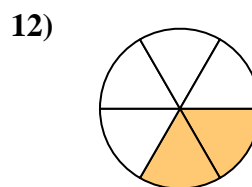
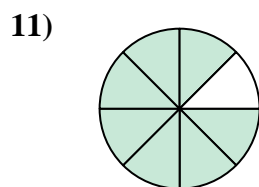
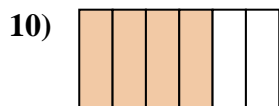

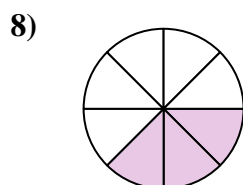
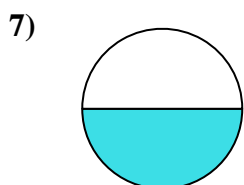
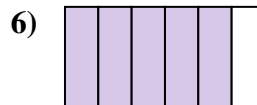
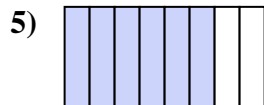
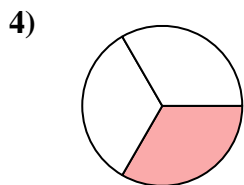
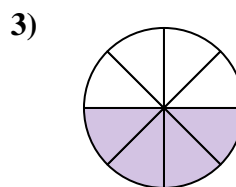
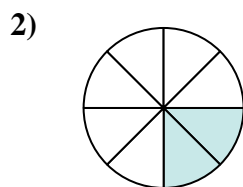


**Respuestas**

1. \_\_\_\_\_
2. \_\_\_\_\_
3. \_\_\_\_\_
4. \_\_\_\_\_
5. \_\_\_\_\_
6. \_\_\_\_\_
7. \_\_\_\_\_
8. \_\_\_\_\_
9. \_\_\_\_\_
10. \_\_\_\_\_
11. \_\_\_\_\_
12. \_\_\_\_\_
13. \_\_\_\_\_
14. \_\_\_\_\_
15. \_\_\_\_\_
16. \_\_\_\_\_
17. \_\_\_\_\_
18. \_\_\_\_\_



Escribe la cantidad sombreada como una fracción de la cantidad total.



**Respuestas**

1.  $\frac{1}{8}$

2.  $\frac{2}{8}$

3.  $\frac{4}{8}$

4.  $\frac{1}{3}$

5.  $\frac{6}{8}$

6.  $\frac{5}{6}$

7.  $\frac{1}{2}$

8.  $\frac{3}{8}$

9.  $\frac{2}{3}$

10.  $\frac{4}{6}$

11.  $\frac{7}{8}$

12.  $\frac{2}{6}$

13.  $\frac{3}{6}$

14.  $\frac{5}{8}$

15.  $\frac{1}{6}$

16.  $\frac{3}{4}$

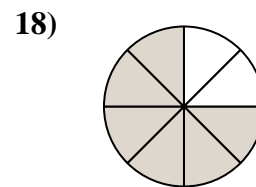
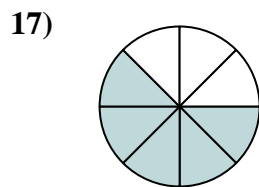
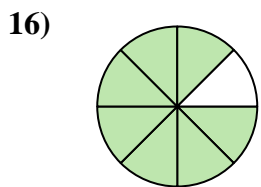
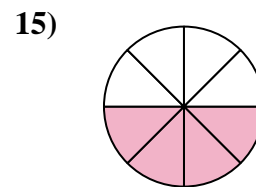
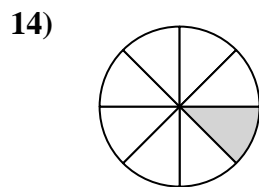
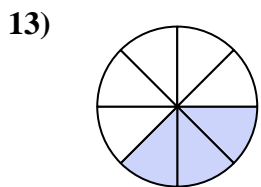
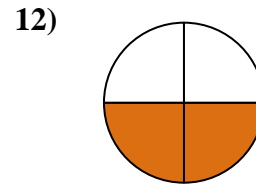
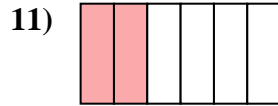
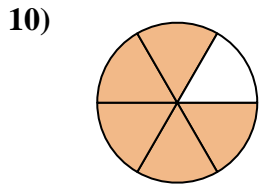
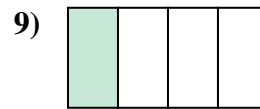
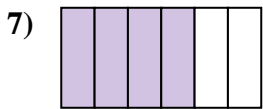
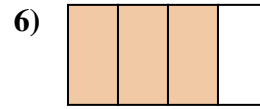
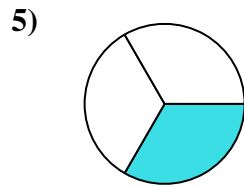

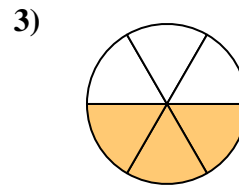
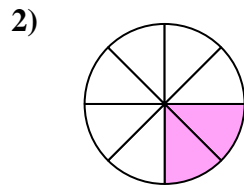
17.  $\frac{1}{4}$

18.  $\frac{2}{4}$





Escribe la cantidad sombreada como una fracción de la cantidad total.

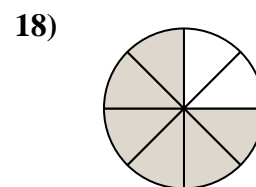
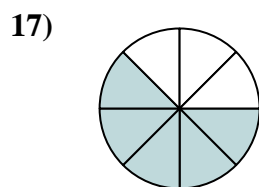
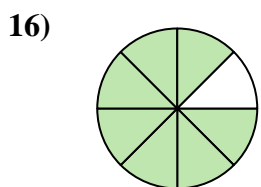
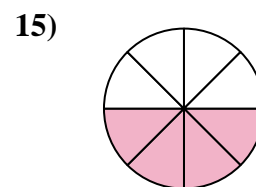
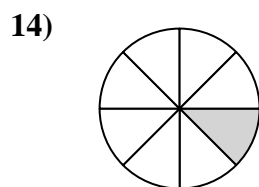
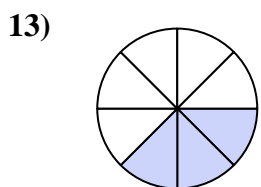
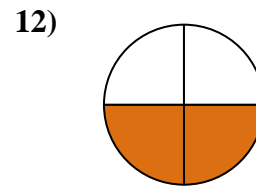
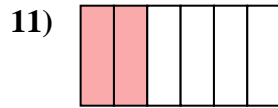
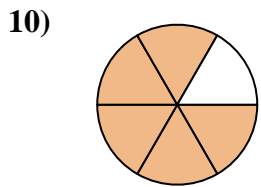
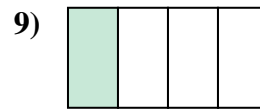
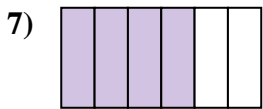
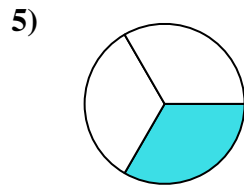

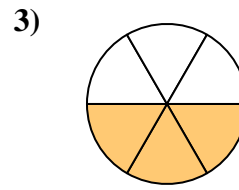
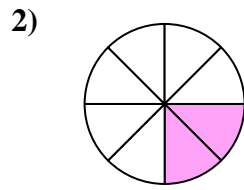


**Respuestas**

1. \_\_\_\_\_
2. \_\_\_\_\_
3. \_\_\_\_\_
4. \_\_\_\_\_
5. \_\_\_\_\_
6. \_\_\_\_\_
7. \_\_\_\_\_
8. \_\_\_\_\_
9. \_\_\_\_\_
10. \_\_\_\_\_
11. \_\_\_\_\_
12. \_\_\_\_\_
13. \_\_\_\_\_
14. \_\_\_\_\_
15. \_\_\_\_\_
16. \_\_\_\_\_
17. \_\_\_\_\_
18. \_\_\_\_\_



Escribe la cantidad sombreada como una fracción de la cantidad total.



**Respuestas**

1.  $\frac{1}{2}$

2.  $\frac{2}{8}$

3.  $\frac{3}{6}$

4.  $\frac{2}{3}$

5.  $\frac{1}{3}$

6.  $\frac{3}{4}$

7.  $\frac{4}{6}$

8.  $\frac{1}{6}$

9.  $\frac{1}{4}$

10.  $\frac{5}{6}$

11.  $\frac{2}{6}$

12.  $\frac{2}{4}$

13.  $\frac{3}{8}$

14.  $\frac{1}{8}$

15.  $\frac{4}{8}$

16.  $\frac{7}{8}$

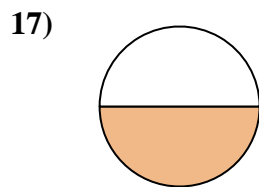
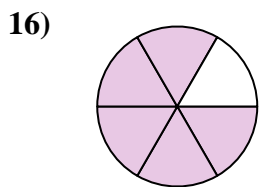
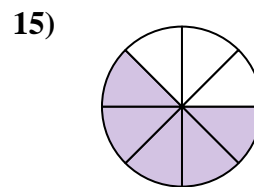
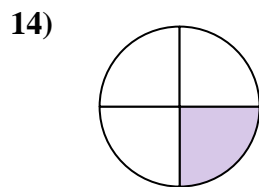
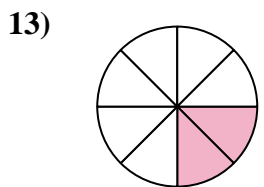
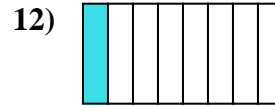
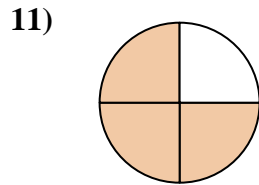
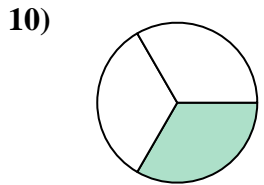
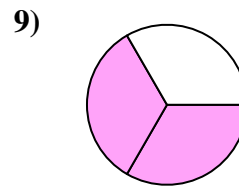
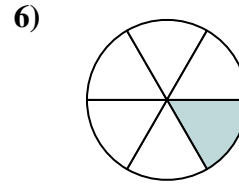
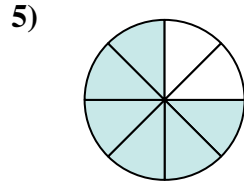
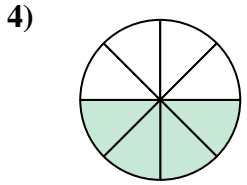
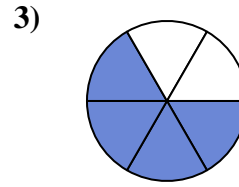
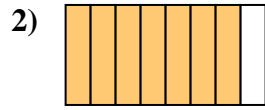
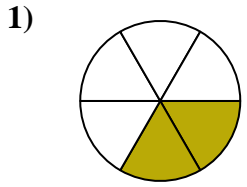
17.  $\frac{5}{8}$

18.  $\frac{6}{8}$



Escribe la cantidad sombreada como una fracción de la cantidad total.

**Respuestas**

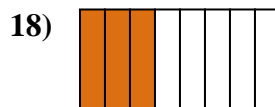
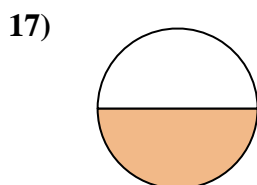
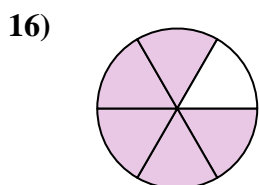
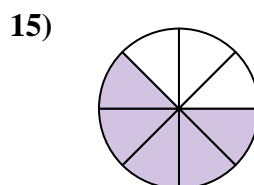
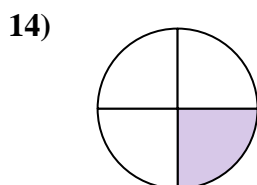
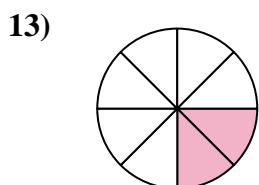
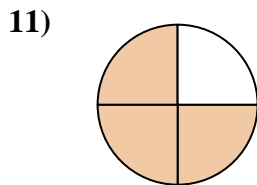
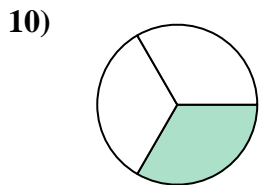
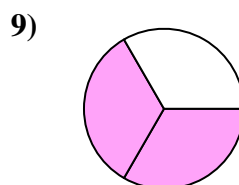
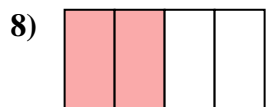
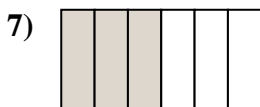
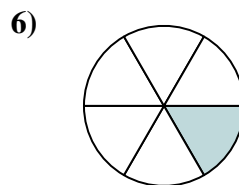
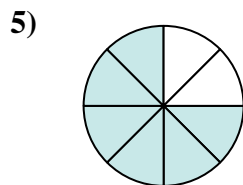

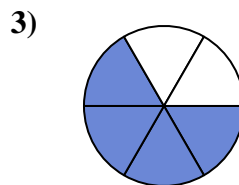
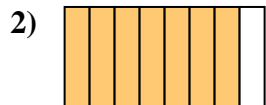
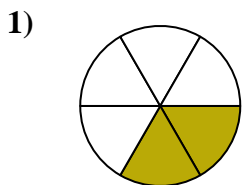


1. \_\_\_\_\_
2. \_\_\_\_\_
3. \_\_\_\_\_
4. \_\_\_\_\_
5. \_\_\_\_\_
6. \_\_\_\_\_
7. \_\_\_\_\_
8. \_\_\_\_\_
9. \_\_\_\_\_
10. \_\_\_\_\_
11. \_\_\_\_\_
12. \_\_\_\_\_
13. \_\_\_\_\_
14. \_\_\_\_\_
15. \_\_\_\_\_
16. \_\_\_\_\_
17. \_\_\_\_\_
18. \_\_\_\_\_



Escribe la cantidad sombreada como una fracción de la cantidad total.

**Respuestas**



1.  $\frac{2}{6}$

2.  $\frac{7}{8}$

3.  $\frac{4}{6}$

4.  $\frac{4}{8}$

5.  $\frac{6}{8}$

6.  $\frac{1}{6}$

7.  $\frac{3}{6}$

8.  $\frac{2}{4}$

9.  $\frac{2}{3}$

10.  $\frac{1}{3}$

11.  $\frac{3}{4}$

12.  $\frac{1}{8}$

13.  $\frac{2}{8}$

14.  $\frac{1}{4}$

15.  $\frac{5}{8}$

16.  $\frac{5}{6}$

17.  $\frac{1}{2}$

18.  $\frac{3}{8}$