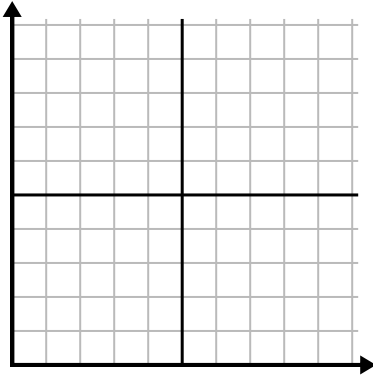




Complete la cuadrícula utilizando la gráfica.

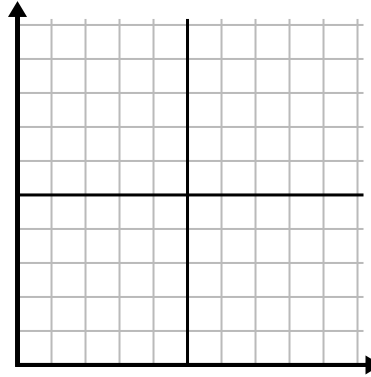
1)

Hora	1	2	3	4	5	6	7
Cantidad vendida	10	6	5	4	1	8	9



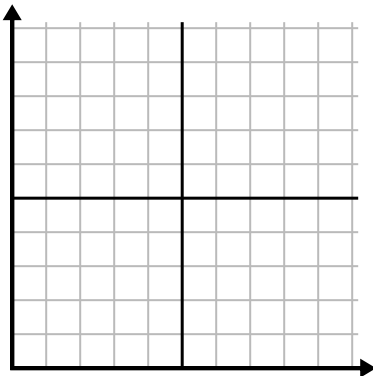
2)

Semana	1	2	3	4	5	6	7
Agua usada (galones)	30	50	40	100	80	10	20



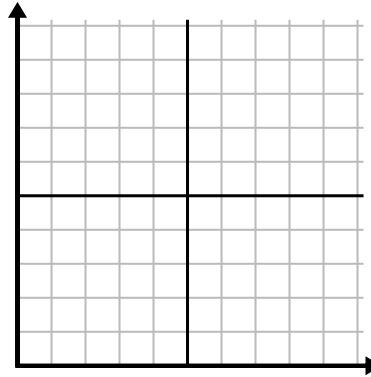
3)

Año	1	2	3	4	5	6	7
Cartuchos de tinta usados	8	18	6	20	16	10	14



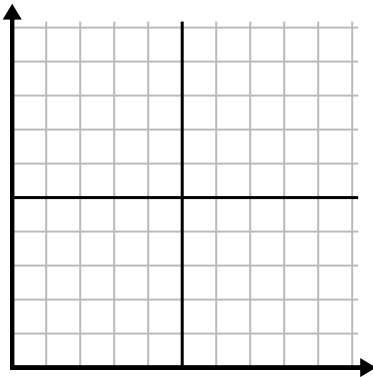
4)

Día	1	2	3	4	5	6	7
Comidas vendidas	900	400	700	500	1,000	600	100



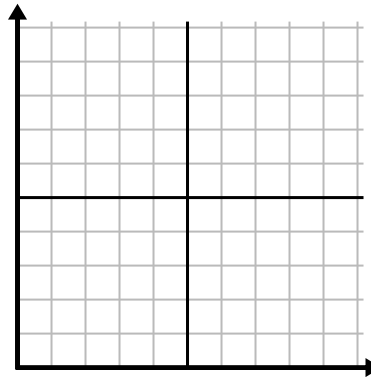
5)

Día	1	2	3	4	5	6
Mensajes enviados	40	35	30	50	10	20



6)

Mes	1	2	3	4	5	6
Precio de la factura eléctrica	25	150	175	250	200	50

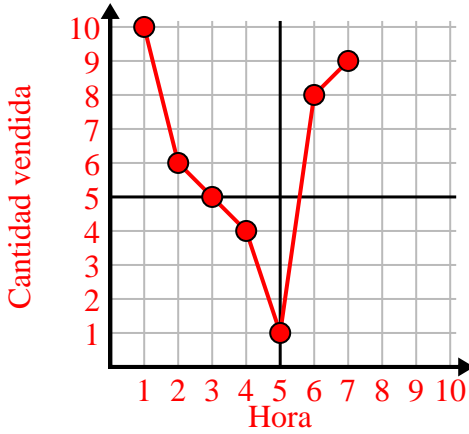




Complete la cuadrícula utilizando la gráfica.

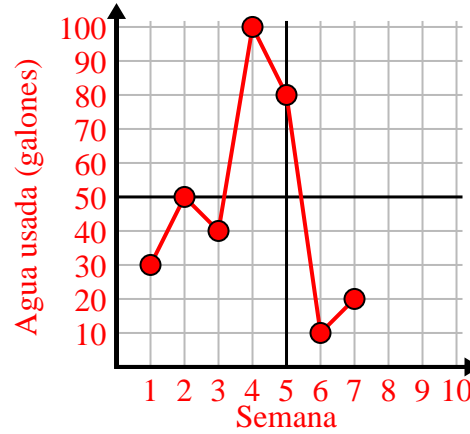
1)

Hora	1	2	3	4	5	6	7
Cantidad vendida	10	6	5	4	1	8	9



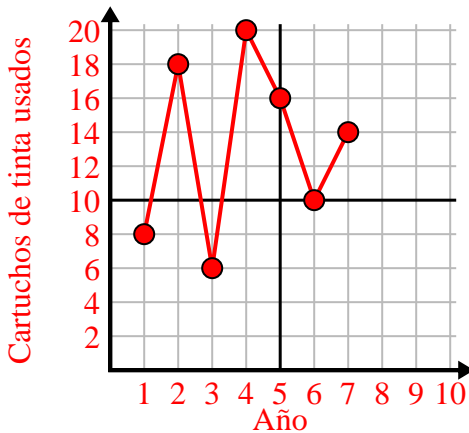
2)

Semana	1	2	3	4	5	6	7
Agua usada (galones)	30	50	40	100	80	10	20



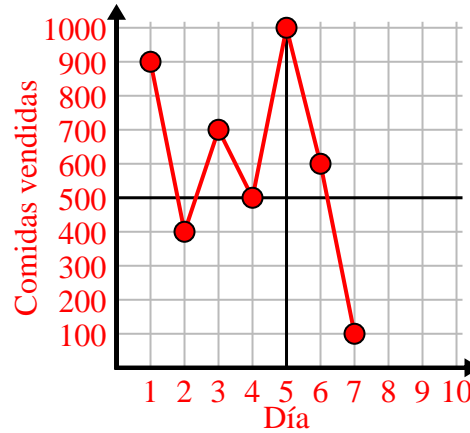
3)

Año	1	2	3	4	5	6	7
Cartuchos de tinta usados	8	18	6	20	16	10	14



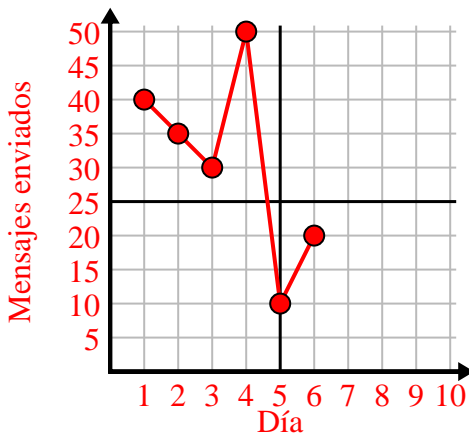
4)

Día	1	2	3	4	5	6	7
Comidas vendidas	900	400	700	500	1,000	600	100



5)

Día	1	2	3	4	5	6
Mensajes enviados	40	35	30	50	10	20



6)

Mes	1	2	3	4	5	6
Precio de la factura eléctrica	25	150	175	250	200	50

