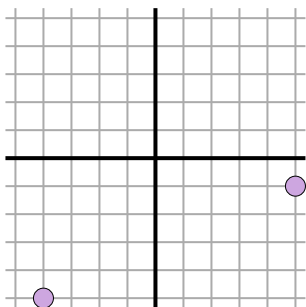
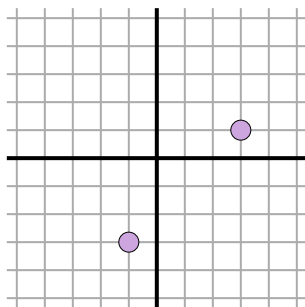


**Encuentra la distancia entre puntos. Redondea tu respuesta al decimal más cercano.****Respuestas**

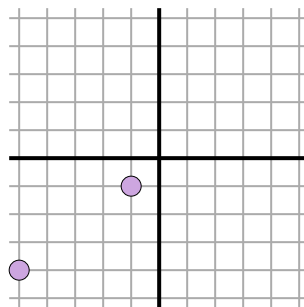
Ej)



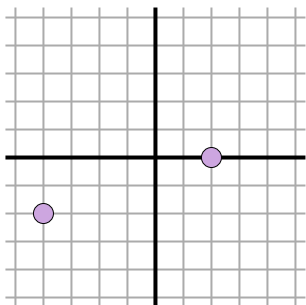
1)



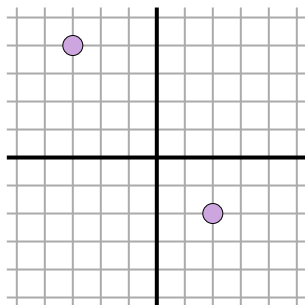
2)



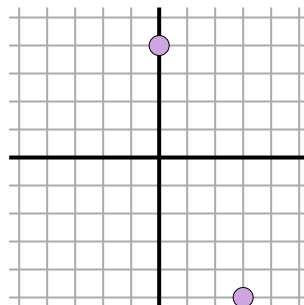
3)



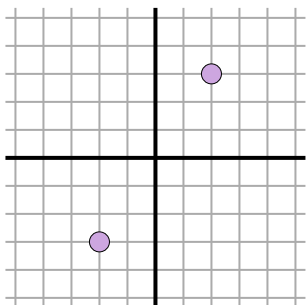
4)



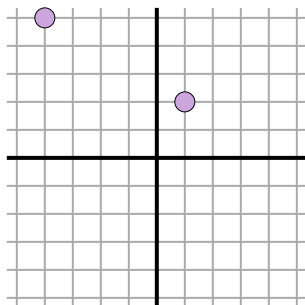
5)



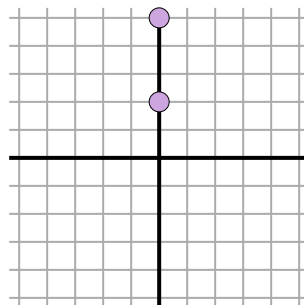
6)



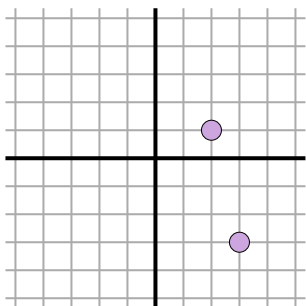
7)



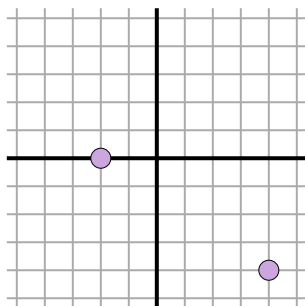
8)



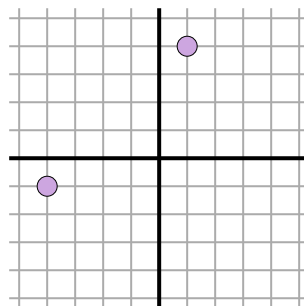
9)



10)



11)

Ej. **9.8**

1. _____

2. _____

3. _____

4. _____

5. _____

6. _____

7. _____

8. _____

9. _____

10. _____

11. _____



Respuestas

$$\sqrt{(-4-1)^2 + (-1-4)^2}$$
$$\sqrt{(25) + (25)}$$

11. **7.1**