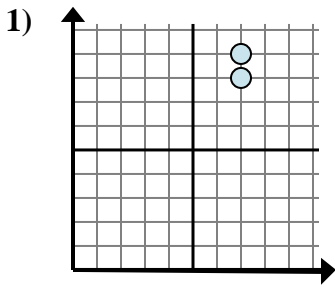


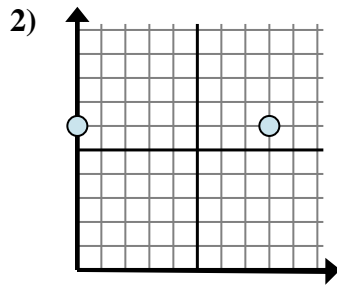


Determine qué expresión muestra mejor la distancia entre los dos puntos.

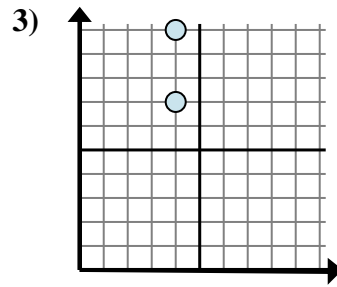
Respuestas



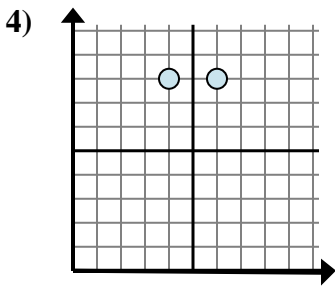
- A. $7 - 9$
- B. $8 - 9$
- C. $9 - 8$
- D. $7 - 7$



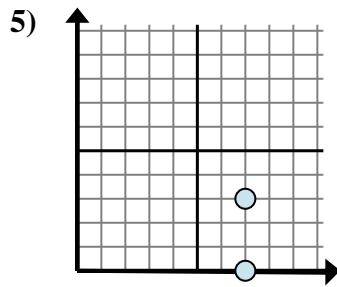
- A. $8 - 6$
- B. $8 - 0$
- C. $0 - 8$
- D. $6 - 6$



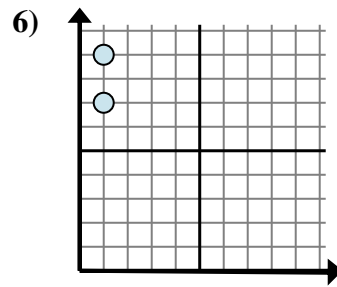
- A. $7 - 10$
- B. $4 - 7$
- C. $10 - 7$
- D. $4 - 4$



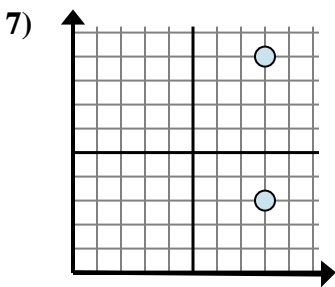
- A. $8 - 8$
- B. $4 - 8$
- C. $6 - 4$
- D. $6 - 8$



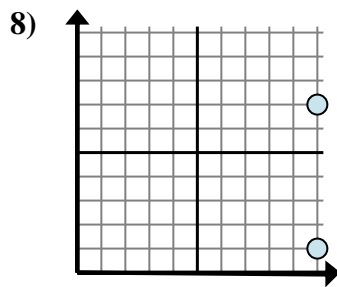
- A. $7 - 3$
- B. $3 - 0$
- C. $0 - 3$
- D. $3 - 7$



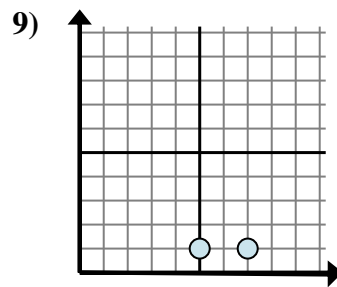
- A. $9 - 7$
- B. $7 - 9$
- C. $1 - 1$
- D. $1 - 1$



- A. $8 - 8$
- B. $3 - 9$
- C. $9 - 3$
- D. $9 - 8$



- A. $1 - 7$
- B. $7 - 10$
- C. $7 - 1$
- D. $1 - 10$

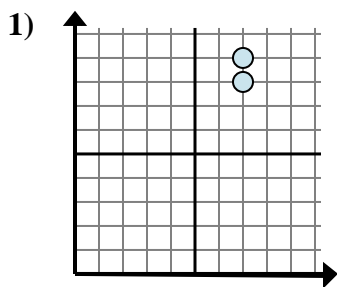


- A. $7 - 1$
- B. $1 - 1$
- C. $1 - 7$
- D. $7 - 5$

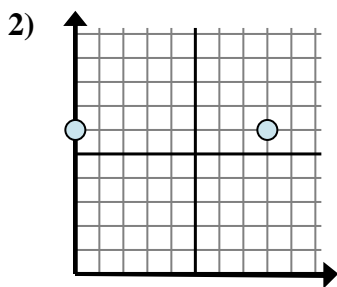
1. _____
2. _____
3. _____
4. _____
5. _____
6. _____
7. _____
8. _____
9. _____



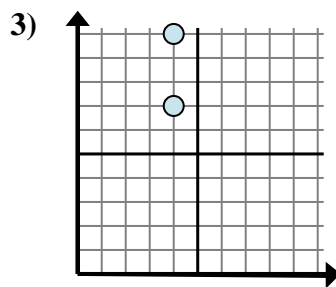
Determine qué expresión muestra mejor la distancia entre los dos puntos.



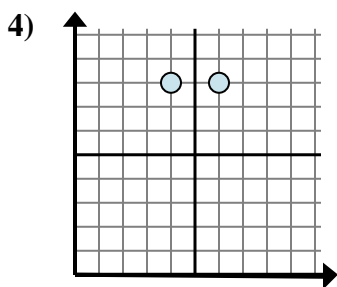
- A. $7 - 9$
- B. $8 - 9$
- C. $9 - 8$
- D. $7 - 7$



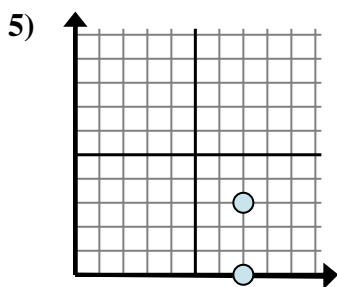
- A. $8 - 6$
- B. $8 - 0$
- C. $0 - 8$
- D. $6 - 6$



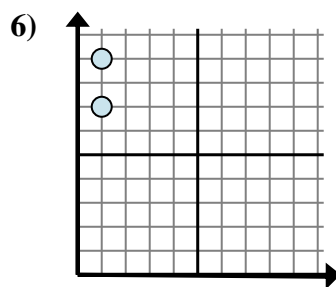
- A. $7 - 10$
- B. $4 - 7$
- C. $10 - 7$
- D. $4 - 4$



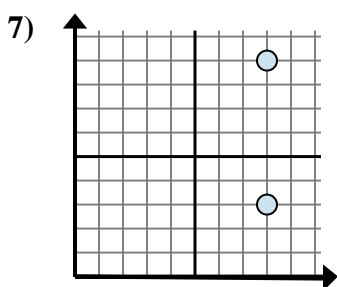
- A. $8 - 8$
- B. $4 - 8$
- C. $6 - 4$
- D. $6 - 8$



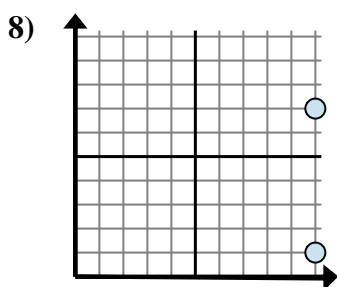
- A. $7 - 3$
- B. $3 - 0$
- C. $0 - 3$
- D. $3 - 7$



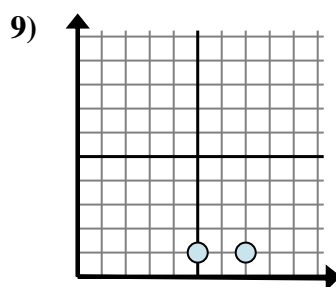
- A. $9 - 7$
- B. $7 - 9$
- C. $1 - 1$
- D. $1 - 1$



- A. $8 - 8$
- B. $3 - 9$
- C. $9 - 3$
- D. $9 - 8$



- A. $1 - 7$
- B. $7 - 10$
- C. $7 - 1$
- D. $1 - 10$



- A. $7 - 1$
- B. $1 - 1$
- C. $1 - 7$
- D. $7 - 5$

Respuestas

- 1. **C**
- 2. **B**
- 3. **C**
- 4. **C**
- 5. **B**
- 6. **A**
- 7. **C**
- 8. **C**
- 9. **D**