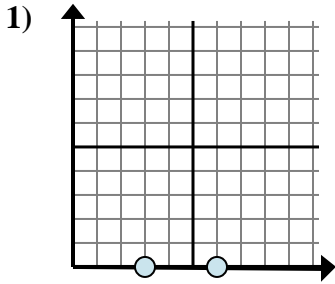


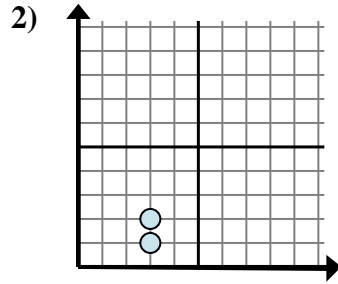


Determine qué expresión muestra mejor la distancia entre los dos puntos.

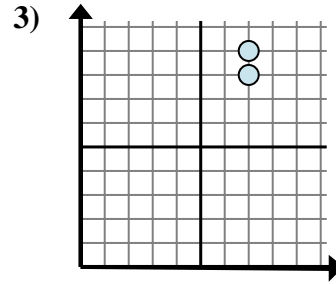
**Respuestas**



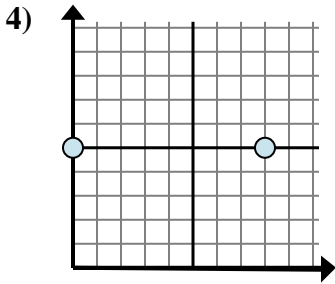
- A.  $0 - 6$
- B.  $3 - 0$
- C.  $6 - 0$
- D.  $6 - 3$



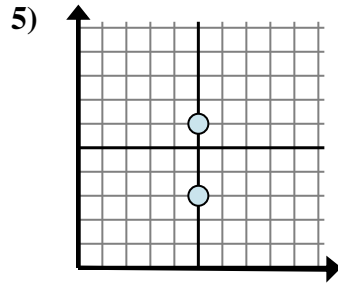
- A.  $3 - 3$
- B.  $3 - 2$
- C.  $3 - 3$
- D.  $2 - 1$



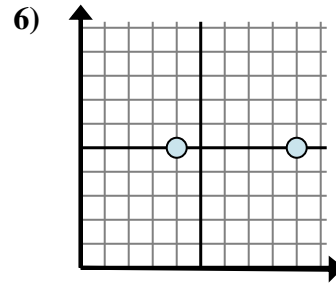
- A.  $7 - 8$
- B.  $7 - 7$
- C.  $9 - 8$
- D.  $8 - 7$



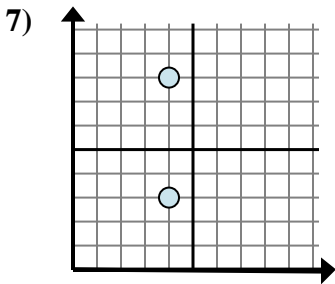
- A.  $8 - 0$
- B.  $5 - 5$
- C.  $5 - 8$
- D.  $8 - 5$



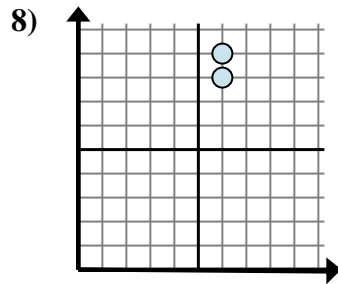
- A.  $6 - 5$
- B.  $6 - 3$
- C.  $5 - 5$
- D.  $5 - 5$



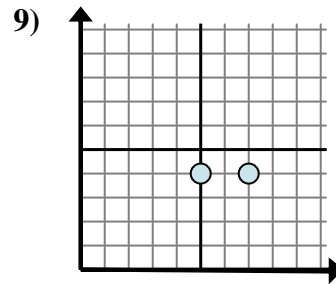
- A.  $5 - 5$
- B.  $9 - 4$
- C.  $9 - 5$
- D.  $4 - 9$



- A.  $4 - 3$
- B.  $8 - 3$
- C.  $4 - 4$
- D.  $4 - 4$



- A.  $9 - 8$
- B.  $6 - 6$
- C.  $8 - 6$
- D.  $9 - 6$



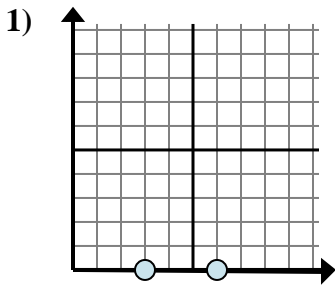
- A.  $5 - 4$
- B.  $4 - 4$
- C.  $7 - 5$
- D.  $4 - 7$

- 1. \_\_\_\_\_
- 2. \_\_\_\_\_
- 3. \_\_\_\_\_
- 4. \_\_\_\_\_
- 5. \_\_\_\_\_
- 6. \_\_\_\_\_
- 7. \_\_\_\_\_
- 8. \_\_\_\_\_
- 9. \_\_\_\_\_

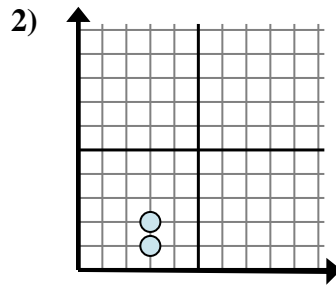


Determine qué expresión muestra mejor la distancia entre los dos puntos.

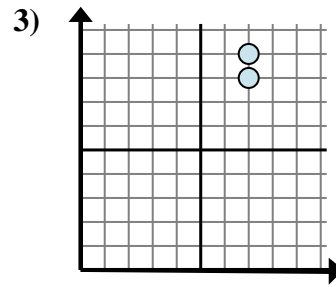
**Respuestas**



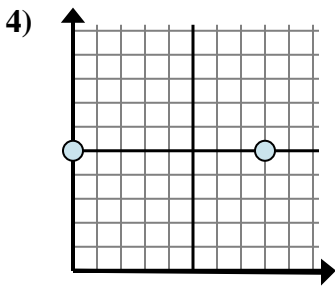
- A.  $0 - 6$
- B.  $3 - 0$
- C.  $6 - 0$
- D.  $6 - 3$



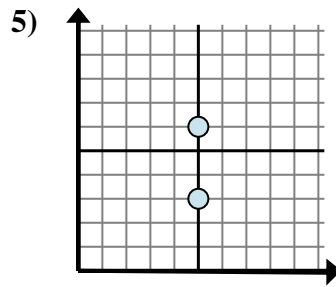
- A.  $3 - 3$
- B.  $3 - 2$
- C.  $3 - 3$
- D.  $2 - 1$



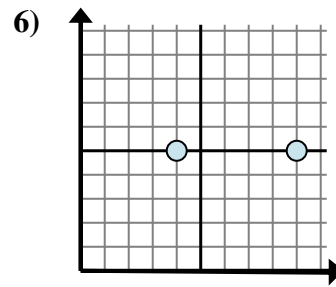
- A.  $7 - 8$
- B.  $7 - 7$
- C.  $9 - 8$
- D.  $8 - 7$



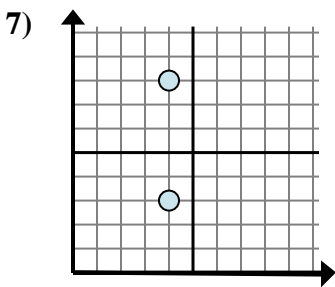
- A.  $8 - 0$
- B.  $5 - 5$
- C.  $5 - 8$
- D.  $8 - 5$



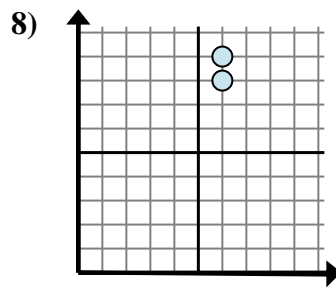
- A.  $6 - 5$
- B.  $6 - 3$
- C.  $5 - 5$
- D.  $5 - 5$



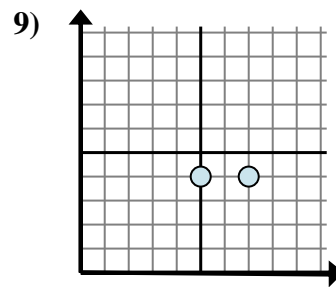
- A.  $5 - 5$
- B.  $9 - 4$
- C.  $9 - 5$
- D.  $4 - 9$



- A.  $4 - 3$
- B.  $8 - 3$
- C.  $4 - 4$
- D.  $4 - 4$



- A.  $9 - 8$
- B.  $6 - 6$
- C.  $8 - 6$
- D.  $9 - 6$



- A.  $5 - 4$
- B.  $4 - 4$
- C.  $7 - 5$
- D.  $4 - 7$

- 1.           **D**
- 2.           **D**
- 3.           **C**
- 4.           **A**
- 5.           **B**
- 6.           **B**
- 7.           **B**
- 8.           **A**
- 9.           **C**