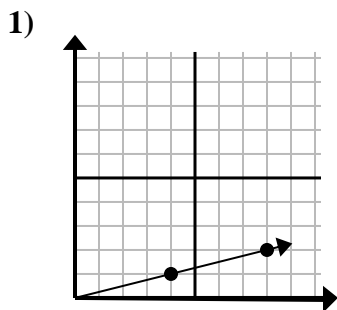


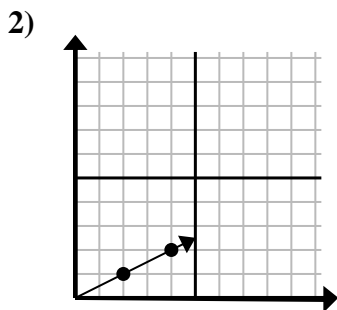


Determine qué opción representa un punto en la línea si continuara.

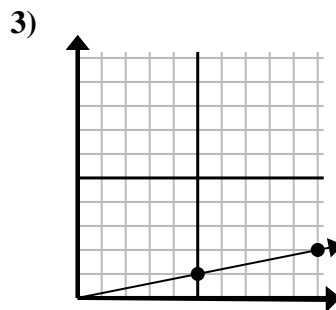
Respuestas



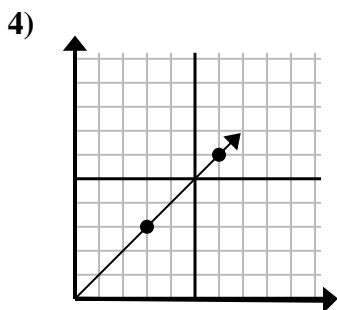
- A. (12, 3)
- B. (28, 7)
- C. (20, 5)
- D. (10, 2)



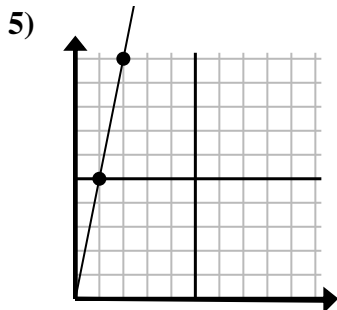
- A. (6, 3)
- B. (10, 5)
- C. (14, 7)
- D. (7, 3)



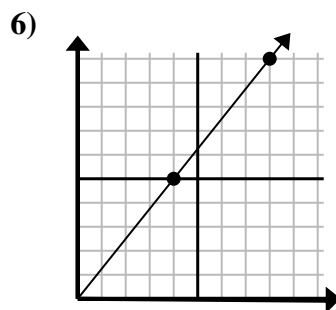
- A. (14, 3)
- B. (13, 5)
- C. (15, 3)
- D. (35, 7)



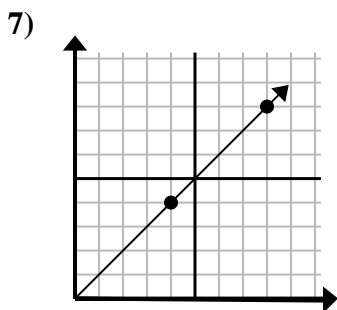
- A. (8, 7)
- B. (15, 15)
- C. (9, 9)
- D. (21, 21)



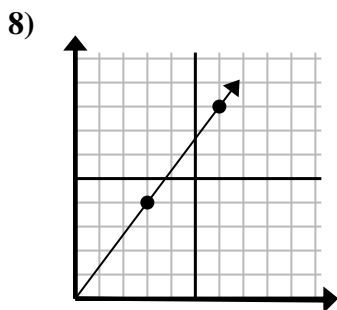
- A. (3, 15)
- B. (3, 7)
- C. (7, 35)
- D. (5, 25)



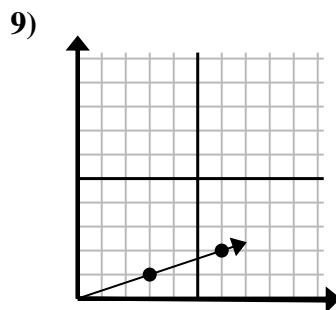
- A. (12, 10)
- B. (24, 30)
- C. (13, 9)
- D. (12, 15)



- A. (12, 8)
- B. (12, 12)
- C. (13, 8)
- D. (20, 20)



- A. (21, 28)
- B. (8, 6)
- C. (9, 12)
- D. (9, 7)



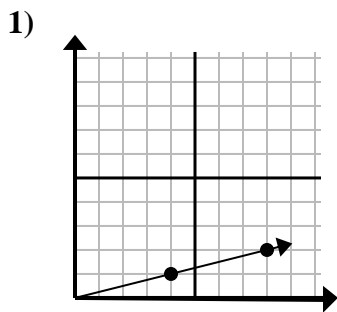
- A. (15, 5)
- B. (9, 3)
- C. (10, 2)
- D. (12, 4)

- 1. _____
- 2. _____
- 3. _____
- 4. _____
- 5. _____
- 6. _____
- 7. _____
- 8. _____
- 9. _____

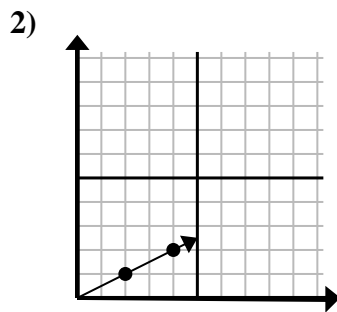


Determine qué opción representa un punto en la línea si continuara.

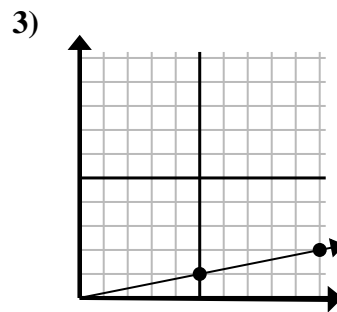
Respuestas



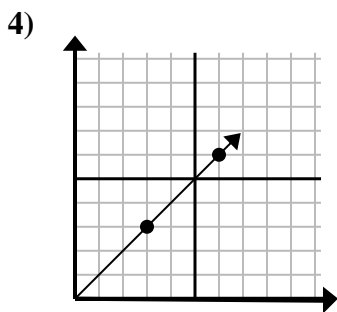
- A. (12 , 3)
- B. (28 , 7)
- C. (20 , 5)
- D. (10 , 2)



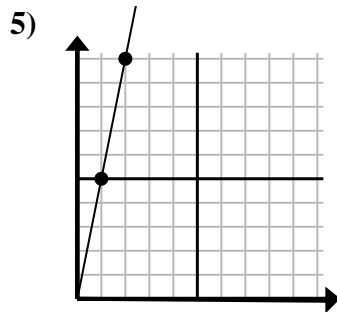
- A. (6 , 3)
- B. (10 , 5)
- C. (14 , 7)
- D. (7 , 3)



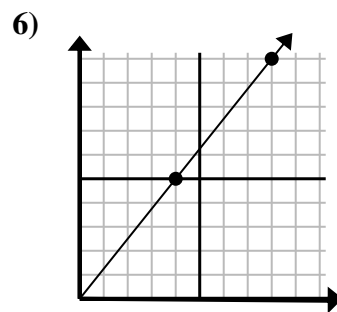
- A. (14 , 3)
- B. (13 , 5)
- C. (15 , 3)
- D. (35 , 7)



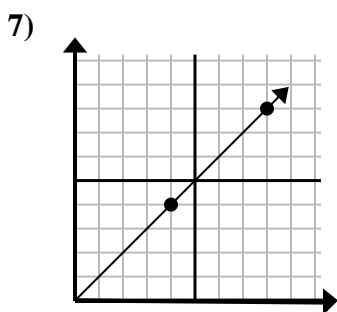
- A. (8 , 7)
- B. (15 , 15)
- C. (9 , 9)
- D. (21 , 21)



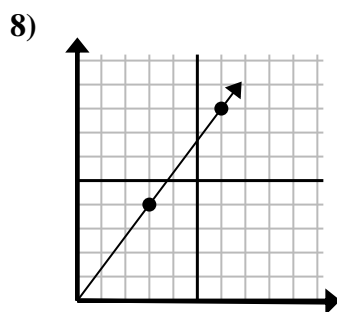
- A. (3 , 15)
- B. (3 , 7)
- C. (7 , 35)
- D. (5 , 25)



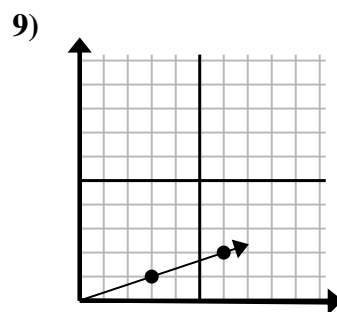
- A. (12 , 10)
- B. (24 , 30)
- C. (13 , 9)
- D. (12 , 15)



- A. (12 , 8)
- B. (12 , 12)
- C. (13 , 8)
- D. (20 , 20)



- A. (21 , 28)
- B. (8 , 6)
- C. (9 , 12)
- D. (9 , 7)



- A. (15 , 5)
- B. (9 , 3)
- C. (10 , 2)
- D. (12 , 4)

- 1. **A**
- 2. **A**
- 3. **C**
- 4. **C**
- 5. **A**
- 6. **D**
- 7. **B**
- 8. **C**
- 9. **B**