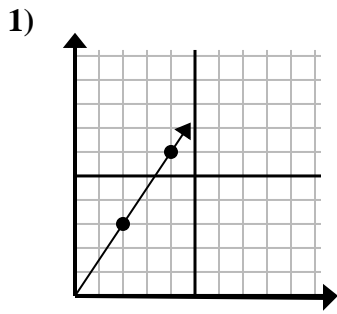


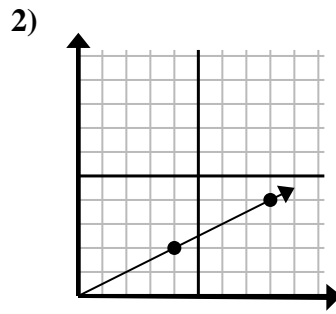


Determine qué opción representa un punto en la línea si continuara.

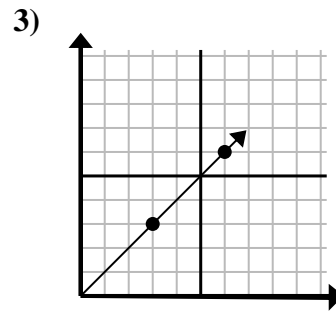
Respuestas



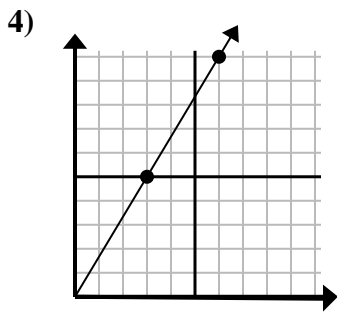
- A. (6, 9)
- B. (8, 6)
- C. (5, 8)
- D. (5, 5)



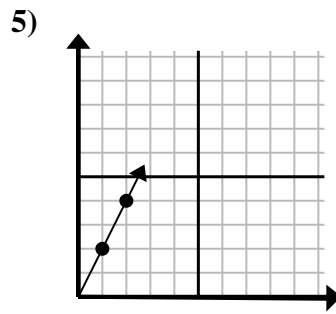
- A. (12, 7)
- B. (12, 6)
- C. (24, 12)
- D. (20, 10)



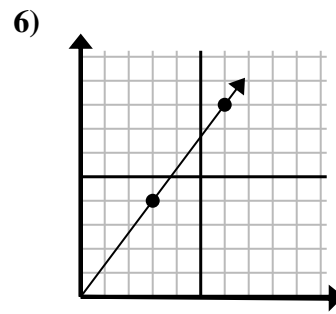
- A. (11, 5)
- B. (9, 9)
- C. (18, 18)
- D. (11, 8)



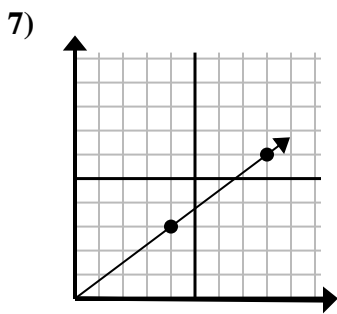
- A. (8, 9)
- B. (12, 20)
- C. (9, 15)
- D. (11, 6)



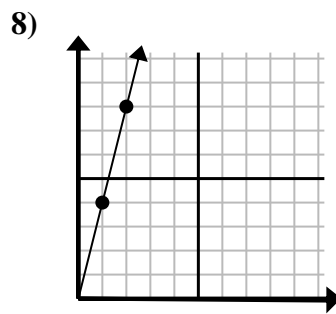
- A. (7, 14)
- B. (7, 7)
- C. (3, 6)
- D. (6, 12)



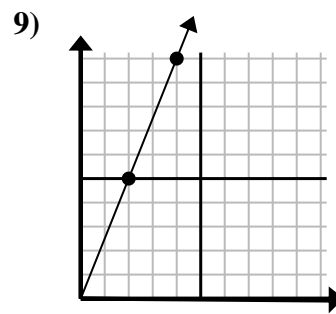
- A. (18, 24)
- B. (21, 28)
- C. (9, 12)
- D. (11, 9)



- A. (12, 9)
- B. (28, 21)
- C. (24, 18)
- D. (11, 8)



- A. (3, 12)
- B. (4, 6)
- C. (4, 16)
- D. (7, 28)



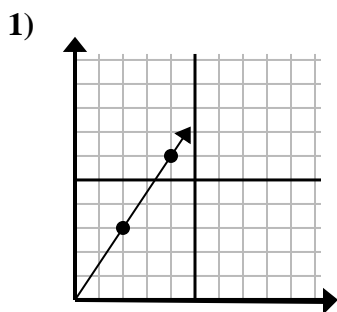
- A. (8, 20)
- B. (14, 35)
- C. (5, 9)
- D. (6, 15)

1. _____
2. _____
3. _____
4. _____
5. _____
6. _____
7. _____
8. _____
9. _____

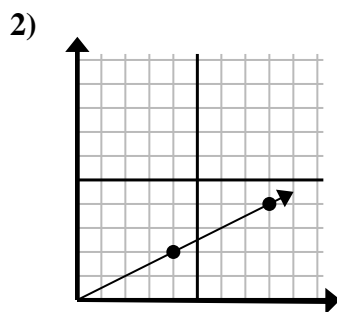


Determine qué opción representa un punto en la línea si continuara.

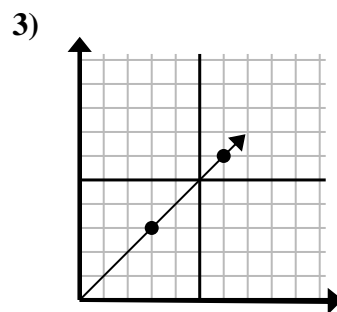
Respuestas



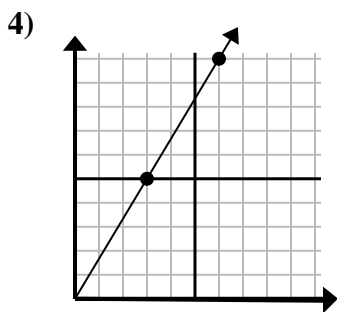
- A. (6 , 9)
- B. (8 , 6)
- C. (5 , 8)
- D. (5 , 5)



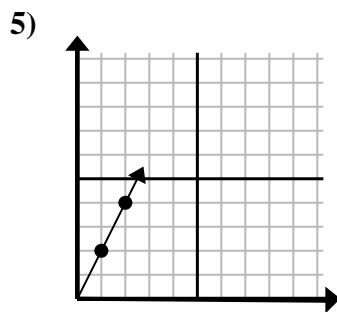
- A. (12 , 7)
- B. (12 , 6)
- C. (24 , 12)
- D. (20 , 10)



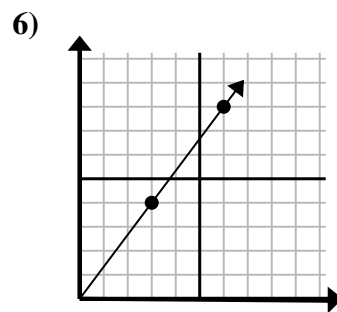
- A. (11 , 5)
- B. (9 , 9)
- C. (18 , 18)
- D. (11 , 8)



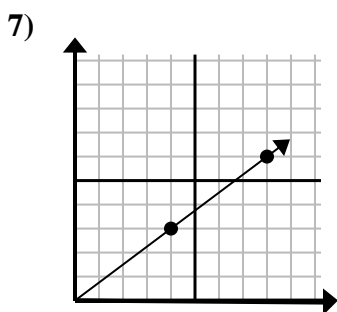
- A. (8 , 9)
- B. (12 , 20)
- C. (9 , 15)
- D. (11 , 6)



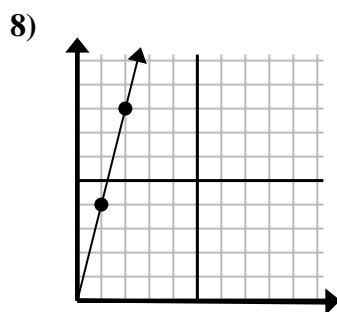
- A. (7 , 14)
- B. (7 , 7)
- C. (3 , 6)
- D. (6 , 12)



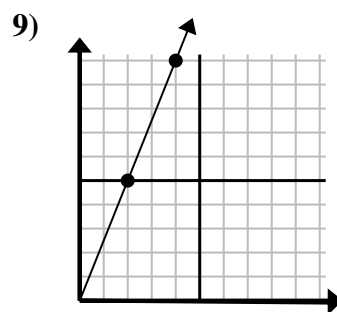
- A. (18 , 24)
- B. (21 , 28)
- C. (9 , 12)
- D. (11 , 9)



- A. (12 , 9)
- B. (28 , 21)
- C. (24 , 18)
- D. (11 , 8)



- A. (3 , 12)
- B. (4 , 6)
- C. (4 , 16)
- D. (7 , 28)



- A. (8 , 20)
- B. (14 , 35)
- C. (5 , 9)
- D. (6 , 15)

- 1. **A**
- 2. **B**
- 3. **B**
- 4. **C**
- 5. **C**
- 6. **C**
- 7. **A**
- 8. **A**
- 9. **D**