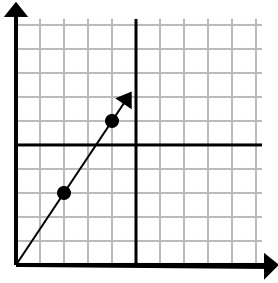




Determine qué opción representa un punto en la línea si continuara.

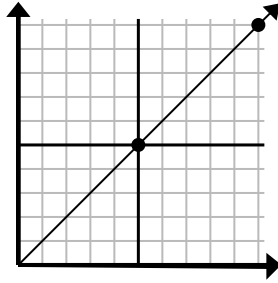
Respuestas

1)



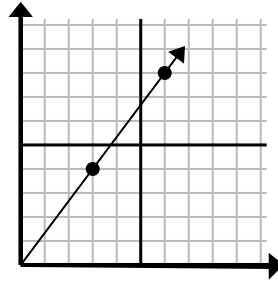
- A. (6, 9)
- B. (5, 4)
- C. (12, 18)
- D. (14, 21)

2)



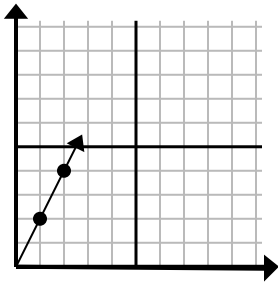
- A. (30, 30)
- B. (15, 15)
- C. (15, 7)
- D. (20, 20)

3)



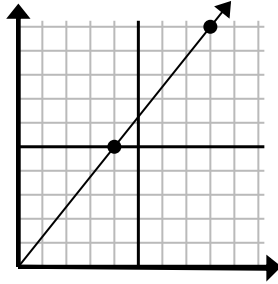
- A. (8, 5)
- B. (12, 16)
- C. (9, 12)
- D. (11, 6)

4)



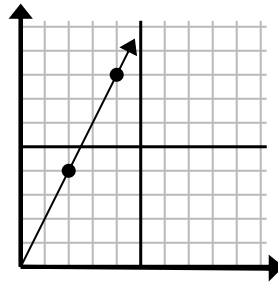
- A. (3, 6)
- B. (4, 8)
- C. (6, 12)
- D. (7, 14)

5)



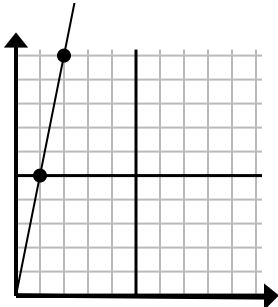
- A. (16, 20)
- B. (13, 10)
- C. (28, 35)
- D. (12, 15)

6)



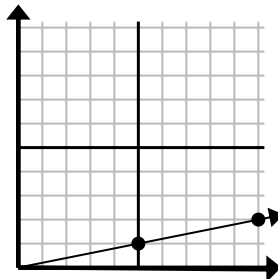
- A. (14, 28)
- B. (7, 8)
- C. (10, 20)
- D. (6, 12)

7)



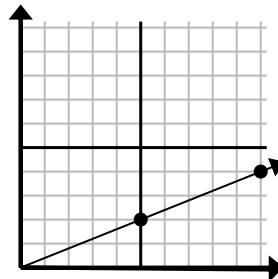
- A. (5, 8)
- B. (7, 35)
- C. (3, 15)
- D. (6, 30)

8)



- A. (25, 5)
- B. (15, 3)
- C. (35, 7)
- D. (11, 4)

9)



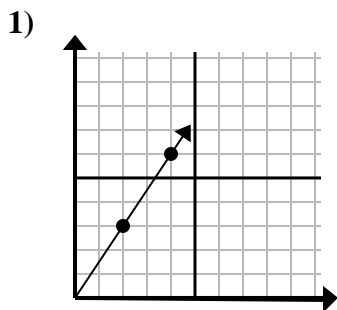
- A. (20, 8)
- B. (14, 6)
- C. (15, 6)
- D. (25, 10)

1. _____
2. _____
3. _____
4. _____
5. _____
6. _____
7. _____
8. _____
9. _____

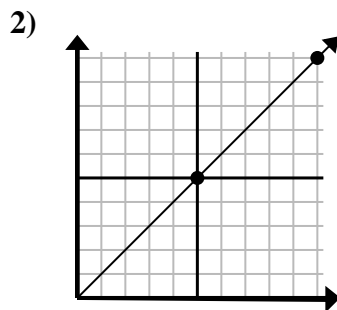


Determine qué opción representa un punto en la línea si continuara.

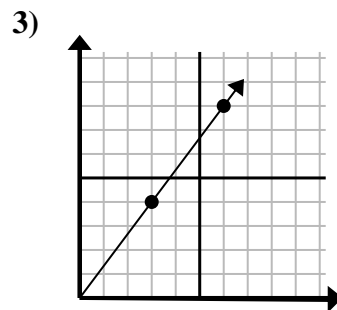
Respuestas



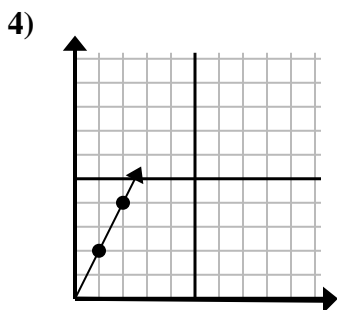
- A. (6 , 9)
- B. (5 , 4)
- C. (12 , 18)
- D. (14 , 21)



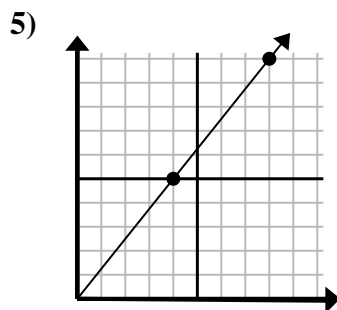
- A. (30 , 30)
- B. (15 , 15)
- C. (15 , 7)
- D. (20 , 20)



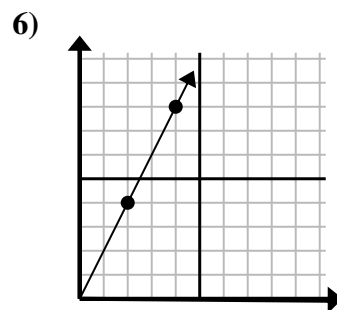
- A. (8 , 5)
- B. (12 , 16)
- C. (9 , 12)
- D. (11 , 6)



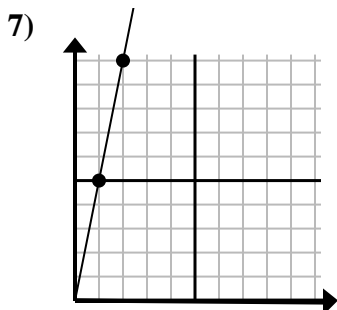
- A. (3 , 6)
- B. (4 , 8)
- C. (6 , 12)
- D. (7 , 14)



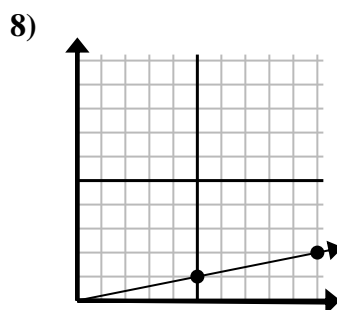
- A. (16 , 20)
- B. (13 , 10)
- C. (28 , 35)
- D. (12 , 15)



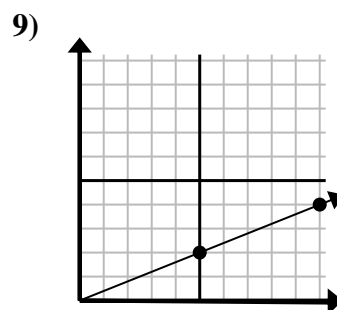
- A. (14 , 28)
- B. (7 , 8)
- C. (10 , 20)
- D. (6 , 12)



- A. (5 , 8)
- B. (7 , 35)
- C. (3 , 15)
- D. (6 , 30)



- A. (25 , 5)
- B. (15 , 3)
- C. (35 , 7)
- D. (11 , 4)



- A. (20 , 8)
- B. (14 , 6)
- C. (15 , 6)
- D. (25 , 10)

- 1. **A**
- 2. **B**
- 3. **C**
- 4. **A**
- 5. **D**
- 6. **D**
- 7. **C**
- 8. **B**
- 9. **C**