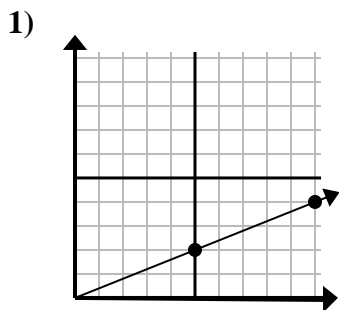


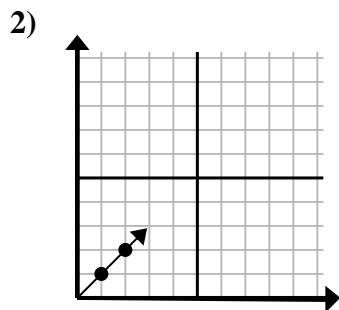


Determine qué opción representa un punto en la línea si continuara.

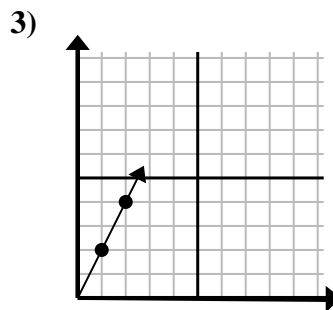
Respuestas



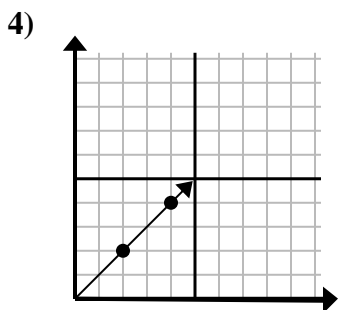
- A. (15 , 7)
- B. (25 , 10)
- C. (14 , 6)
- D. (15 , 6)



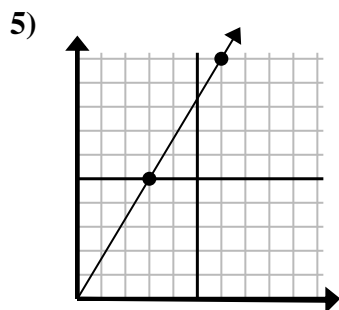
- A. (3 , 3)
- B. (5 , 2)
- C. (7 , 7)
- D. (6 , 6)



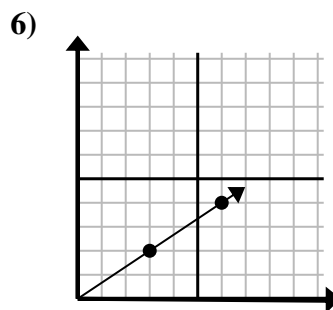
- A. (3 , 6)
- B. (7 , 14)
- C. (6 , 12)
- D. (3 , 5)



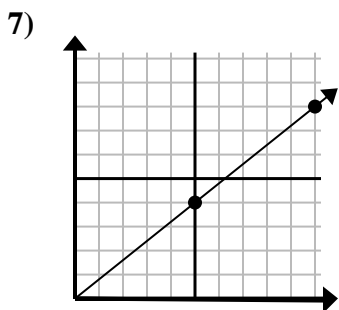
- A. (9 , 3)
- B. (8 , 8)
- C. (5 , 3)
- D. (6 , 6)



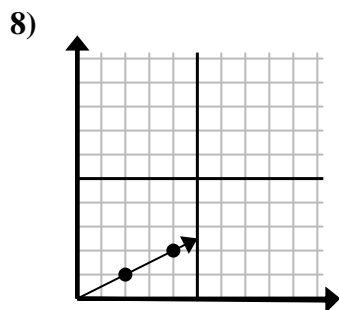
- A. (9 , 15)
- B. (21 , 35)
- C. (15 , 25)
- D. (8 , 8)



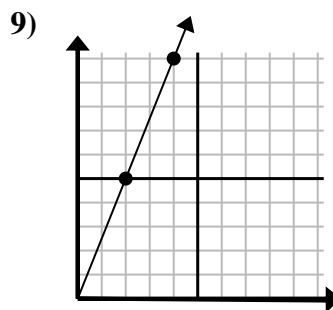
- A. (7 , 7)
- B. (10 , 6)
- C. (18 , 12)
- D. (9 , 6)



- A. (15 , 12)
- B. (15 , 7)
- C. (14 , 6)
- D. (25 , 20)



- A. (6 , 6)
- B. (8 , 6)
- C. (6 , 3)
- D. (14 , 7)



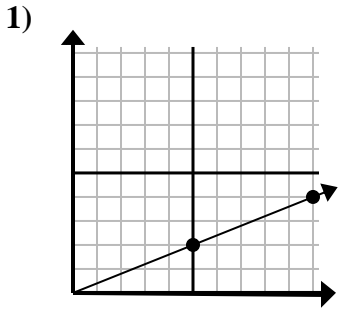
- A. (6 , 10)
- B. (6 , 15)
- C. (8 , 20)
- D. (12 , 30)

- 1. _____
- 2. _____
- 3. _____
- 4. _____
- 5. _____
- 6. _____
- 7. _____
- 8. _____
- 9. _____

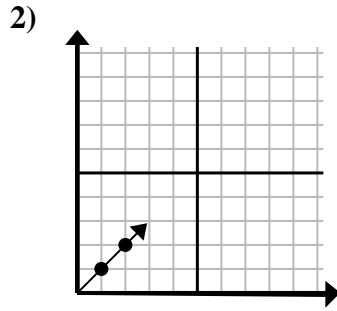


Determine qué opción representa un punto en la línea si continuara.

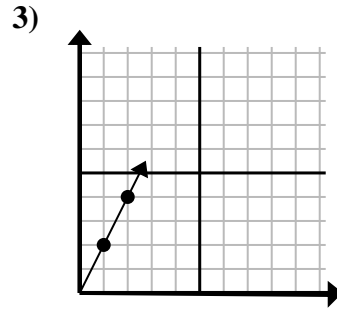
Respuestas



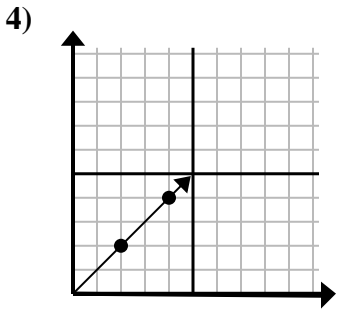
- A. (15 , 7)
- B. (25 , 10)
- C. (14 , 6)
- D. (15 , 6)



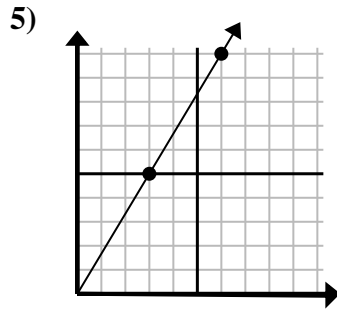
- A. (3 , 3)
- B. (5 , 2)
- C. (7 , 7)
- D. (6 , 6)



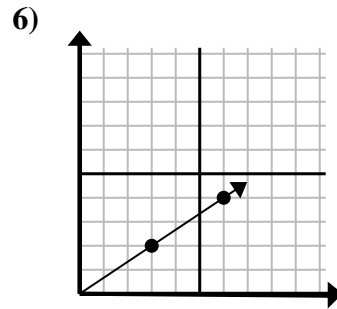
- A. (3 , 6)
- B. (7 , 14)
- C. (6 , 12)
- D. (3 , 5)



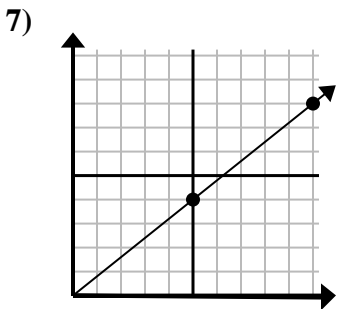
- A. (9 , 3)
- B. (8 , 8)
- C. (5 , 3)
- D. (6 , 6)



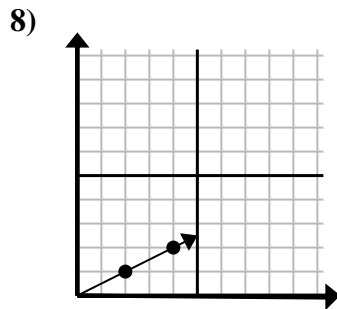
- A. (9 , 15)
- B. (21 , 35)
- C. (15 , 25)
- D. (8 , 8)



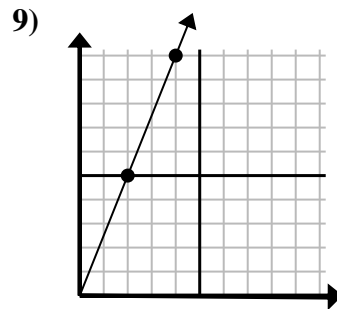
- A. (7 , 7)
- B. (10 , 6)
- C. (18 , 12)
- D. (9 , 6)



- A. (15 , 12)
- B. (15 , 7)
- C. (14 , 6)
- D. (25 , 20)



- A. (6 , 6)
- B. (8 , 6)
- C. (6 , 3)
- D. (14 , 7)



- A. (6 , 10)
- B. (6 , 15)
- C. (8 , 20)
- D. (12 , 30)

- 1. **D**
- 2. **A**
- 3. **A**
- 4. **D**
- 5. **A**
- 6. **D**
- 7. **A**
- 8. **C**
- 9. **B**