


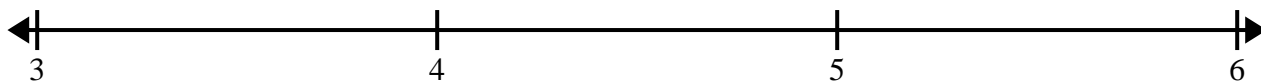


Cree y etiquete el gráfico de líneas usando el conjunto de números proporcionados.


- 1)
- | | | | | | | | |
|----------------|----------------|----------------|----------------|----------------|----------------|----------------|----------------|
| 4 | $3\frac{1}{4}$ | $5\frac{1}{4}$ | $4\frac{3}{4}$ | 3 | $5\frac{3}{4}$ | $5\frac{1}{4}$ | $4\frac{2}{4}$ |
| $4\frac{3}{4}$ | $3\frac{1}{4}$ | $5\frac{1}{4}$ | 4 | $4\frac{1}{4}$ | $3\frac{3}{4}$ | $3\frac{3}{4}$ | $3\frac{3}{4}$ |



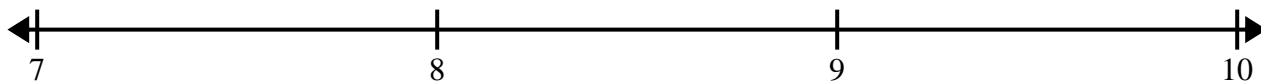
- 2)
- | | | | | | | | |
|----------------|----------------|----------------|----------------|----------------|----------------|----------------|----------------|
| $3\frac{1}{4}$ | $3\frac{2}{4}$ | $3\frac{3}{4}$ | $3\frac{1}{4}$ | $5\frac{3}{4}$ | $4\frac{2}{4}$ | $4\frac{3}{4}$ | 3 |
| 4 | 4 | $5\frac{2}{4}$ | $4\frac{2}{4}$ | $3\frac{3}{4}$ | $4\frac{1}{4}$ | $3\frac{3}{4}$ | $5\frac{1}{4}$ |




- 3)
- | | | | | | | | |
|----------------|---|----------------|----------------|----------------|---|----------------|----------------|
| $9\frac{1}{2}$ | 8 | $7\frac{1}{2}$ | $9\frac{1}{2}$ | 8 | 8 | $9\frac{1}{2}$ | 7 |
| 9 | 7 | $7\frac{1}{2}$ | 7 | $7\frac{1}{2}$ | 9 | 9 | $8\frac{1}{2}$ |



- 4)
- | | | | | | | | |
|----------------|----------------|----------------|----------------|----------------|----------------|----------------|----------------|
| 7 | $9\frac{6}{8}$ | $7\frac{4}{8}$ | $7\frac{7}{8}$ | $7\frac{1}{8}$ | $8\frac{4}{8}$ | $9\frac{1}{8}$ | $8\frac{6}{8}$ |
| $7\frac{7}{8}$ | $9\frac{1}{8}$ | $9\frac{5}{8}$ | $7\frac{6}{8}$ | 7 | $8\frac{6}{8}$ | $7\frac{4}{8}$ | $7\frac{1}{8}$ |



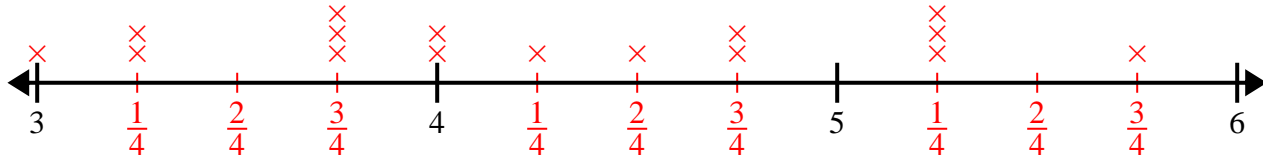
- 5)
- | | | | | | | | |
|-----------------|-----------------|-----------------|-----------------|----------------|----------------|-----------------|-----------------|
| $10\frac{7}{8}$ | $9\frac{6}{8}$ | $10\frac{6}{8}$ | $8\frac{1}{8}$ | $8\frac{5}{8}$ | $8\frac{4}{8}$ | $8\frac{3}{8}$ | $8\frac{3}{8}$ |
| $9\frac{2}{8}$ | $10\frac{3}{8}$ | $10\frac{5}{8}$ | $10\frac{6}{8}$ | $9\frac{2}{8}$ | $9\frac{4}{8}$ | $10\frac{3}{8}$ | $10\frac{2}{8}$ |



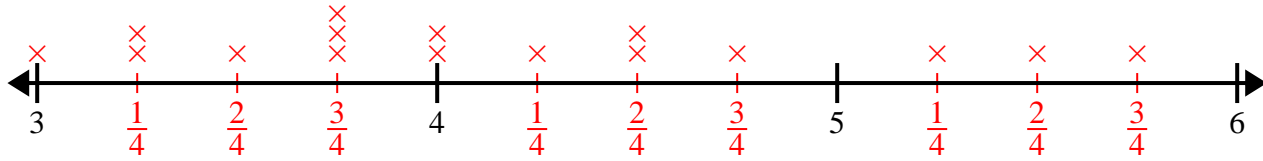


Cree y etiquete el gráfico de líneas usando el conjunto de números proporcionados.

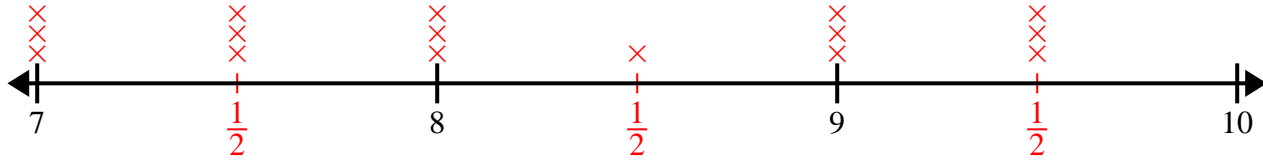
- 1) 4 $3\frac{1}{4}$ $5\frac{1}{4}$ $4\frac{3}{4}$ 3 $5\frac{3}{4}$ $5\frac{1}{4}$ $4\frac{2}{4}$
 $4\frac{3}{4}$ $3\frac{1}{4}$ $5\frac{1}{4}$ 4 $4\frac{1}{4}$ $3\frac{3}{4}$ $3\frac{3}{4}$ $3\frac{3}{4}$



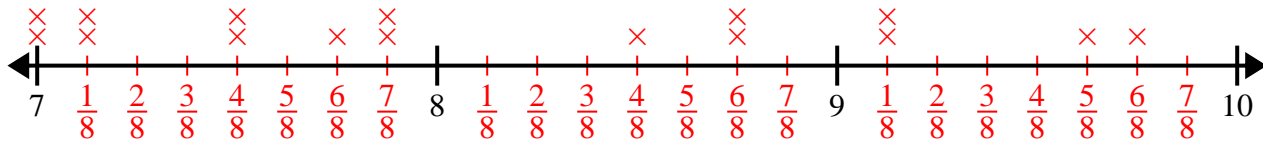
- 2) $3\frac{1}{4}$ $3\frac{2}{4}$ $3\frac{3}{4}$ $3\frac{1}{4}$ $5\frac{3}{4}$ $4\frac{2}{4}$ $4\frac{3}{4}$ 3
 4 4 $5\frac{2}{4}$ $4\frac{2}{4}$ $3\frac{3}{4}$ $4\frac{1}{4}$ $3\frac{3}{4}$ $5\frac{1}{4}$



- 3) $9\frac{1}{2}$ 8 $7\frac{1}{2}$ $9\frac{1}{2}$ 8 8 $9\frac{1}{2}$ 7
 9 7 $7\frac{1}{2}$ 7 $7\frac{1}{2}$ 9 9 $8\frac{1}{2}$



- 4) 7 $9\frac{6}{8}$ $7\frac{4}{8}$ $7\frac{7}{8}$ $7\frac{1}{8}$ $8\frac{4}{8}$ $9\frac{1}{8}$ $8\frac{6}{8}$
 $7\frac{7}{8}$ $9\frac{1}{8}$ $9\frac{5}{8}$ $7\frac{6}{8}$ 7 $8\frac{6}{8}$ $7\frac{4}{8}$ $7\frac{1}{8}$



- 5) $10\frac{7}{8}$ $9\frac{6}{8}$ $10\frac{6}{8}$ $8\frac{1}{8}$ $8\frac{5}{8}$ $8\frac{4}{8}$ $8\frac{3}{8}$ $8\frac{3}{8}$
 $9\frac{2}{8}$ $10\frac{3}{8}$ $10\frac{5}{8}$ $10\frac{6}{8}$ $9\frac{2}{8}$ $9\frac{4}{8}$ $10\frac{3}{8}$ $10\frac{2}{8}$

