


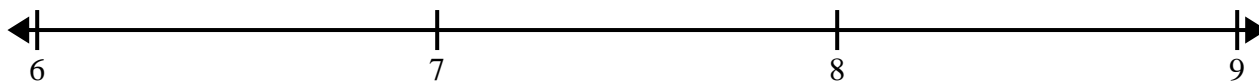


Cree y etiquete el gráfico de líneas usando el conjunto de números proporcionados.


- 1) $4\frac{1}{2}$ $3\frac{1}{2}$ 3 $3\frac{1}{2}$ $3\frac{1}{2}$ 5 3 5
 3 $4\frac{1}{2}$ $4\frac{1}{2}$ 4 5 4 4 $5\frac{1}{2}$



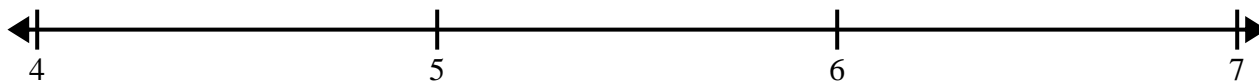
- 2) $6\frac{2}{4}$ 8 $8\frac{2}{4}$ $7\frac{2}{4}$ $7\frac{3}{4}$ $6\frac{1}{4}$ $7\frac{3}{4}$ $7\frac{3}{4}$
 $6\frac{3}{4}$ $6\frac{2}{4}$ $7\frac{1}{4}$ $6\frac{3}{4}$ $8\frac{3}{4}$ 6 $8\frac{3}{4}$ $6\frac{3}{4}$




- 3) $8\frac{2}{4}$ $8\frac{3}{4}$ 8 $10\frac{3}{4}$ $8\frac{1}{4}$ $10\frac{2}{4}$ $8\frac{2}{4}$ 8
 9 $8\frac{3}{4}$ $8\frac{3}{4}$ $10\frac{3}{4}$ $10\frac{2}{4}$ $8\frac{2}{4}$ 10 $9\frac{3}{4}$



- 4) $4\frac{6}{8}$ $4\frac{6}{8}$ $5\frac{3}{8}$ $6\frac{6}{8}$ $4\frac{3}{8}$ $6\frac{4}{8}$ $5\frac{5}{8}$ $6\frac{4}{8}$
 $6\frac{4}{8}$ $6\frac{6}{8}$ $4\frac{5}{8}$ $6\frac{7}{8}$ $4\frac{4}{8}$ 6 $4\frac{7}{8}$ $4\frac{4}{8}$



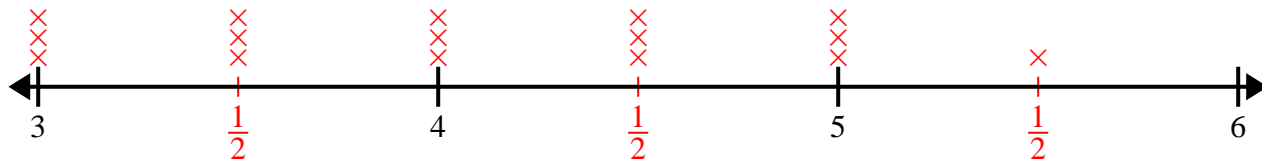
- 5) 9 $10\frac{1}{2}$ $8\frac{1}{2}$ $10\frac{1}{2}$ $9\frac{1}{2}$ $8\frac{1}{2}$ 8 $10\frac{1}{2}$
 $8\frac{1}{2}$ 8 $9\frac{1}{2}$ $9\frac{1}{2}$ 8 9 9 10



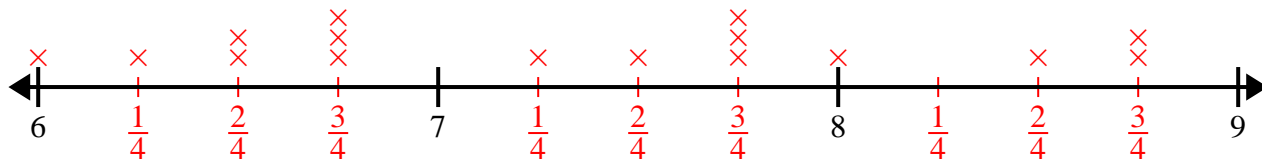


Cree y etiqúete el gráfico de líneas usando el conjunto de números proporcionados.

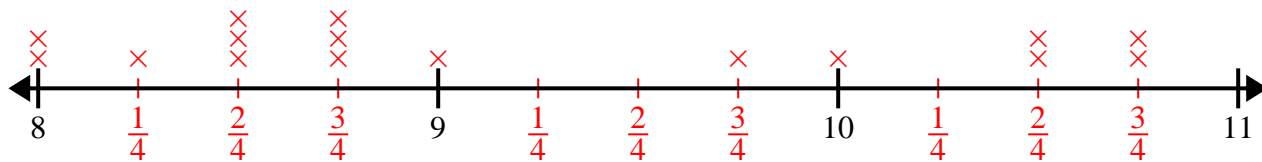
- 1) $4\frac{1}{2}$ $3\frac{1}{2}$ 3 $3\frac{1}{2}$ $3\frac{1}{2}$ 5 3 5
 3 $4\frac{1}{2}$ $4\frac{1}{2}$ 4 5 4 4 $5\frac{1}{2}$



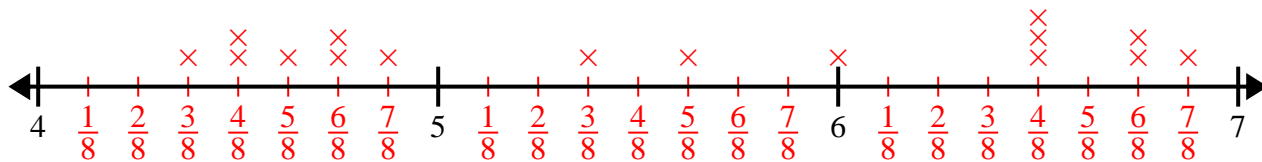
- 2) $6\frac{2}{4}$ 8 $8\frac{2}{4}$ $7\frac{2}{4}$ $7\frac{3}{4}$ $6\frac{1}{4}$ $7\frac{3}{4}$ $7\frac{3}{4}$
 $6\frac{3}{4}$ $6\frac{2}{4}$ $7\frac{1}{4}$ $6\frac{3}{4}$ $8\frac{3}{4}$ 6 $8\frac{3}{4}$ $6\frac{3}{4}$



- 3) $8\frac{2}{4}$ $8\frac{3}{4}$ 8 $10\frac{3}{4}$ $8\frac{1}{4}$ $10\frac{2}{4}$ $8\frac{2}{4}$ 8
 9 $8\frac{3}{4}$ $8\frac{3}{4}$ $10\frac{3}{4}$ $10\frac{2}{4}$ $8\frac{2}{4}$ 10 $9\frac{3}{4}$



- 4) $4\frac{6}{8}$ $4\frac{6}{8}$ $5\frac{3}{8}$ $6\frac{6}{8}$ $4\frac{3}{8}$ $6\frac{4}{8}$ $5\frac{5}{8}$ $6\frac{4}{8}$
 $6\frac{4}{8}$ $6\frac{6}{8}$ $4\frac{5}{8}$ $6\frac{7}{8}$ $4\frac{4}{8}$ 6 $4\frac{7}{8}$ $4\frac{4}{8}$



- 5) 9 $10\frac{1}{2}$ $8\frac{1}{2}$ $10\frac{1}{2}$ $9\frac{1}{2}$ $8\frac{1}{2}$ 8 $10\frac{1}{2}$
 $8\frac{1}{2}$ 8 $9\frac{1}{2}$ $9\frac{1}{2}$ 8 9 9 10

