





Cree y etiquete el gráfico de líneas usando el conjunto de números proporcionados.


- 1) 5 $5\frac{1}{2}$ 4 $6\frac{1}{2}$ 4 $4\frac{1}{2}$ $6\frac{1}{2}$ $6\frac{1}{2}$
 6 $4\frac{1}{2}$ 6 $4\frac{1}{2}$ 4 5 $5\frac{1}{2}$ 6




- 2) $9\frac{7}{8}$ $11\frac{6}{8}$ 11 $9\frac{3}{8}$ $10\frac{5}{8}$ $9\frac{7}{8}$ $10\frac{5}{8}$ $9\frac{6}{8}$
 $9\frac{4}{8}$ 9 $9\frac{5}{8}$ $9\frac{2}{8}$ $9\frac{6}{8}$ $11\frac{7}{8}$ $9\frac{3}{8}$ $10\frac{6}{8}$




- 3) $10\frac{3}{4}$ 9 $9\frac{2}{4}$ $8\frac{1}{4}$ $9\frac{3}{4}$ $8\frac{2}{4}$ $9\frac{1}{4}$ $8\frac{1}{4}$
 8 $9\frac{2}{4}$ 10 $9\frac{2}{4}$ $10\frac{3}{4}$ 10 $8\frac{1}{4}$ $10\frac{3}{4}$



- 4) 6 7 6 $7\frac{1}{2}$ 7 $6\frac{1}{2}$ $8\frac{1}{2}$ 6
 7 $7\frac{1}{2}$ $6\frac{1}{2}$ $6\frac{1}{2}$ $8\frac{1}{2}$ $8\frac{1}{2}$ 8 $7\frac{1}{2}$



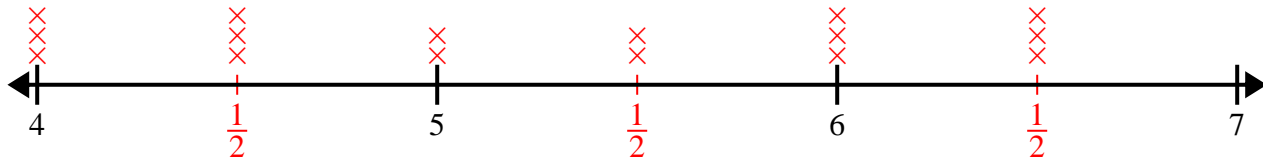
- 5) $6\frac{3}{8}$ 5 $6\frac{3}{8}$ $5\frac{6}{8}$ $5\frac{2}{8}$ $5\frac{6}{8}$ $4\frac{2}{8}$ $5\frac{1}{8}$
 $6\frac{1}{8}$ $4\frac{4}{8}$ $5\frac{3}{8}$ $4\frac{5}{8}$ $5\frac{5}{8}$ $5\frac{1}{8}$ $5\frac{1}{8}$ $5\frac{2}{8}$



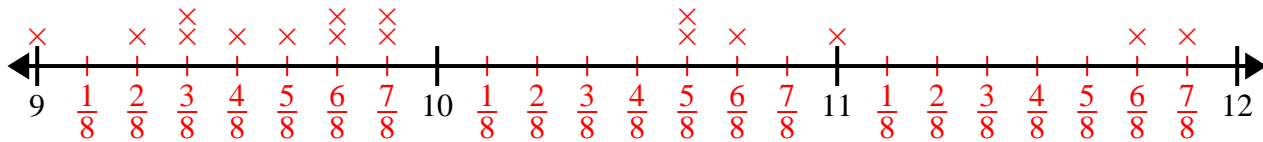


Cree y etiqüete el gráfico de líneas usando el conjunto de números proporcionados.

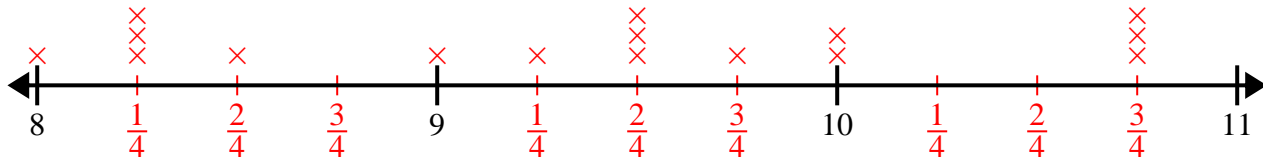
- 1) 5 $5\frac{1}{2}$ 4 $6\frac{1}{2}$ 4 $4\frac{1}{2}$ $6\frac{1}{2}$ $6\frac{1}{2}$
 6 $4\frac{1}{2}$ 6 $4\frac{1}{2}$ 4 5 $5\frac{1}{2}$ 6



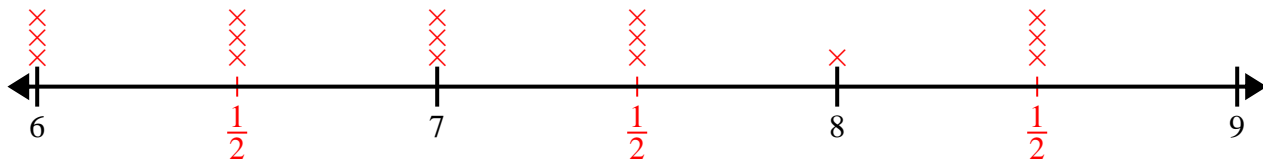
- 2) $9\frac{7}{8}$ $11\frac{6}{8}$ 11 $9\frac{3}{8}$ $10\frac{5}{8}$ $9\frac{7}{8}$ $10\frac{5}{8}$ $9\frac{6}{8}$
 $9\frac{4}{8}$ 9 $9\frac{5}{8}$ $9\frac{2}{8}$ $9\frac{6}{8}$ $11\frac{7}{8}$ $9\frac{3}{8}$ $10\frac{6}{8}$



- 3) $10\frac{3}{4}$ 9 $9\frac{2}{4}$ $8\frac{1}{4}$ $9\frac{3}{4}$ $8\frac{2}{4}$ $9\frac{1}{4}$ $8\frac{1}{4}$
 8 $9\frac{2}{4}$ 10 $9\frac{2}{4}$ $10\frac{3}{4}$ 10 $8\frac{1}{4}$ $10\frac{3}{4}$



- 4) 6 7 6 $7\frac{1}{2}$ 7 $6\frac{1}{2}$ $8\frac{1}{2}$ 6
 7 $7\frac{1}{2}$ $6\frac{1}{2}$ $6\frac{1}{2}$ $8\frac{1}{2}$ $8\frac{1}{2}$ 8 $7\frac{1}{2}$



- 5) $6\frac{3}{8}$ 5 $6\frac{3}{8}$ $5\frac{6}{8}$ $5\frac{2}{8}$ $5\frac{6}{8}$ $4\frac{2}{8}$ $5\frac{1}{8}$
 $6\frac{1}{8}$ $4\frac{4}{8}$ $5\frac{3}{8}$ $4\frac{5}{8}$ $5\frac{5}{8}$ $5\frac{1}{8}$ $5\frac{1}{8}$ $5\frac{2}{8}$

