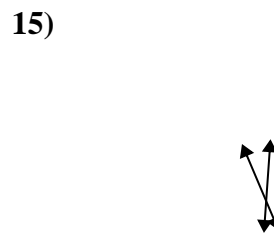
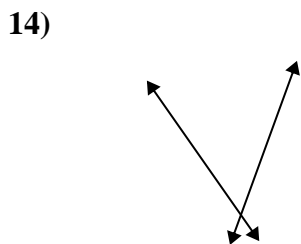
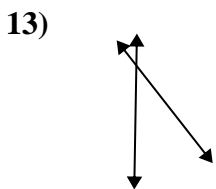
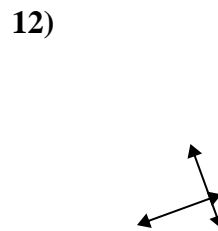
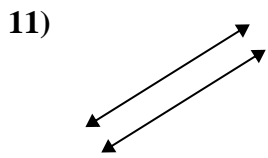
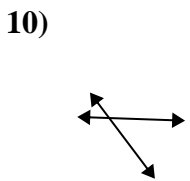
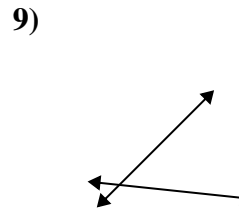
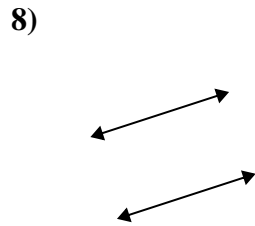
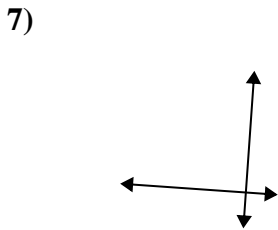
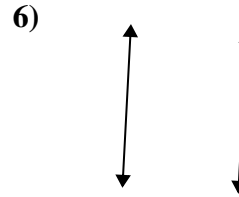
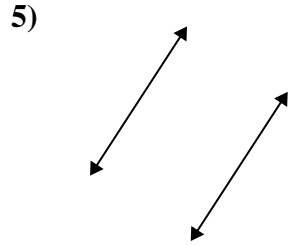
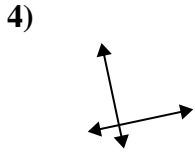
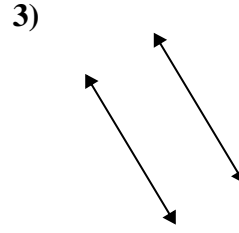
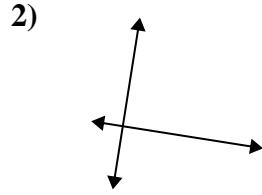
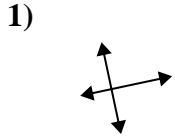


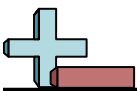


Utilice 'paralelo', 'perpendicular' (perpendicular) o 'inter' (intersección) para describir las líneas.

Respuestas

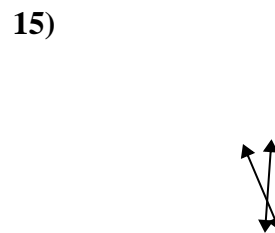
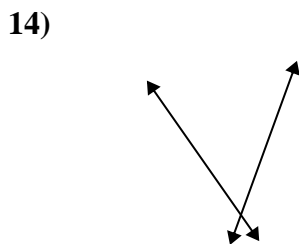
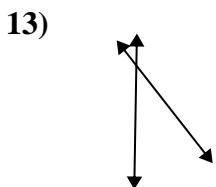
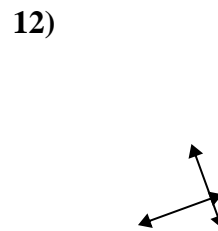
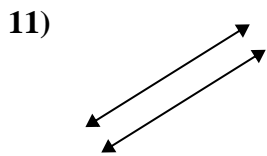
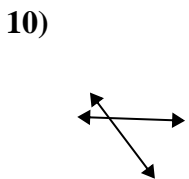
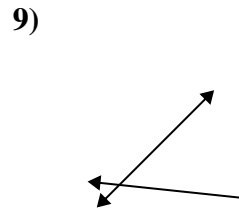
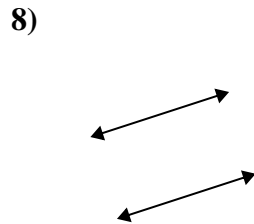
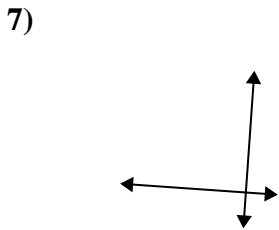
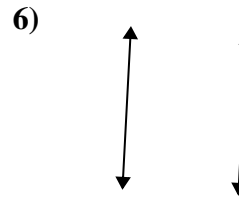
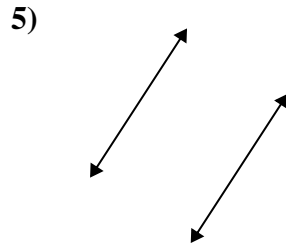
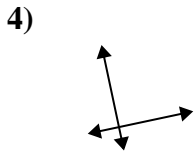
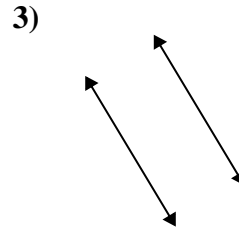
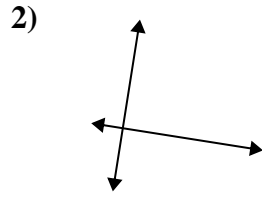
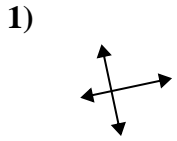


1. _____
2. _____
3. _____
4. _____
5. _____
6. _____
7. _____
8. _____
9. _____
10. _____
11. _____
12. _____
13. _____
14. _____
15. _____



Utilice 'paralelo', 'perpendicular' (perpendicular) o 'inter' (intersección) para describir las líneas.

Respuestas



1. perp & inter

2. perp & inter

3. paralelo

4. perp & inter

5. paralelo

6. paralelo

7. perp & inter

8. paralelo

9. inter

10. inter

11. paralelo

12. perp & inter

13. inter

14. inter

15. inter