



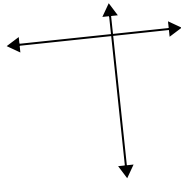
Utilice 'paralelo', 'perpendicular' (perpendicular) o 'inter' (intersección) para describir las líneas.

Respuestas

1)



2)



3)



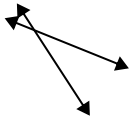
1. _____

2. _____

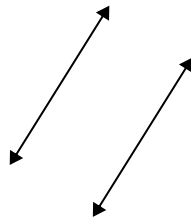
3. _____

4. _____

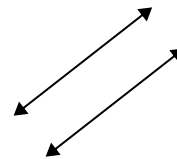
4)



5)



6)



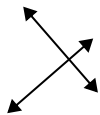
5. _____

6. _____

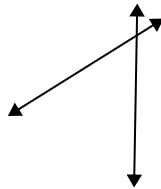
7. _____

8. _____

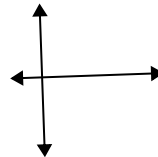
7)



8)



9)



9. _____

10. _____

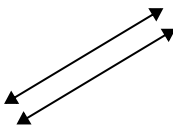
11. _____

12. _____

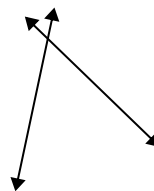
10)



11)



12)

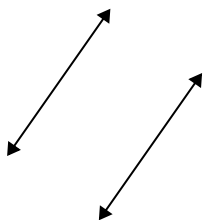


13. _____

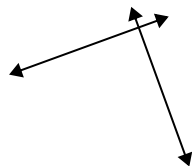
14. _____

15. _____

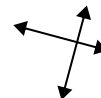
13)



14)



15)



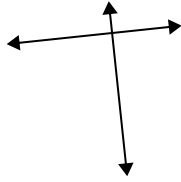


Utilice 'paralelo', 'perpendicular' (perpendicular) o 'inter' (intersección) para describir las líneas.

1)



2)



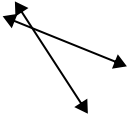
3)



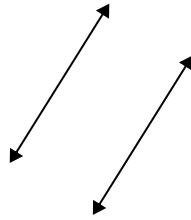
1.

paralelo

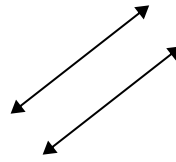
4)



5)



6)



2.

perp & inter

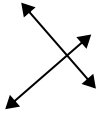
3.

inter

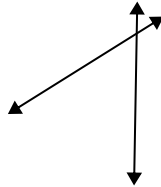
4.

inter

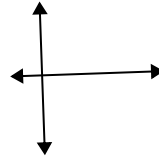
7)



8)



9)



5.

paralelo

6.

paralelo

7.

perp & inter

8.

inter

9.

perp & inter

10.

inter

11.

paralelo

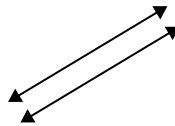
12.

inter

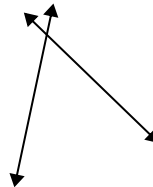
10)



11)



12)



13.

paralelo

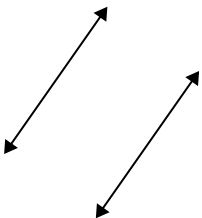
14.

perp & inter

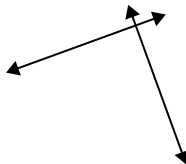
15.

perp & inter

13)



14)



15)

