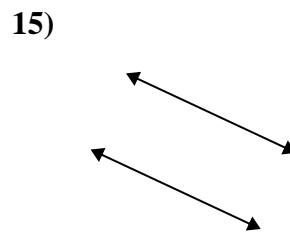
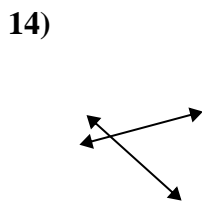
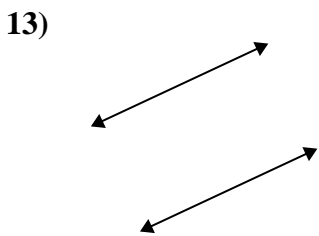
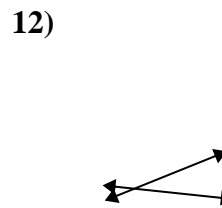
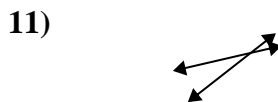
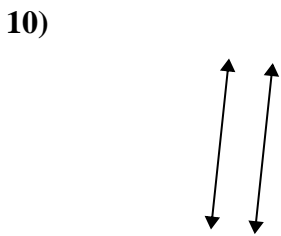
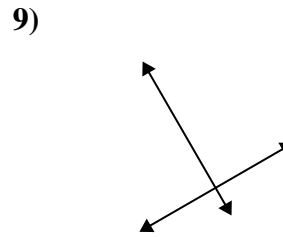
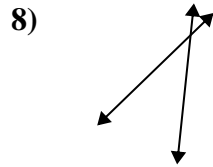
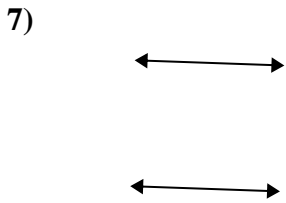
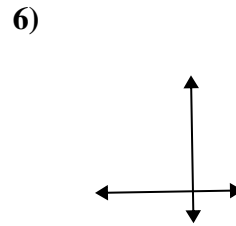
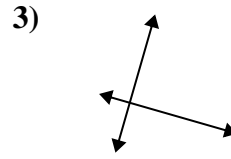
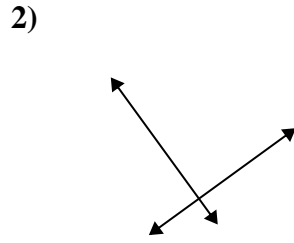
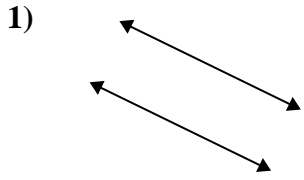




Utilice 'paralelo', 'perpendicular' (perpendicular) o 'inter' (intersección) para describir las líneas.

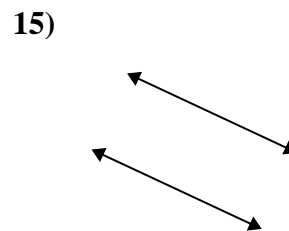
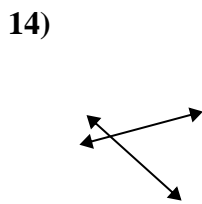
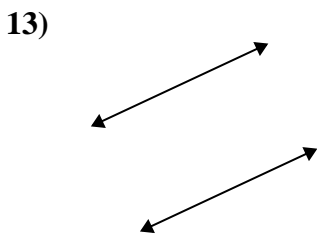
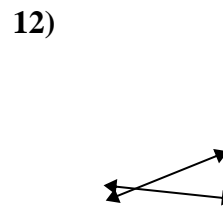
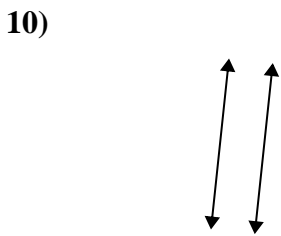
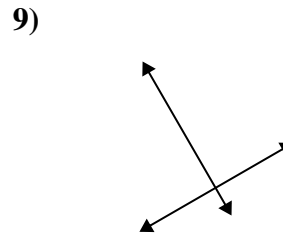
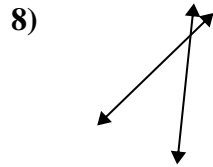
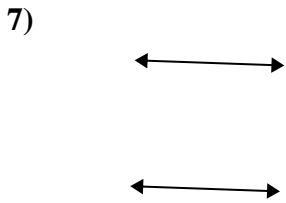
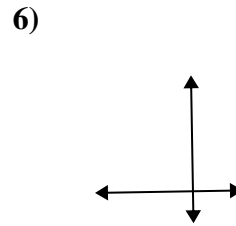
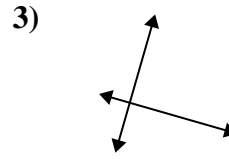
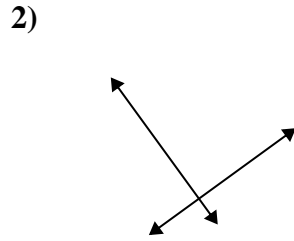
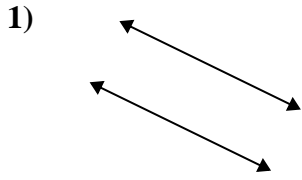
Respuestas



1. _____
2. _____
3. _____
4. _____
5. _____
6. _____
7. _____
8. _____
9. _____
10. _____
11. _____
12. _____
13. _____
14. _____
15. _____



Utilice 'paralelo', 'perpendicular' (perpendicular) o 'inter' (intersección) para describir las líneas.



Respuestas

1. paralelo

2. perp & inter

3. perp & inter

4. inter

5. perp & inter

6. perp & inter

7. paralelo

8. inter

9. perp & inter

10. paralelo

11. inter

12. inter

13. paralelo

14. inter

15. paralelo