



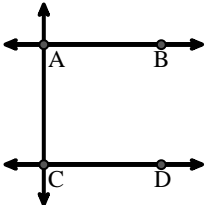
Haga coincidir la descripción de la parte superior con la imagen visual en la parte inferior.

Respuestas

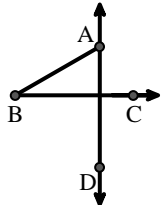
- 1) \overleftrightarrow{BC} intersecting $\angle ACD$
- 2) Right $\angle ADE$
- 3) \overleftrightarrow{AC} parallel to \overleftrightarrow{EB}
- 4) \overleftrightarrow{AB} parallel to \overleftrightarrow{CD}
- 5) \overleftrightarrow{AE} intersecting \overleftrightarrow{DB}
- 6) \overleftrightarrow{AD} intersecting \overleftrightarrow{BC} at point E
- 7) \overleftrightarrow{AC} intersected by \overleftrightarrow{BD}
- 8) Acute $\angle ABC$ intersecting \overleftrightarrow{AD}
- 9) \overleftrightarrow{BD} intersecting $\angle ACE$
- 10) D as the midpoint of \overleftrightarrow{CE}
- 11) \overleftrightarrow{AC} perpendicular to \overleftrightarrow{AD}
- 12) \overleftrightarrow{BE} intersecting \overleftrightarrow{CD}

1. _____
2. _____
3. _____
4. _____
5. _____
6. _____
7. _____
8. _____
9. _____
10. _____
11. _____
12. _____

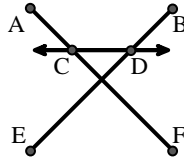
A.



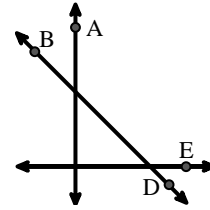
B.



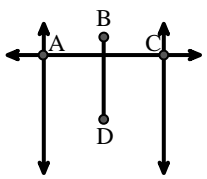
C.



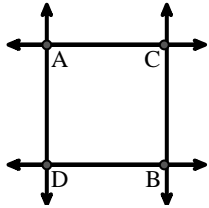
D.



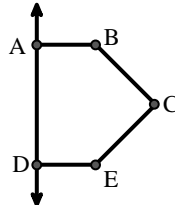
E.



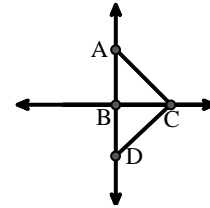
F.



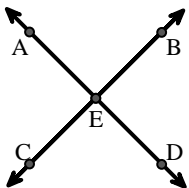
G.



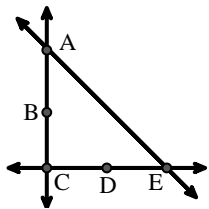
H.



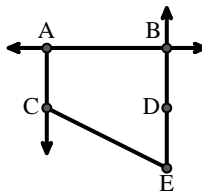
I.



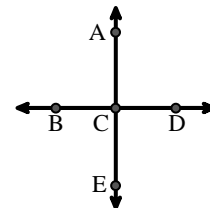
J.



K.



L.





Haga coincidir la descripción de la parte superior con la imagen visual en la parte inferior.

Respuestas

- 1) \overleftrightarrow{BC} intersecting $\angle ACD$
- 2) Right $\angle ADE$
- 3) \overleftrightarrow{AC} parallel to \overleftrightarrow{EB}
- 4) \overleftrightarrow{AB} parallel to \overleftrightarrow{CD}
- 5) \overleftrightarrow{AE} intersecting \overleftrightarrow{DB}
- 6) \overleftrightarrow{AD} intersecting \overleftrightarrow{BC} at point E
- 7) \overleftrightarrow{AC} intersected by \overleftrightarrow{BD}
- 8) Acute $\angle ABC$ intersecting \overleftrightarrow{AD}
- 9) \overleftrightarrow{BD} intersecting $\angle ACE$
- 10) D as the midpoint of \overleftrightarrow{CE}
- 11) \overleftrightarrow{AC} perpendicular to \overleftrightarrow{AD}
- 12) \overleftrightarrow{BE} intersecting \overleftrightarrow{CD}

1. **H**
2. **G**
3. **K**
4. **A**
5. **L**
6. **I**
7. **E**
8. **B**
9. **D**
10. **J**
11. **F**
12. **C**

A.

B.

C.

D.

E.

F.

G.

H.

I.

J.

K.

L.