



Haga coincidir la descripción de la parte superior con la imagen visual en la parte inferior.

Respuestas

1) \overleftrightarrow{AD} intersecting \overleftrightarrow{BC} at point E

2) \overrightarrow{AC} parallel to \overrightarrow{EB}

3) D as the midpoint of \overleftrightarrow{CE}

4) \overleftrightarrow{AC} intersected by \overline{BD}

5) \overline{BE} intersecting \overleftrightarrow{CD}

6) \overleftrightarrow{BC} intersecting $\angle ACD$

7) $\angle BAC$ creating an obtuse angle

8) Acute $\angle ABC$ intersecting \overleftrightarrow{AD}

9) \overleftrightarrow{AB} intersecting \overleftrightarrow{AD}

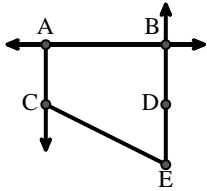
10) \overrightarrow{BA} intersecting \overleftrightarrow{AD}

11) \overleftrightarrow{AB} parallel to \overleftrightarrow{CD}

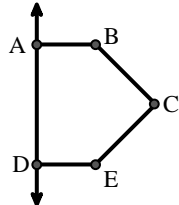
12) Right $\angle ADE$

- 1. _____
- 2. _____
- 3. _____
- 4. _____
- 5. _____
- 6. _____
- 7. _____
- 8. _____
- 9. _____
- 10. _____
- 11. _____
- 12. _____

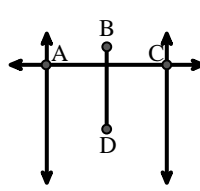
A.



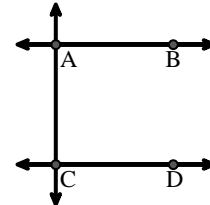
B.



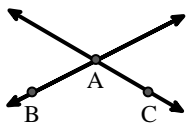
C.



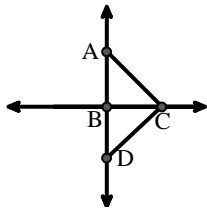
D.



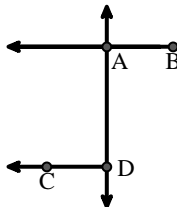
E.



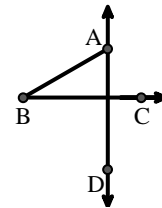
F.



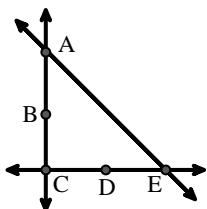
G.



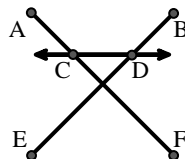
H.



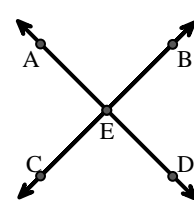
I.



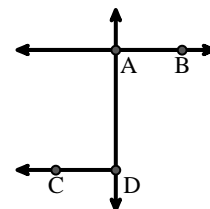
J.



K.



L.





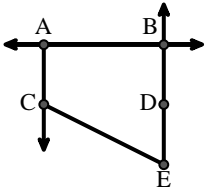
Haga coincidir la descripción de la parte superior con la imagen visual en la parte inferior.

- 1) \overleftrightarrow{AD} intersecting \overleftrightarrow{BC} at point E
- 2) \overrightarrow{AC} parallel to \overrightarrow{EB}
- 3) D as the midpoint of \overleftrightarrow{CE}
- 4) \overleftrightarrow{AC} intersected by \overline{BD}
- 5) \overline{BE} intersecting \overleftrightarrow{CD}
- 6) \overleftrightarrow{BC} intersecting $\angle ACD$
- 7) $\angle BAC$ creating an obtuse angle
- 8) Acute $\angle ABC$ intersecting \overleftrightarrow{AD}
- 9) \overleftrightarrow{AB} intersecting \overleftrightarrow{AD}
- 10) \overrightarrow{BA} intersecting \overleftrightarrow{AD}
- 11) \overleftrightarrow{AB} parallel to \overleftrightarrow{CD}
- 12) Right $\angle ADE$

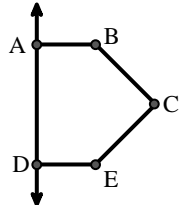
Respuestas

1. **K**
2. **A**
3. **I**
4. **C**
5. **J**
6. **F**
7. **E**
8. **H**
9. **L**
10. **G**
11. **D**
12. **B**

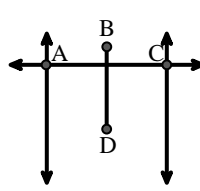
A.



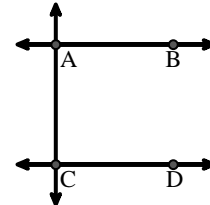
B.



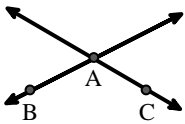
C.



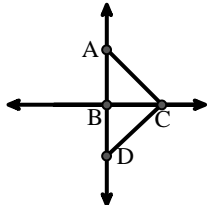
D.



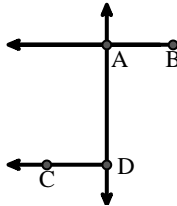
E.



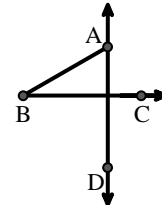
F.



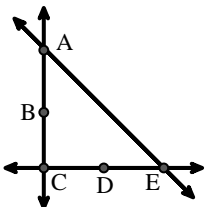
G.



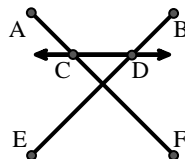
H.



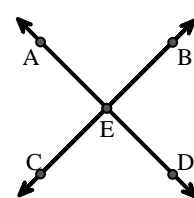
I.



J.



K.



L.

