



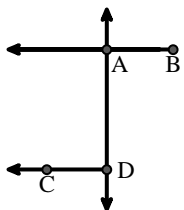
Haga coincidir la descripción de la parte superior con la imagen visual en la parte inferior.

Respuestas

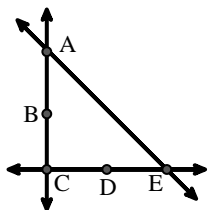
- 1) \overleftrightarrow{BD} intersecting $\angle ACE$
- 2) \overleftrightarrow{AB} intersecting $\angle BCD$ at point B
- 3) D as the midpoint of \overleftrightarrow{CE}
- 4) \overline{BE} intersecting \overleftrightarrow{CD}
- 5) \overleftrightarrow{AC} perpendicular to \overleftrightarrow{AD}
- 6) \overleftrightarrow{AB} intersecting \overleftrightarrow{AD}
- 7) \overleftrightarrow{AB} parallel to \overleftrightarrow{CD}
- 8) \overleftrightarrow{AE} intersecting \overleftrightarrow{DB}
- 9) \overleftrightarrow{AC} intersected by \overline{BD}
- 10) $\angle BAC$ creating an obtuse angle
- 11) Acute $\angle BED$
- 12) \overleftrightarrow{BA} intersecting \overleftrightarrow{AD}

1. _____
2. _____
3. _____
4. _____
5. _____
6. _____
7. _____
8. _____
9. _____
10. _____
11. _____
12. _____

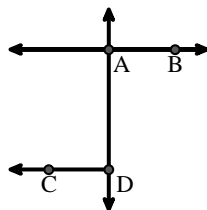
A.



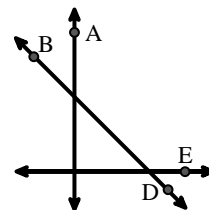
B.



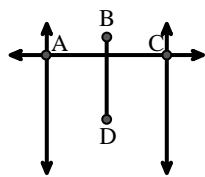
C.



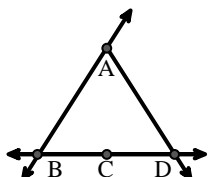
D.



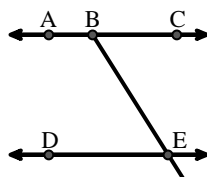
E.



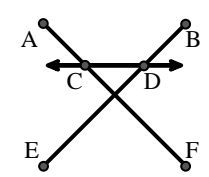
F.



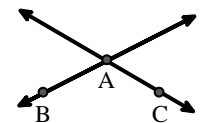
G.



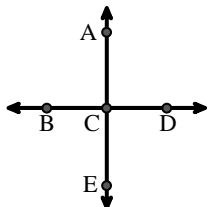
H.



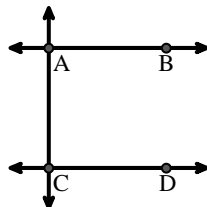
I.



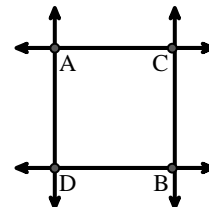
J.



K.



L.





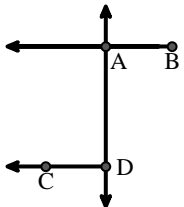
Haga coincidir la descripción de la parte superior con la imagen visual en la parte inferior.

Respuestas

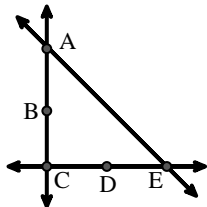
- 1) \overleftrightarrow{BD} intersecting $\angle ACE$
- 2) \overleftrightarrow{AB} intersecting $\angle BCD$ at point B
- 3) D as the midpoint of \overleftrightarrow{CE}
- 4) \overline{BE} intersecting \overleftrightarrow{CD}
- 5) \overleftrightarrow{AC} perpendicular to \overleftrightarrow{AD}
- 6) \overleftrightarrow{AB} intersecting \overleftrightarrow{AD}
- 7) \overleftrightarrow{AB} parallel to \overleftrightarrow{CD}
- 8) \overleftrightarrow{AE} intersecting \overleftrightarrow{DB}
- 9) \overleftrightarrow{AC} intersected by \overline{BD}
- 10) $\angle BAC$ creating an obtuse angle
- 11) Acute $\angle BED$
- 12) \overleftrightarrow{BA} intersecting \overleftrightarrow{AD}

1. **D**
2. **F**
3. **B**
4. **H**
5. **L**
6. **C**
7. **K**
8. **J**
9. **E**
10. **I**
11. **G**
12. **A**

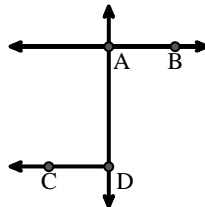
A.



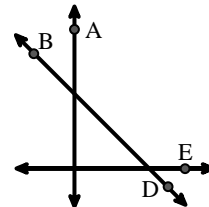
B.



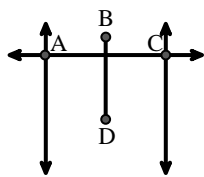
C.



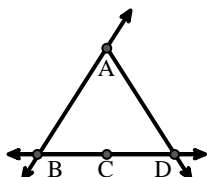
D.



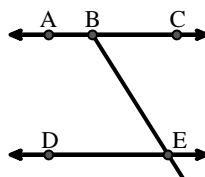
E.



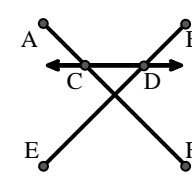
F.



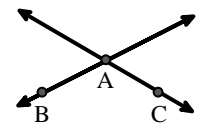
G.



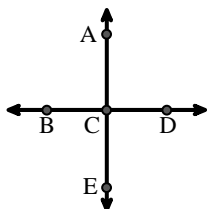
H.



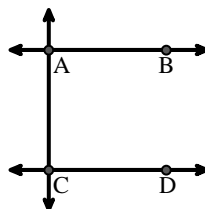
I.



J.



K.



L.

