

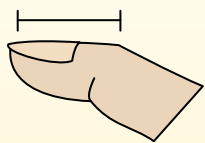


Determina qué letra mejor respresenta la longitud/altura.

Respuestas

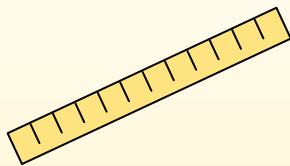
**Polegadas (in)**

Una pulgada es aproximadamente la distancia de la última articulación de su dedo.



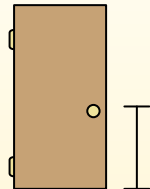
**Pie (pies)**

Um pé mede 12 polegadas. O comprimento de uma régua.



**Jarda (jd)**

1 jarda é o mesmo que 3 pés. Do chão até a maçaneta da porta são cerca de 1 jarda.



**Milla (mi)**

Uma milha equivale a 5.280 pés. A maioria das estradas principais tem pelo menos uma milha de comprimento.



1. \_\_\_\_\_
2. \_\_\_\_\_
3. \_\_\_\_\_
4. \_\_\_\_\_
5. \_\_\_\_\_
6. \_\_\_\_\_
7. \_\_\_\_\_
8. \_\_\_\_\_
9. \_\_\_\_\_


1)



Palomita de maíz

- A. 1 pulgada
- B. 3 pies
- C. 1 mile
- D. 7 pulgadas

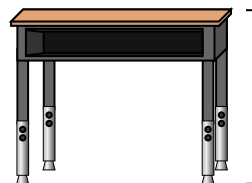
2)



Chupete

- A. 1 mile
- B. 1 pie
- C. 5 pulgadas
- D. 3 pulgadas


3)



Escritorio

- A. 2 yardas
- B. 2 pies
- C. 11 pulgadas
- D. 6 pulgadas

4)



Noria

- A. 6 yardas
- B. 1 mile
- C. 75 pies
- D. 100 pulgadas


5)



Cepillo de dientes

- A. 10 pies
- B. 1 yard
- C. 7 pulgadas
- D. 4 pulgadas

6)



Lata de refresco

- A. 1 yard
- B. 4 pulgadas
- C. 1 pie
- D. 1 pulgada

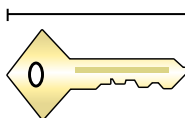
7)



Rana

- A. 2 pies
- B. 1 pie
- C. 3 pulgadas
- D. 9 pulgadas

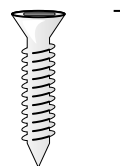
8)



Llave

- A. 5 pies
- B. 2 pulgadas
- C. 6 pulgadas
- D. 2 yardas

9)



Tornillo

- A. 1 yard
- B. 10 pulgadas
- C. 8 pulgadas
- D. 1 pulgada




Determina qué letra mejor respresenta la longitud/altura.

**Respuestas**

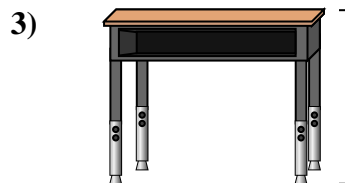
Polegadas (in)	Pie (pies)	Jarda (jd)	Milla (mi)
Una pulgada es aproximadamente la distancia de la última articulación de su dedo.	Um pé mede 12 polegadas. O comprimento de uma régua.	1 jarda é o mesmo que 3 pés. Do chão até a maçaneta da porta são cerca de 1 jarda.	Uma milha equivale a 5.280 pés. A maioria das estradas principais tem pelo menos uma milha de comprimento.




- Palomita de maíz  
 A. 1 pulgada  
 B. 3 pies  
 C. 1 mile  
 D. 7 pulgadas




- Chupete  
 A. 1 mile  
 B. 1 pie  
 C. 5 pulgadas  
 D. 3 pulgadas




- Escritorio  
 A. 2 yardas  
 B. 2 pies  
 C. 11 pulgadas  
 D. 6 pulgadas




- Noria  
 A. 6 yardas  
 B. 1 mile  
 C. 75 pies  
 D. 100 pulgadas



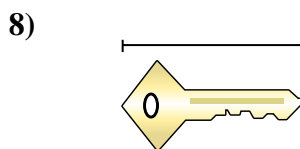
- Cepillo de dientes  
 A. 10 pies  
 B. 1 yard  
 C. 7 pulgadas  
 D. 4 pulgadas



- Lata de refresco  
 A. 1 yard  
 B. 4 pulgadas  
 C. 1 pie  
 D. 1 pulgada



- Rana  
 A. 2 pies  
 B. 1 pie  
 C. 3 pulgadas  
 D. 9 pulgadas



- Llave  
 A. 5 pies  
 B. 2 pulgadas  
 C. 6 pulgadas  
 D. 2 yardas



- Tornillo  
 A. 1 yard  
 B. 10 pulgadas  
 C. 8 pulgadas  
 D. 1 pulgada

1.   **A**    
 2.   **C**    
 3.   **B**    
 4.   **C**    
 5.   **C**    
 6.   **B**    
 7.   **C**    
 8.   **B**    
 9.   **D**

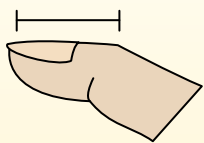


Determina qué letra mejor respresenta la longitud/altura.

Respuestas

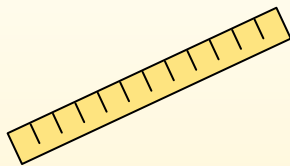
**Polegadas (in)**

Una pulgada es aproximadamente la distancia de la última articulación de su dedo.



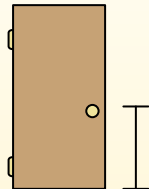
**Pie (pies)**

Um pé mede 12 polegadas. O comprimento de uma régua.



**Jarda (jd)**

1 jarda é o mesmo que 3 pés. Do chão até a maçaneta da porta são cerca de 1 jarda.




**Milla (mi)**

Uma milha equivale a 5.280 pés. A maioria das estradas principais tem pelo menos uma milha de comprimento.



1. \_\_\_\_\_
2. \_\_\_\_\_
3. \_\_\_\_\_
4. \_\_\_\_\_
5. \_\_\_\_\_
6. \_\_\_\_\_
7. \_\_\_\_\_
8. \_\_\_\_\_
9. \_\_\_\_\_

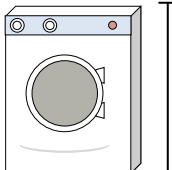
1)



Lata de arvejas

- A. 1 mile
- B. 2 yardas
- C. 4 pulgadas
- D. 4 pies

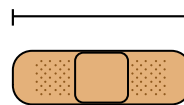
2)



Lavadora

- A. 1 pie
- B. 4 pulgadas
- C. 2 yardas
- D. 3 pies


3)



Bandita

- A. 2 pies
- B. 2 miles
- C. 3 pulgadas
- D. 1 yard


4)



Montaña

- A. 10 yardas
- B. 20 pies
- C. 2 miles
- D. 300 pulgadas


5)



Tajada de pan

- A. 4 pulgadas
- B. 4 pies
- C. 2 yardas
- D. 10 pulgadas

6)



Elefante


- A. 5 pies
- B. 4 yardas
- C. 1 mile
- D. 18 pulgadas

7)

Perro

- A. 4 yardas
- B. 2 pies
- C. 2 yardas
- D. 4 pulgadas

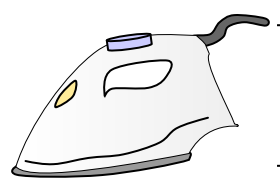
8)



Hoja de cuaderno

- A. 11 pulgadas
- B. 2 pies
- C. 6 pulgadas
- D. 1 yard

9)



Plancha de ropa


- A. 8 pies
- B. 2 pies
- C. 15 pulgadas
- D. 6 pulgadas



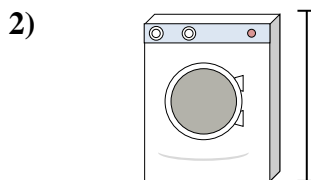
Determina qué letra mejor respresenta la longitud/altura.

Respuestas

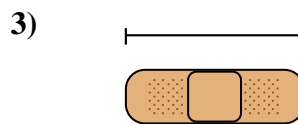
Polegadas (in)	Pie (pies)	Jarda (jd)	Milla (mi)
Una pulgada es aproximadamente la distancia de la última articulación de su dedo.	Um pé mede 12 polegadas. O comprimento de uma régua.	1 jarda é o mesmo que 3 pés. Do chão até a maçaneta da porta são cerca de 1 jarda.	Uma milha equivale a 5.280 pés. A maioria das estradas principais tem pelo menos uma milha de comprimento.




- Lata de arvejas  
 A. 1 mile  
 B. 2 yardas  
 C. 4 pulgadas  
 D. 4 pies




- Lavadora  
 A. 1 pie  
 B. 4 pulgadas  
 C. 2 yardas  
 D. 3 pies




- Bandita  
 A. 2 pies  
 B. 2 miles  
 C. 3 pulgadas  
 D. 1 yard




- Montaña  
 A. 10 yardas  
 B. 20 pies  
 C. 2 miles  
 D. 300 pulgadas




- Tajada de pan  
 A. 4 pulgadas  
 B. 4 pies  
 C. 2 yardas  
 D. 10 pulgadas



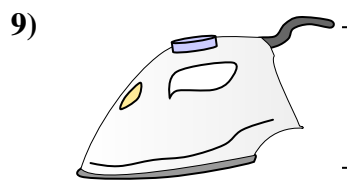
- Elefante  
 A. 5 pies  
 B. 4 yardas  
 C. 1 mile  
 D. 18 pulgadas



- Perro  
 A. 4 yardas  
 B. 2 pies  
 C. 2 yardas  
 D. 4 pulgadas



- Hoja de cuaderno  
 A. 11 pulgadas  
 B. 2 pies  
 C. 6 pulgadas  
 D. 1 yard



- Plancha de ropa  
 A. 8 pies  
 B. 2 pies  
 C. 15 pulgadas  
 D. 6 pulgadas

1.     **C**      
 2.     **D**      
 3.     **C**      
 4.     **C**      
 5.     **A**      
 6.     **B**      
 7.     **B**      
 8.     **A**      
 9.     **D**

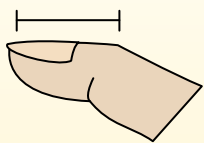


Determina qué letra mejor respresenta la longitud/altura.

Respuestas

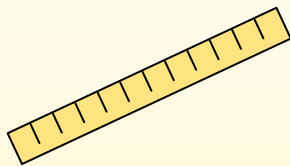
**Polegadas (in)**

Una pulgada es aproximadamente la distancia de la última articulación de su dedo.



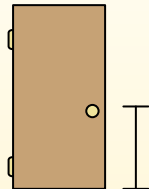
**Pie (pies)**

Um pé mede 12 polegadas. O comprimento de uma régua.



**Jarda (jd)**

1 jarda é o mesmo que 3 pés. Do chão até a maçaneta da porta são cerca de 1 jarda.

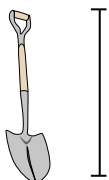


**Milla (mi)**

Uma milha equivale a 5.280 pés. A maioria das estradas principais tem pelo menos uma milha de comprimento.



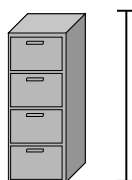
1)



Pala

- A. 4 pies
- B. 2 pies
- C. 3 yardas
- D. 11 pulgadas


2)



Gabinete

- A. 11 pulgadas
- B. 2 pies
- C. 5 pies
- D. 1 pie


3)



Montaña

- A. 10 yardas
- B. 2 miles
- C. 20 pies
- D. 300 pulgadas

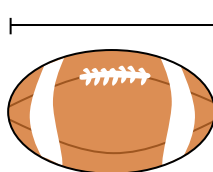
4)



Hoja de cuaderno

- A. 2 pies
- B. 11 pulgadas
- C. 6 pulgadas
- D. 1 yard

5)



Bola de futbol

- A. 11 pulgadas
- B. 1 pulgada
- C. 2 pies
- D. 1 yard


6)



Lapicero

- A. 5 pulgadas
- B. 1 pie
- C. 12 pulgadas
- D. 5 yardas

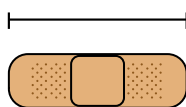
7)



Martillo

- A. 16 pulgadas
- B. 1 pulgada
- C. 4 pulgadas
- D. 1 yard

8)



Bandita

- A. 3 pulgadas
- B. 1 yard
- C. 2 pies
- D. 2 miles

9)



Palomita de maíz

- A. 1 pulgada
- B. 1 mile
- C. 7 pulgadas
- D. 3 pies

- 1. \_\_\_\_\_
- 2. \_\_\_\_\_
- 3. \_\_\_\_\_
- 4. \_\_\_\_\_
- 5. \_\_\_\_\_
- 6. \_\_\_\_\_
- 7. \_\_\_\_\_
- 8. \_\_\_\_\_
- 9. \_\_\_\_\_

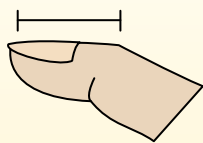


Determina qué letra mejor respresenta la longitud/altura.

Respuestas

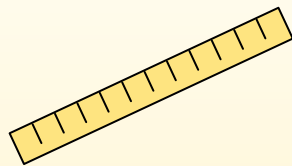
**Polegadas (in)**

Una pulgada es aproximadamente la distancia de la última articulación de su dedo.



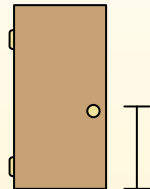
**Pie (pies)**

Um pé mede 12 polegadas. O comprimento de uma régua.



**Jarda (jd)**

1 jarda é o mesmo que 3 pés. Do chão até a maçaneta da porta são cerca de 1 jarda.




**Milla (mi)**

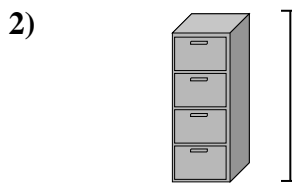
Uma milha equivale a 5.280 pés. A maioria das estradas principais tem pelo menos uma milha de comprimento.




- 1.     **A**
- 2.     **C**
- 3.     **B**
- 4.     **B**
- 5.     **A**
- 6.     **A**
- 7.     **A**
- 8.     **A**
- 9.     **A**




- Pala
- A. 4 pies
  - B. 2 pies
  - C. 3 yardas
  - D. 11 pulgadas



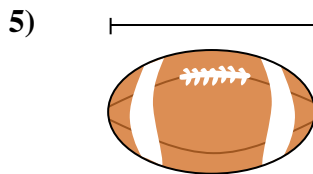
- Gabinete
- A. 11 pulgadas
  - B. 2 pies
  - C. 5 pies
  - D. 1 pie



- Montaña
- A. 10 yardas
  - B. 2 miles
  - C. 20 pies
  - D. 300 pulgadas




- Hoja de cuaderno
- A. 2 pies
  - B. 11 pulgadas
  - C. 6 pulgadas
  - D. 1 yard



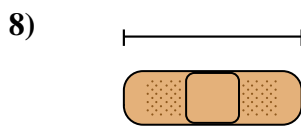
- Bola de futbol
- A. 11 pulgadas
  - B. 1 pulgada
  - C. 2 pies
  - D. 1 yard



- Lapicero
- A. 5 pulgadas
  - B. 1 pie
  - C. 12 pulgadas
  - D. 5 yardas



- Martillo
- A. 16 pulgadas
  - B. 1 pulgada
  - C. 4 pulgadas
  - D. 1 yard



- Bandita
- A. 3 pulgadas
  - B. 1 yard
  - C. 2 pies
  - D. 2 miles



- Palomita de maíz
- A. 1 pulgada
  - B. 1 mile
  - C. 7 pulgadas
  - D. 3 pies

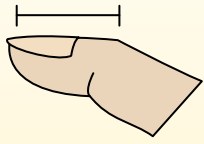


**Determina qué letra mejor respresenta la longitud/altura.**

**Respuestas**

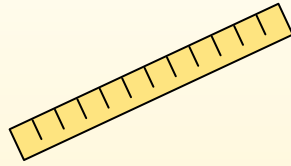
**Polegadas (in)**

Una pulgada es aproximadamente la distancia de la última articulación de su dedo.



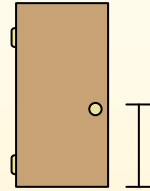
**Pie (pies)**

Um pé mede 12 polegadas. O comprimento de uma régua.



**Jarda (jd)**

1 jarda é o mesmo que 3 pés. Do chão até a maçaneta da porta são cerca de 1 jarda.



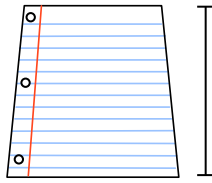
**Milla (mi)**

Uma milha equivale a 5.280 pés. A maioria das estradas principais tem pelo menos uma milha de comprimento.



1. \_\_\_\_\_
2. \_\_\_\_\_
3. \_\_\_\_\_
4. \_\_\_\_\_
5. \_\_\_\_\_
6. \_\_\_\_\_
7. \_\_\_\_\_
8. \_\_\_\_\_
9. \_\_\_\_\_


1)



Hoja de cuaderno

- A. 1 yard
- B. 6 pulgadas
- C. 2 pies
- D. 11 pulgadas

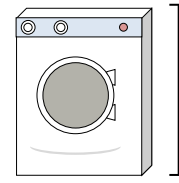
2)



Galón de leche

- A. 11 pies
- B. 9 pulgadas
- C. 6 pulgadas
- D. 3 pulgadas

3)



Lavadora

- A. 4 pulgadas
- B. 1 pie
- C. 3 pies
- D. 2 yardas


4)



Barra de pegamento

- A. 1 pie
- B. 3 pulgadas
- C. 4 miles
- D. 10 pulgadas

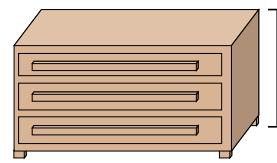
5)



Elefante

- A. 18 pulgadas
- B. 4 yardas
- C. 5 pies
- D. 1 mile

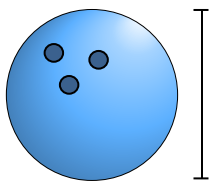
6)



Comoda

- A. 18 pulgadas
- B. 12 pulgadas
- C. 3 pies
- D. 3 yardas

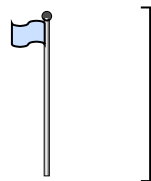
7)



Peso de la bola de bolos

- A. 4 pulgadas
- B. 1 yard
- C. 10 pulgadas
- D. 10 pies

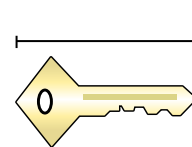
8)



Asta de bandera

- A. 1 mile
- B. 10 yardas
- C. 12 pulgadas
- D. 5 pies

9)



Llave


- A. 5 pies
- B. 2 pulgadas
- C. 6 pulgadas
- D. 2 yardas



Determina qué letra mejor respresenta la longitud/altura.

**Respuestas**

Polegadas (in)	Pie (pies)	Jarda (jd)	Milla (mi)
Una pulgada es aproximadamente la distancia de la última articulación de su dedo.	Um pé mede 12 polegadas. O comprimento de uma régua.	1 jarda é o mesmo que 3 pés. Do chão até a maçaneta da porta são cerca de 1 jarda.	Uma milha equivale a 5.280 pés. A maioria das estradas principais tem pelo menos uma milha de comprimento.



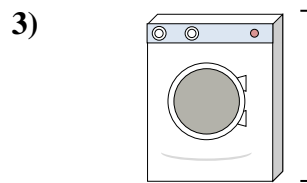
Hoja de cuaderno

- A. 1 yard
- B. 6 pulgadas
- C. 2 pies
- D. 11 pulgadas



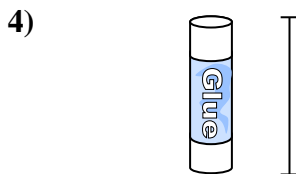
Galón de leche

- A. 11 pies
- B. 9 pulgadas
- C. 6 pulgadas
- D. 3 pulgadas




Lavadora

- A. 4 pulgadas
- B. 1 pie
- C. 3 pies
- D. 2 yardas



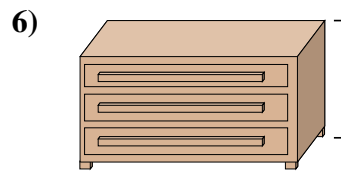
Barra de pegamento

- A. 1 pie
- B. 3 pulgadas
- C. 4 miles
- D. 10 pulgadas




Elefante

- A. 18 pulgadas
- B. 4 yardas
- C. 5 pies
- D. 1 mile



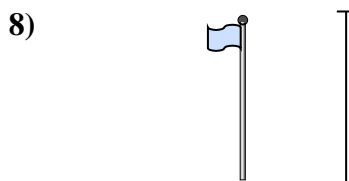
Comoda

- A. 18 pulgadas
- B. 12 pulgadas
- C. 3 pies
- D. 3 yardas



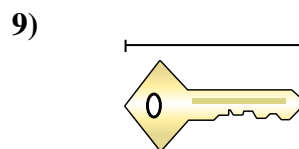
Peso de la bola de bolos

- A. 4 pulgadas
- B. 1 yard
- C. 10 pulgadas
- D. 10 pies



Asta de bandera

- A. 1 mile
- B. 10 yardas
- C. 12 pulgadas
- D. 5 pies



Llave

- A. 5 pies
- B. 2 pulgadas
- C. 6 pulgadas
- D. 2 yardas

- 1.     **D**
- 2.     **B**
- 3.     **C**
- 4.     **B**
- 5.     **B**
- 6.     **C**
- 7.     **C**
- 8.     **B**
- 9.     **B**



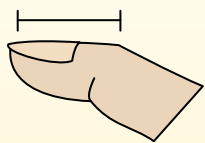


Determina qué letra mejor respresenta la longitud/altura.

Respuestas

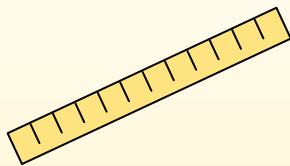
**Polegadas (in)**

Una pulgada es aproximadamente la distancia de la última articulación de su dedo.



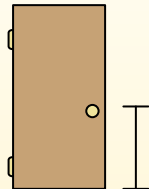
**Pie (pies)**

Um pé mede 12 polegadas. O comprimento de uma régua.




**Jarda (jd)**

1 jarda é o mesmo que 3 pés. Do chão até a maçaneta da porta são cerca de 1 jarda.



**Milla (mi)**

Uma milha equivale a 5.280 pés. A maioria das estradas principais tem pelo menos uma milha de comprimento.



Hoja de cuaderno

- A. 6 pulgadas
- B. 11 pulgadas
- C. 1 yard
- D. 2 pies



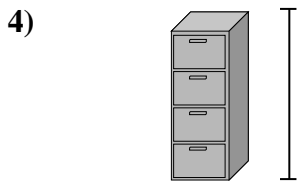
Montaña

- A. 20 pies
- B. 2 miles
- C. 300 pulgadas
- D. 10 yardas




Lapicero

- A. 5 yardas
- B. 12 pulgadas
- C. 5 pulgadas
- D. 1 pie



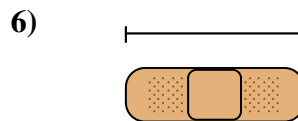
Gabinete

- A. 1 pie
- B. 2 pies
- C. 5 pies
- D. 11 pulgadas




Rana

- A. 1 pie
- B. 2 pies
- C. 3 pulgadas
- D. 9 pulgadas



Bandita

- A. 3 pulgadas
- B. 2 miles
- C. 2 pies
- D. 1 yard



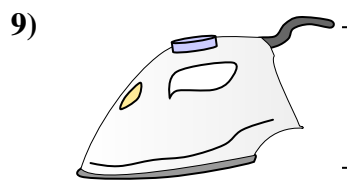
Insecto

- A. 3 yardas
- B. 1 pulgada
- C. 1 pie
- D. 3 pulgadas



Tornillo

- A. 1 pulgada
- B. 10 pulgadas
- C. 8 pulgadas
- D. 1 yard



Plancha de ropa

- A. 15 pulgadas
- B. 6 pulgadas
- C. 2 pies
- D. 8 pies

- 1. \_\_\_\_\_
- 2. \_\_\_\_\_
- 3. \_\_\_\_\_
- 4. \_\_\_\_\_
- 5. \_\_\_\_\_
- 6. \_\_\_\_\_
- 7. \_\_\_\_\_
- 8. \_\_\_\_\_
- 9. \_\_\_\_\_

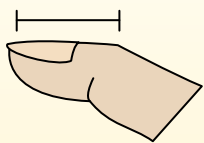


Determina qué letra mejor respresenta la longitud/altura.

Respuestas

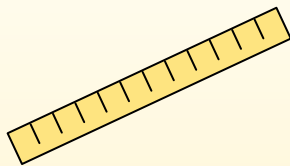
**Polegadas (in)**

Una pulgada es aproximadamente la distancia de la última articulación de su dedo.



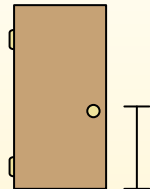
**Pie (pies)**

Um pé mede 12 polegadas. O comprimento de uma régua.




**Jarda (jd)**

1 jarda é o mesmo que 3 pés. Do chão até a maçaneta da porta são cerca de 1 jarda.




**Milla (mi)**

Uma milha equivale a 5.280 pés. A maioria das estradas principais tem pelo menos uma milha de comprimento.



Hoja de cuaderno

- A. 6 pulgadas
- B. 11 pulgadas
- C. 1 yard
- D. 2 pies



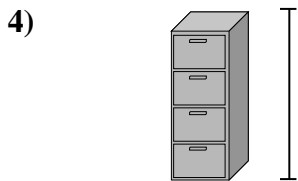
Montaña

- A. 20 pies
- B. 2 miles
- C. 300 pulgadas
- D. 10 yardas




Lapicero

- A. 5 yardas
- B. 12 pulgadas
- C. 5 pulgadas
- D. 1 pie



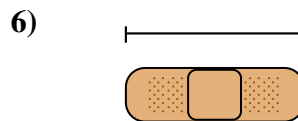
Gabinete

- A. 1 pie
- B. 2 pies
- C. 5 pies
- D. 11 pulgadas




Rana

- A. 1 pie
- B. 2 pies
- C. 3 pulgadas
- D. 9 pulgadas



Bandita

- A. 3 pulgadas
- B. 2 miles
- C. 2 pies
- D. 1 yard



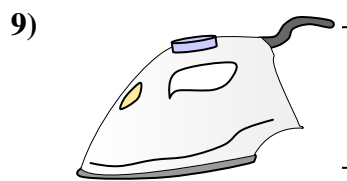
Insecto

- A. 3 yardas
- B. 1 pulgada
- C. 1 pie
- D. 3 pulgadas



Tornillo

- A. 1 pulgada
- B. 10 pulgadas
- C. 8 pulgadas
- D. 1 yard



Plancha de ropa

- A. 15 pulgadas
- B. 6 pulgadas
- C. 2 pies
- D. 8 pies

- 1.     **B**
- 2.     **B**
- 3.     **C**
- 4.     **C**
- 5.     **C**
- 6.     **A**
- 7.     **B**
- 8.     **A**
- 9.     **B**

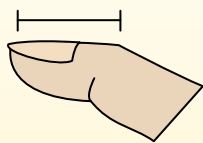


Determina qué letra mejor respresenta la longitud/altura.

Respuestas

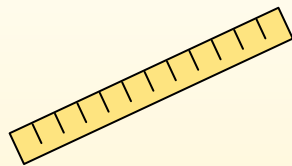
**Polegadas (in)**

Una pulgada es aproximadamente la distancia de la última articulación de su dedo.



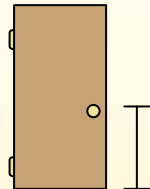
**Pie (pies)**

Um pé mede 12 polegadas. O comprimento de uma régua.



**Jarda (jd)**

1 jarda é o mesmo que 3 pés. Do chão até a maçaneta da porta são cerca de 1 jarda.




**Milla (mi)**

Uma milha equivale a 5.280 pés. A maioria das estradas principais tem pelo menos uma milha de comprimento.




1. \_\_\_\_\_
2. \_\_\_\_\_
3. \_\_\_\_\_
4. \_\_\_\_\_
5. \_\_\_\_\_
6. \_\_\_\_\_
7. \_\_\_\_\_
8. \_\_\_\_\_
9. \_\_\_\_\_

1)



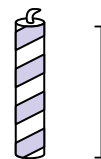
- Cacerola
- A. 4 pulgadas
  - B. 1 pulgada
  - C. 2 pies
  - D. 10 pulgadas

2)



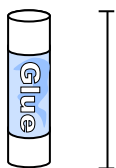
- Martillo
- A. 1 yard
  - B. 16 pulgadas
  - C. 4 pulgadas
  - D. 1 pulgada

3)



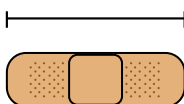
- Vela
- A. 8 pulgadas
  - B. 1 pie
  - C. 3 pulgadas
  - D. 1 mile

4)



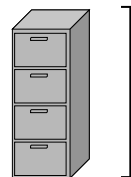
- Barra de pegamento
- A. 1 pie
  - B. 4 miles
  - C. 10 pulgadas
  - D. 3 pulgadas

5)



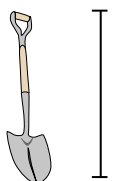
- Bandita
- A. 2 pies
  - B. 2 miles
  - C. 3 pulgadas
  - D. 1 yard

6)




- Gabinete
- A. 5 pies
  - B. 1 pie
  - C. 2 pies
  - D. 11 pulgadas

7)



- Pala
- A. 2 pies
  - B. 4 pies
  - C. 11 pulgadas
  - D. 3 yardas

8)



- Altura del árbol
- A. 1 mile
  - B. 4 pies
  - C. 6 yardas
  - D. 18 pulgadas

9)

- Memoria {USB}
- A. 6 pulgadas
  - B. 11 pulgadas
  - C. 2 pies
  - D. 2 pulgadas

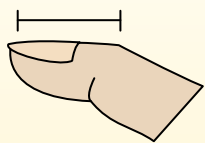


Determina qué letra mejor respresenta la longitud/altura.

Respuestas

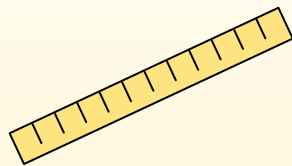
**Polegadas (in)**

Una pulgada es aproximadamente la distancia de la última articulación de su dedo.



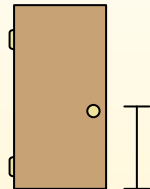
**Pie (pies)**

Um pé mede 12 polegadas. O comprimento de uma régua.



**Jarda (jd)**

1 jarda é o mesmo que 3 pés. Do chão até a maçaneta da porta são cerca de 1 jarda.




**Milla (mi)**

Uma milha equivale a 5.280 pés. A maioria das estradas principais tem pelo menos uma milha de comprimento.




- 1.     **D**
- 2.     **B**
- 3.     **C**
- 4.     **D**
- 5.     **C**
- 6.     **A**
- 7.     **B**
- 8.     **C**
- 9.     **D**

1)



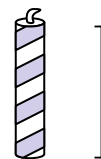
- Cacerola
- A. 4 pulgadas
  - B. 1 pulgada
  - C. 2 pies
  - D. 10 pulgadas

2)



- Martillo
- A. 1 yard
  - B. 16 pulgadas
  - C. 4 pulgadas
  - D. 1 pulgada

3)



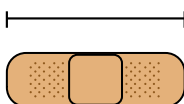
- Vela
- A. 8 pulgadas
  - B. 1 pie
  - C. 3 pulgadas
  - D. 1 mile

4)



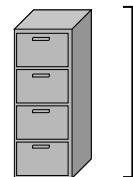
- Barra de pegamento
- A. 1 pie
  - B. 4 miles
  - C. 10 pulgadas
  - D. 3 pulgadas

5)



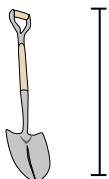
- Bandita
- A. 2 pies
  - B. 2 miles
  - C. 3 pulgadas
  - D. 1 yard

6)



- Gabinete
- A. 5 pies
  - B. 1 pie
  - C. 2 pies
  - D. 11 pulgadas

7)



- Pala
- A. 2 pies
  - B. 4 pies
  - C. 11 pulgadas
  - D. 3 yardas

8)



- Altura del árbol
- A. 1 mile
  - B. 4 pies
  - C. 6 yardas
  - D. 18 pulgadas

9)

- Memoria {USB}
- A. 6 pulgadas
  - B. 11 pulgadas
  - C. 2 pies
  - D. 2 pulgadas

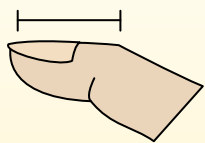


**Determina qué letra mejor respresenta la longitud/altura.**

**Respuestas**

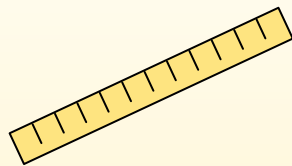
**Polegadas (in)**

Una pulgada es aproximadamente la distancia de la última articulación de su dedo.



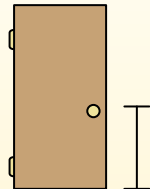
**Pie (pies)**

Um pé mede 12 polegadas. O comprimento de uma régua.



**Jarda (jd)**

1 jarda é o mesmo que 3 pés. Do chão até a maçaneta da porta são cerca de 1 jarda.



**Milla (mi)**

Uma milha equivale a 5.280 pés. A maioria das estradas principais tem pelo menos uma milha de comprimento.



1. \_\_\_\_\_
2. \_\_\_\_\_
3. \_\_\_\_\_
4. \_\_\_\_\_
5. \_\_\_\_\_
6. \_\_\_\_\_
7. \_\_\_\_\_
8. \_\_\_\_\_
9. \_\_\_\_\_

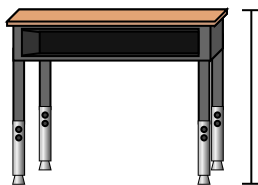
1)



Lapicero

- A. 5 pulgadas
- B. 12 pulgadas
- C. 1 pie
- D. 5 yardas

2)



Escritorio

- A. 6 pulgadas
- B. 2 yardas
- C. 2 pies
- D. 11 pulgadas

3)



Rana

- A. 9 pulgadas
- B. 3 pulgadas
- C. 1 pie
- D. 2 pies

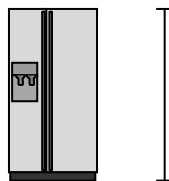
4)



Bicicleta

- A. 3 pulgadas
- B. 1 yard
- C. 3 yardas
- D. 10 pulgadas

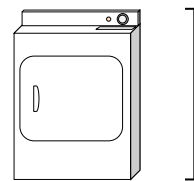
5)



Refrigerador

- A. 6 pies
- B. 1 pie
- C. 12 pulgadas
- D. 4 yardas

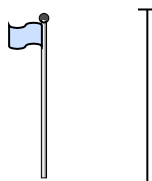
6)



Secadora de ropa

- A. 2 pies
- B. 1 yard
- C. 11 pulgadas
- D. 6 pulgadas


7)



Asta de bandera

- A. 5 pies
- B. 10 yardas
- C. 1 mile
- D. 12 pulgadas

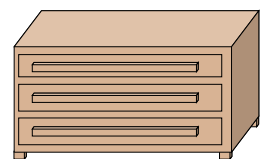
8)



Pelota de tenis

- A. 1 pie
- B. 7 pulgadas
- C. 3 pulgadas
- D. 2 pies

9)



Comoda

- A. 18 pulgadas
- B. 3 pies
- C. 3 yardas
- D. 12 pulgadas

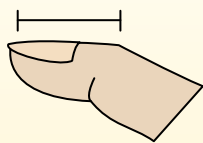


Determina qué letra mejor respresenta la longitud/altura.

Respuestas

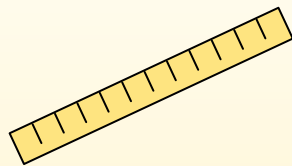
**Polegadas (in)**

Una pulgada es aproximadamente la distancia de la última articulación de su dedo.



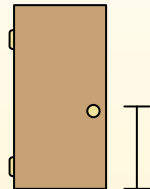
**Pie (pies)**

Um pé mede 12 polegadas. O comprimento de uma régua.



**Jarda (jd)**

1 jarda é o mesmo que 3 pés. Do chão até a maçaneta da porta são cerca de 1 jarda.

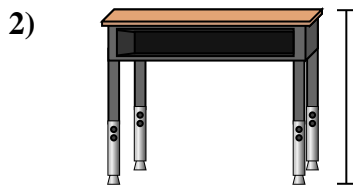


**Milla (mi)**


Uma milha equivale a 5.280 pés. A maioria das estradas principais tem pelo menos uma milha de comprimento.



- Lapicero
- A. 5 pulgadas
  - B. 12 pulgadas
  - C. 1 pie
  - D. 5 yardas



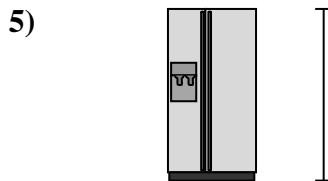
- Escritorio
- A. 6 pulgadas
  - B. 2 yardas
  - C. 2 pies
  - D. 11 pulgadas



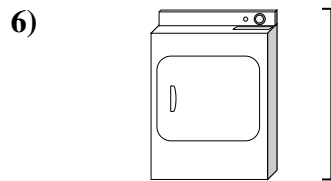
- Rana
- A. 9 pulgadas
  - B. 3 pulgadas
  - C. 1 pie
  - D. 2 pies



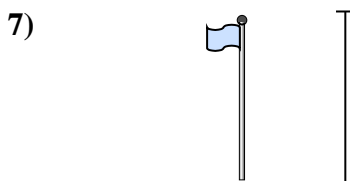
- Bicicleta
- A. 3 pulgadas
  - B. 1 yard
  - C. 3 yardas
  - D. 10 pulgadas




- Refrigerador
- A. 6 pies
  - B. 1 pie
  - C. 12 pulgadas
  - D. 4 yardas



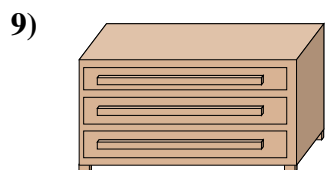
- Secadora de ropa
- A. 2 pies
  - B. 1 yard
  - C. 11 pulgadas
  - D. 6 pulgadas



- Asta de bandera
- A. 5 pies
  - B. 10 yardas
  - C. 1 mile
  - D. 12 pulgadas



- Pelota de tenis
- A. 1 pie
  - B. 7 pulgadas
  - C. 3 pulgadas
  - D. 2 pies



- Comoda
- A. 18 pulgadas
  - B. 3 pies
  - C. 3 yardas
  - D. 12 pulgadas

- 1.     **A**
- 2.     **C**
- 3.     **B**
- 4.     **B**
- 5.     **A**
- 6.     **B**
- 7.     **B**
- 8.     **C**
- 9.     **B**

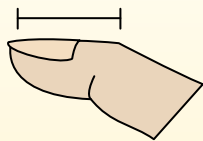


Determina qué letra mejor respresenta la longitud/altura.

Respuestas

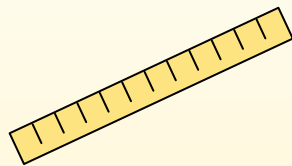
**Polegadas (in)**

Una pulgada es aproximadamente la distancia de la última articulación de su dedo.



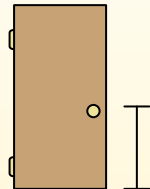
**Pie (pies)**

Um pé mede 12 polegadas. O comprimento de uma régua.



**Jarda (jd)**

1 jarda é o mesmo que 3 pés. Do chão até a maçaneta da porta são cerca de 1 jarda.



**Milla (mi)**

Uma milha equivale a 5.280 pés. A maioria das estradas principais tem pelo menos uma milha de comprimento.



1. \_\_\_\_\_
2. \_\_\_\_\_
3. \_\_\_\_\_
4. \_\_\_\_\_
5. \_\_\_\_\_
6. \_\_\_\_\_
7. \_\_\_\_\_
8. \_\_\_\_\_
9. \_\_\_\_\_

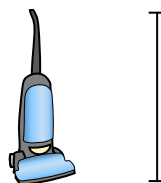
1)



Bicicleta

- A. 3 pulgadas
- B. 10 pulgadas
- C. 1 yard
- D. 3 yardas


2)



Aspiradora

- A. 11 pulgadas
- B. 4 pies
- C. 3 yardas
- D. 1 pie


3)



Cepillo de dientes

- A. 1 yard
- B. 10 pies
- C. 7 pulgadas
- D. 4 pulgadas


4)



Altura de la caja de cereal

- A. 4 pulgadas
- B. 2 pies
- C. 1 pulgada
- D. 1 pie


5)



Elefante

- A. 1 mile
- B. 5 pies
- C. 18 pulgadas
- D. 4 yardas

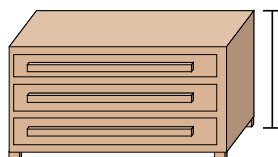
6)



Secadora de ropa

- A. 6 pulgadas
- B. 2 pies
- C. 11 pulgadas
- D. 1 yard

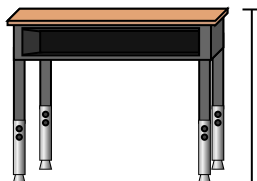
7)



Comoda

- A. 12 pulgadas
- B. 3 yardas
- C. 3 pies
- D. 18 pulgadas

8)



Escritorio

- A. 6 pulgadas
- B. 11 pulgadas
- C. 2 pies
- D. 2 yardas

9)



Insecto

- A. 3 yardas
- B. 3 pulgadas
- C. 1 pie
- D. 1 pulgada

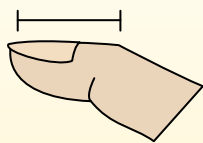


Determina qué letra mejor respresenta la longitud/altura.

Respuestas

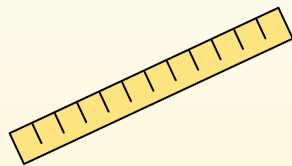
**Polegadas (in)**

Una pulgada es aproximadamente la distancia de la última articulación de su dedo.



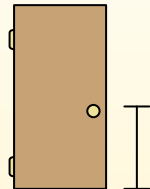
**Pie (pies)**

Um pé mede 12 polegadas. O comprimento de uma régua.



**Jarda (jd)**

1 jarda é o mesmo que 3 pés. Do chão até a maçaneta da porta são cerca de 1 jarda.



**Milla (mi)**

Uma milha equivale a 5.280 pés. A maioria das estradas principais tem pelo menos uma milha de comprimento.




- 1.     **C**
- 2.     **B**
- 3.     **C**
- 4.     **D**
- 5.     **D**
- 6.     **D**
- 7.     **C**
- 8.     **C**
- 9.     **D**




- Bicicleta
- A. 3 pulgadas
  - B. 10 pulgadas
  - C. 1 yard
  - D. 3 yardas




- Aspiradora
- A. 11 pulgadas
  - B. 4 pies
  - C. 3 yardas
  - D. 1 pie



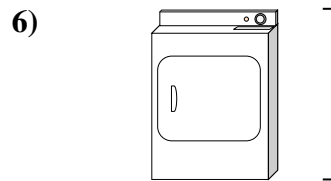
- Cepillo de dientes
- A. 1 yard
  - B. 10 pies
  - C. 7 pulgadas
  - D. 4 pulgadas



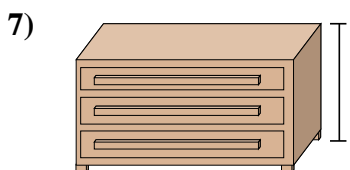
- Altura de la caja de cereal
- A. 4 pulgadas
  - B. 2 pies
  - C. 1 pulgada
  - D. 1 pie



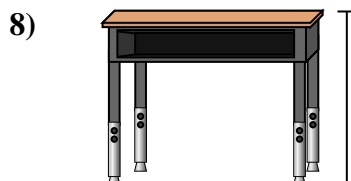
- Elefante
- A. 1 mile
  - B. 5 pies
  - C. 18 pulgadas
  - D. 4 yardas



- Secadora de ropa
- A. 6 pulgadas
  - B. 2 pies
  - C. 11 pulgadas
  - D. 1 yard



- Comoda
- A. 12 pulgadas
  - B. 3 yardas
  - C. 3 pies
  - D. 18 pulgadas



- Escritorio
- A. 6 pulgadas
  - B. 11 pulgadas
  - C. 2 pies
  - D. 2 yardas



- Insecto
- A. 3 yardas
  - B. 3 pulgadas
  - C. 1 pie
  - D. 1 pulgada



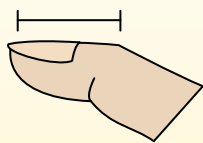


Determina qué letra mejor respresenta la longitud/altura.

Respuestas

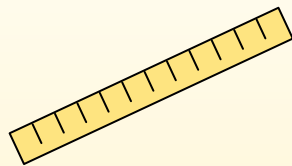
**Polegadas (in)**

Una pulgada es aproximadamente la distancia de la última articulación de su dedo.



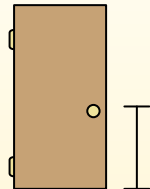
**Pie (pies)**

Um pé mede 12 polegadas. O comprimento de uma régua.



**Jarda (jd)**

1 jarda é o mesmo que 3 pés. Do chão até a maçaneta da porta são cerca de 1 jarda.




**Milla (mi)**

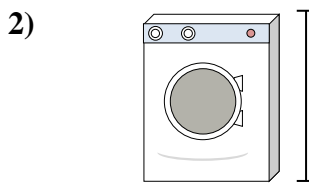
Uma milha equivale a 5.280 pés. A maioria das estradas principais tem pelo menos uma milha de comprimento.




1. \_\_\_\_\_
2. \_\_\_\_\_
3. \_\_\_\_\_
4. \_\_\_\_\_
5. \_\_\_\_\_
6. \_\_\_\_\_
7. \_\_\_\_\_
8. \_\_\_\_\_
9. \_\_\_\_\_



- Lata de refresco
- A. 1 pie
  - B. 1 pulgada
  - C. 1 yard
  - D. 4 pulgadas




- Lavadora
- A. 3 pies
  - B. 1 pie
  - C. 2 yardas
  - D. 4 pulgadas




- Chupete
- A. 1 pie
  - B. 3 pulgadas
  - C. 1 mile
  - D. 5 pulgadas



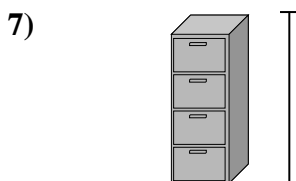
- Bicicleta
- A. 10 pulgadas
  - B. 3 pulgadas
  - C. 1 yard
  - D. 3 yardas



- Pala
- A. 11 pulgadas
  - B. 2 pies
  - C. 4 pies
  - D. 3 yardas



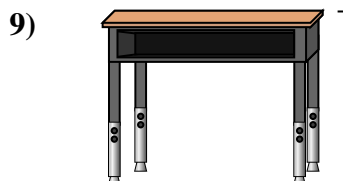
- Peso de la bola de bolos
- A. 10 pulgadas
  - B. 10 pies
  - C. 1 yard
  - D. 4 pulgadas



- Gabinete
- A. 11 pulgadas
  - B. 5 pies
  - C. 1 pie
  - D. 2 pies



- Lapiz
- A. 1 yard
  - B. 7 pulgadas
  - C. 1 pie
  - D. 1 pulgada



- Escritorio
- A. 2 yardas
  - B. 6 pulgadas
  - C. 11 pulgadas
  - D. 2 pies

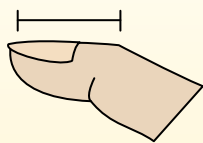


Determina qué letra mejor respresenta la longitud/altura.

Respuestas

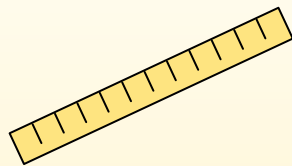
**Polegadas (in)**

Una pulgada es aproximadamente la distancia de la última articulación de su dedo.



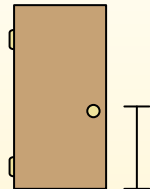
**Pie (pies)**

Um pé mede 12 polegadas. O comprimento de uma régua.



**Jarda (jd)**

1 jarda é o mesmo que 3 pés. Do chão até a maçaneta da porta são cerca de 1 jarda.



**Milla (mi)**

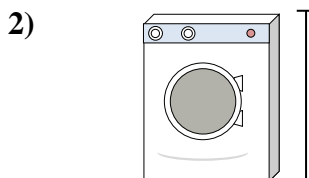
Uma milha equivale a 5.280 pés. A maioria das estradas principais tem pelo menos uma milha de comprimento.




- 1.     **D**
- 2.     **A**
- 3.     **D**
- 4.     **C**
- 5.     **C**
- 6.     **A**
- 7.     **B**
- 8.     **B**
- 9.     **D**



- Lata de refresco
- A. 1 pie
  - B. 1 pulgada
  - C. 1 yard
  - D. 4 pulgadas




- Lavadora
- A. 3 pies
  - B. 1 pie
  - C. 2 yardas
  - D. 4 pulgadas




- Chupete
- A. 1 pie
  - B. 3 pulgadas
  - C. 1 mile
  - D. 5 pulgadas



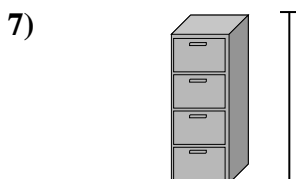
- Bicicleta
- A. 10 pulgadas
  - B. 3 pulgadas
  - C. 1 yard
  - D. 3 yardas



- Pala
- A. 11 pulgadas
  - B. 2 pies
  - C. 4 pies
  - D. 3 yardas



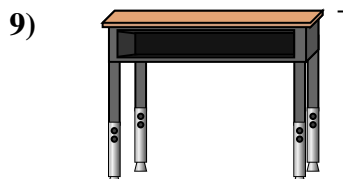
- Peso de la bola de bolos
- A. 10 pulgadas
  - B. 10 pies
  - C. 1 yard
  - D. 4 pulgadas



- Gabinete
- A. 11 pulgadas
  - B. 5 pies
  - C. 1 pie
  - D. 2 pies



- Lapiz
- A. 1 yard
  - B. 7 pulgadas
  - C. 1 pie
  - D. 1 pulgada

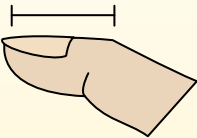
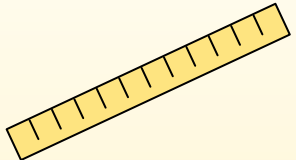
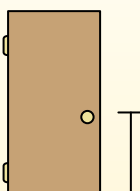



- Escritorio
- A. 2 yardas
  - B. 6 pulgadas
  - C. 11 pulgadas
  - D. 2 pies



**Determina qué letra mejor respresenta la longitud/altura.**

**Respuestas**


Polegadas (in)	Pie (pies)	Jarda (jd)	Milla (mi)
Una pulgada es aproximadamente la distancia de la última articulación de su dedo.	Um pé mede 12 polegadas. O comprimento de uma régua.	1 jarda é o mesmo que 3 pés. Do chão até a maçaneta da porta são cerca de 1 jarda.	Uma milha equivale a 5.280 pés. A maioria das estradas principais tem pelo menos uma milha de comprimento.
			

1)

DVD

- A. 4 pulgadas
- B. 1 yard
- C. 12 pulgadas
- D. 1 pie


2)



Montaña

- A. 10 yardas
- B. 2 miles
- C. 300 pulgadas
- D. 20 pies

3)



Tajada de pan

- A. 4 pies
- B. 2 yardas
- C. 4 pulgadas
- D. 10 pulgadas

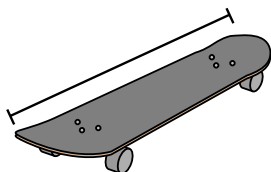
4)



Bicicleta

- A. 3 yardas
- B. 10 pulgadas
- C. 3 pulgadas
- D. 1 yard

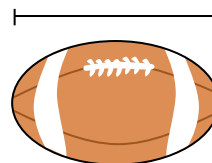
5)



Patineta

- A. 30 pulgadas
- B. 1 pulgada
- C. 2 yardas
- D. 12 pulgadas

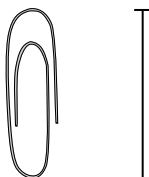
6)



Bola de futbol

- A. 1 yard
- B. 11 pulgadas
- C. 1 pulgada
- D. 2 pies

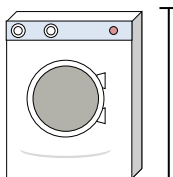
7)



Gancho clip

- A. 1 pulgada
- B. 2 pies
- C. 1 pie
- D. 4 pulgadas

8)



Lavadora

- A. 1 pie
- B. 3 pies
- C. 2 yardas
- D. 4 pulgadas

9)



Barra de pegamento

- A. 3 pulgadas
- B. 1 pie
- C. 10 pulgadas
- D. 4 miles

1. \_\_\_\_\_
2. \_\_\_\_\_
3. \_\_\_\_\_
4. \_\_\_\_\_
5. \_\_\_\_\_
6. \_\_\_\_\_
7. \_\_\_\_\_
8. \_\_\_\_\_
9. \_\_\_\_\_



Determina qué letra mejor respresenta la longitud/altura.

**Respuestas**


Polegadas (in)	Pie (pies)	Jarda (jd)	Milla (mi)
Una pulgada es aproximadamente la distancia de la última articulación de su dedo.	Um pé mede 12 polegadas. O comprimento de uma régua.	1 jarda é o mesmo que 3 pés. Do chão até a maçaneta da porta são cerca de 1 jarda.	Uma milha equivale a 5.280 pés. A maioria das estradas principais tem pelo menos uma milha de comprimento.

1)

DVD

- A. 4 pulgadas
- B. 1 yard
- C. 12 pulgadas
- D. 1 pie


2)



Montaña

- A. 10 yardas
- B. 2 miles
- C. 300 pulgadas
- D. 20 pies

3)



Tajada de pan

- A. 4 pies
- B. 2 yardas
- C. 4 pulgadas
- D. 10 pulgadas

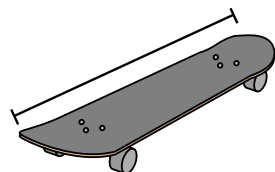
4)



Bicicleta

- A. 3 yardas
- B. 10 pulgadas
- C. 3 pulgadas
- D. 1 yard

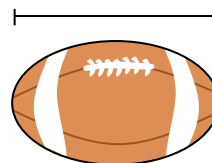
5)



Patineta

- A. 30 pulgadas
- B. 1 pulgada
- C. 2 yardas
- D. 12 pulgadas

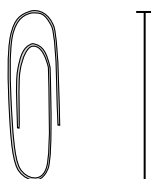
6)



Bola de futbol

- A. 1 yard
- B. 11 pulgadas
- C. 1 pulgada
- D. 2 pies

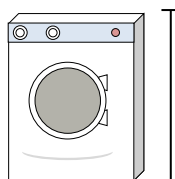
7)



Gancho clip

- A. 1 pulgada
- B. 2 pies
- C. 1 pie
- D. 4 pulgadas

8)



Lavadora

- A. 1 pie
- B. 3 pies
- C. 2 yardas
- D. 4 pulgadas

9)



Barra de pegamento

- A. 3 pulgadas
- B. 1 pie
- C. 10 pulgadas
- D. 4 miles

1.     **A**
2.     **B**
3.     **C**
4.     **D**
5.     **A**
6.     **B**
7.     **A**
8.     **B**
9.     **A**