







Mida cada ITEM punta a punta y luego coloque sus resultados en la gráfica de línea.

Respuestas

Ej) 



Ej. $\frac{1}{4}$



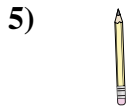
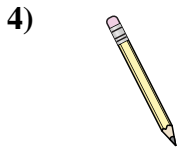
1. _____

2. _____

3. _____

4. _____

5. _____



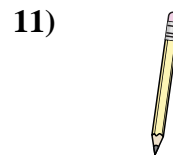


6. _____

7. _____

8. _____

9. _____

10. _____



11. _____

