






Determine la cantidad de dinero que se muestra.



Respuestas

1. _____

2. _____

3. _____

4. _____

5. _____

6. _____

7. _____





8. _____

9. _____

10. _____



Determine la cantidad de dinero que se muestra.



Respuestas

1. **\$0.81**

2. **\$0.95**

3. **\$0.98**

4. **\$0.99**

5. **\$0.96**

6. **\$0.92**

7. **\$0.98**

8. **\$0.99**

9. **\$0.98**

10. **\$0.68**