



Determine la cantidad de dinero que se muestra.

Respuestas




1. _____




2. _____



3. _____



4. _____



5. _____




6. _____



7. _____



8. _____





9. _____



10. _____



Determine la cantidad de dinero que se muestra.



Respuestas

1. **\$0.96**

2. **\$0.96**

3. **\$0.97**

4. **\$0.95**

5. **\$0.95**

6. **\$0.99**

7. **\$0.99**

8. **\$0.98**

9. **\$0.97**

10. **\$0.97**