







Determine la cantidad de dinero que se muestra.



Respuestas

1. **\$0.94**

2. **\$0.81**

3. **\$0.87**

4. **\$0.97**

5. **\$0.96**

6. **\$0.93**

7. **\$0.99**

8. **\$0.77**

9. **\$0.85**

10. **\$0.92**