



Indica el número de monedas de quarters (25 ¢), dimes (10 ¢), nickels (5 ¢) y pennies (1 ¢).

Ej)



Ej. 2 2 2 3

1)



1. _____

2)




2. _____

3)



3. _____

4)




4. _____

5)



5. _____

6)



6. _____

7)




7. _____

8)



8. _____

9)



9. _____

10)



10. _____

Respuestas



Indica el número de monedas de quarters (25 ¢), dimes (10 ¢), nickels (5 ¢) y pennies (1 ¢).

Ej)

1)

2)

3)

4)

5)

6)

7)

8)

9)

10)

Respuestas

Ej.	<u>2</u>	<u>2</u>	<u>2</u>	<u>3</u>
1.	<u>5</u>	<u>1</u>	<u>1</u>	<u>2</u>
2.	<u>2</u>	<u>2</u>	<u>2</u>	<u>3</u>
3.	<u>1</u>	<u>5</u>	<u>2</u>	<u>1</u>
4.	<u>3</u>	<u>1</u>	<u>2</u>	<u>3</u>
5.	<u>3</u>	<u>2</u>	<u>2</u>	<u>2</u>
6.	<u>3</u>	<u>2</u>	<u>2</u>	<u>2</u>
7.	<u>2</u>	<u>2</u>	<u>3</u>	<u>2</u>
8.	<u>2</u>	<u>3</u>	<u>2</u>	<u>2</u>
9.	<u>2</u>	<u>3</u>	<u>2</u>	<u>2</u>
10.	<u>1</u>	<u>4</u>	<u>3</u>	<u>1</u>