




Escribe cada agrupaciones como un problema de suma y resuélvela.



Respuestas

Ej. 3+3=6

1. _____

2. _____

3. _____

4. _____

5. _____

6. _____

7. _____

8. _____

9. _____

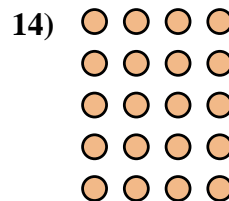
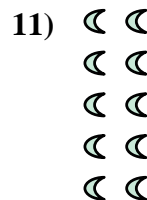



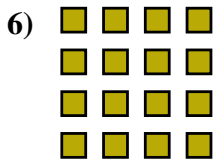
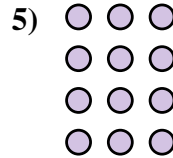

10. _____

11. _____

12. _____

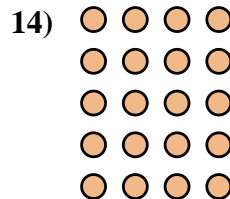
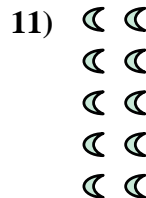



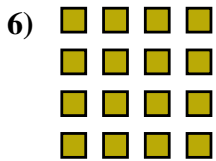
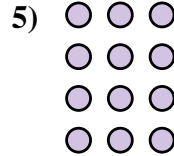


13. _____

14. _____





Escribe cada agrupaciones como un problema de suma y resuélvela.



Respuestas

Ej. 3+3=6

1. 5+5+5=15

2. 3+3+3=9

3. 5+5=10

4. 2+2+2=6

5. 3+3+3+3=12

6. 4+4+4+4=16

7. 2+2+2+2=8

8. 4+4+4=12

9. 5+5+5+5+5=25

10. 5+5+5+5=20

11. 2+2+2+2+2=10

12. 4+4=8

13. 2+2=4

14. 4+4+4+4+4=20