


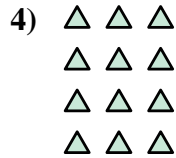



Escribe cada agrupaciones como un problema de suma y resuélvela.

Respuestas



Ej. 4+4+4=12



1. _____

2. _____


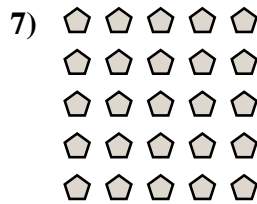
3. _____

4. _____

5. _____

6. _____

7. _____

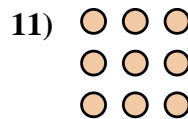

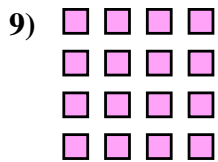


8. _____

9. _____

10. _____

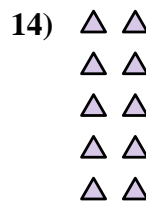
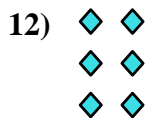
11. _____



12. _____


13. _____

14. _____





Escribe cada agrupaciones como un problema de suma y resuélvela.



Respuestas

Ej. 4+4+4=12

1. 5+5=10

2. 5+5+5=15

3. 5+5+5+5=20

4. 3+3+3+3=12

5. 3+3+3+3+3=15

6. 3+3=6

7. 5+5+5+5+5=25

8. 2+2=4

9. 4+4+4+4=16

10. 2+2+2+2=8

11. 3+3+3=9

12. 2+2+2=6

13. 4+4=8

14. 2+2+2+2+2=10

