
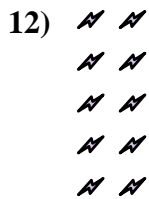
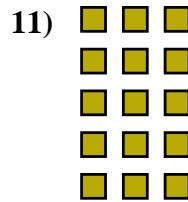
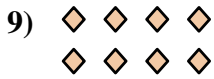




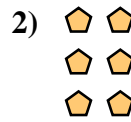




Escribe cada agrupaciones como un problema de suma y resuélvela.



Respuestas

Ej. $2+2=4$

1. _____

2. _____

3. _____

4. _____

5. _____

6. _____

7. _____

8. _____

9. _____

10. _____

11. _____



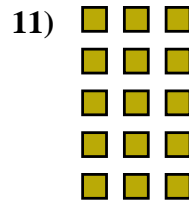


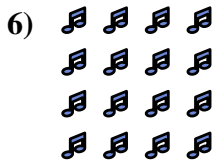



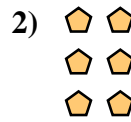
12. _____

13. _____

14. _____



Escribe cada agrupaciones como un problema de suma y resuélvela.



Respuestas

Ej. 2+2=4

1. 3+3+3=9

2. 2+2+2=6

3. 3+3+3+3=12

4. 4+4+4=12

5. 2+2+2+2=8

6. 4+4+4+4=16

7. 5+5+5=15

8. 5+5+5+5=20

9. 4+4=8

10. 3+3=6

11. 3+3+3+3+3=15

12. 2+2+2+2+2=10

13. 5+5=10

14. 4+4+4+4+4=20