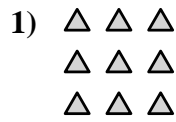
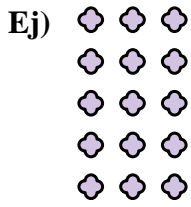




Escribe cada agrupaciones como un problema de suma y resuélvela.

**Respuestas**

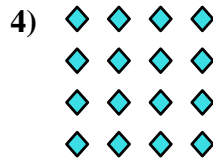



Ej. 3+3+3+3+3=15

1. \_\_\_\_\_

2. \_\_\_\_\_

3. \_\_\_\_\_

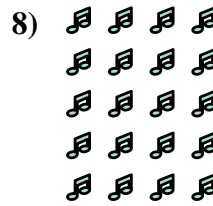


4. \_\_\_\_\_

5. \_\_\_\_\_

6. \_\_\_\_\_

7. \_\_\_\_\_


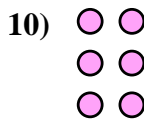
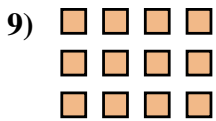


8. \_\_\_\_\_

9. \_\_\_\_\_

10. \_\_\_\_\_

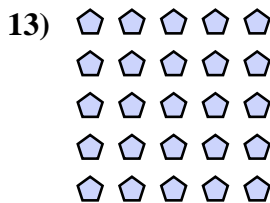
11. \_\_\_\_\_



12. \_\_\_\_\_

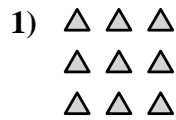
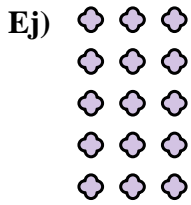
13. \_\_\_\_\_

14. \_\_\_\_\_



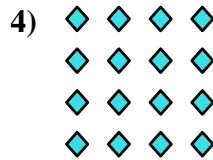



Escribe cada agrupaciones como un problema de suma y resuélvela.



**Respuestas**

Ej.  $3+3+3+3+3=15$



1.  $3+3+3=9$

2.  $3+3=6$

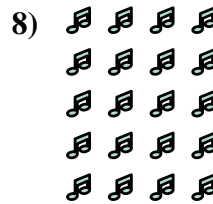
3.  $2+2+2+2=8$

4.  $4+4+4+4=16$

5.  $5+5=10$

6.  $4+4=8$

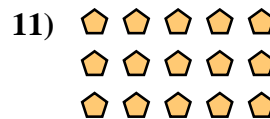
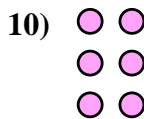
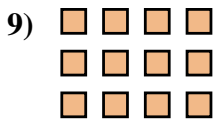
7.  $3+3+3+3=12$



8.  $4+4+4+4+4=20$

9.  $4+4+4=12$

10.  $2+2+2=6$



11.  $5+5+5=15$

12.  $5+5+5+5=20$

13.  $5+5+5+5+5=25$

14.  $2+2=4$

