
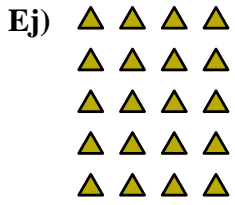




Escribe cada agrupaciones como un problema de suma y resuélvela.

**Respuestas**

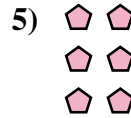


Ej.  $4+4+4+4+4=20$

1. \_\_\_\_\_

2. \_\_\_\_\_

3. \_\_\_\_\_



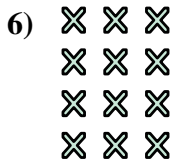


4. \_\_\_\_\_

5. \_\_\_\_\_

6. \_\_\_\_\_

7. \_\_\_\_\_

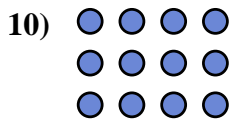


8. \_\_\_\_\_

9. \_\_\_\_\_

10. \_\_\_\_\_

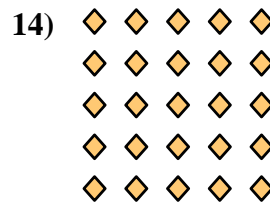
11. \_\_\_\_\_



12. \_\_\_\_\_

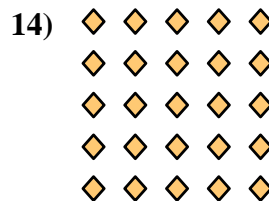



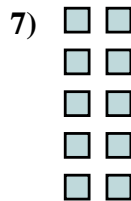
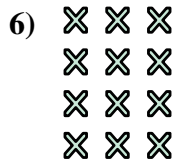
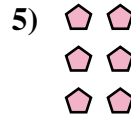

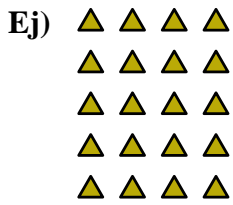
13. \_\_\_\_\_

14. \_\_\_\_\_





Escribe cada agrupaciones como un problema de suma y resuélvela.



**Respuestas**

Ej.  $4+4+4+4+4=20$

1.  $2+2+2+2=8$

2.  $2+2=4$

3.  $3+3+3+3+3=15$

4.  $4+4+4+4=16$

5.  $2+2+2=6$

6.  $3+3+3+3=12$

7.  $2+2+2+2+2=10$

8.  $3+3+3=9$

9.  $3+3=6$

10.  $4+4+4=12$

11.  $5+5=10$

12.  $4+4=8$

13.  $5+5+5=15$

14.  $5+5+5+5+5=25$