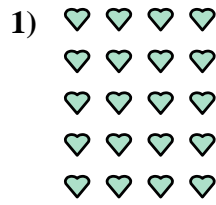





Escribe cada agrupaciones como un problema de suma y resuélvela.



**Respuestas**

Ej.  $4+4+4+4=16$

1. \_\_\_\_\_

2. \_\_\_\_\_

3. \_\_\_\_\_

4. \_\_\_\_\_

5. \_\_\_\_\_

6. \_\_\_\_\_

7. \_\_\_\_\_

8. \_\_\_\_\_

9. \_\_\_\_\_




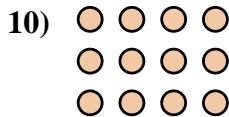
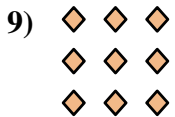

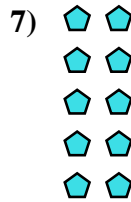
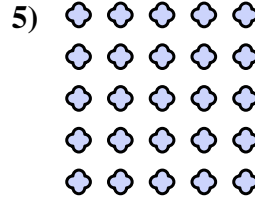

10. \_\_\_\_\_

11. \_\_\_\_\_

12. \_\_\_\_\_



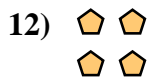

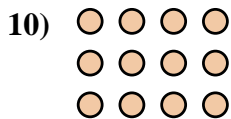
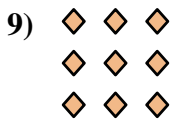
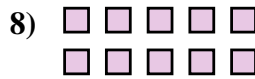
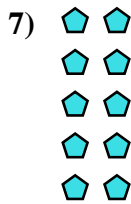
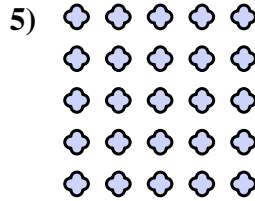

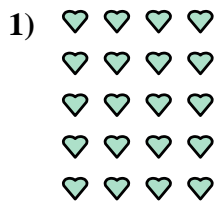

13. \_\_\_\_\_

14. \_\_\_\_\_





Escribe cada agrupaciones como un problema de suma y resuélvela.



**Respuestas**

Ej. 4+4+4+4=16

1. 4+4+4+4+4=20

2. 5+5+5+5=20

3. 3+3=6

4. 3+3+3+3=12

5. 5+5+5+5+5=25

6. 5+5+5=15

7. 2+2+2+2+2=10

8. 5+5=10

9. 3+3+3=9

10. 4+4+4=12

11. 2+2+2+2=8

12. 2+2=4

13. 2+2+2=6

14. 4+4=8