




Escribe cada agrupaciones como un problema de suma y resuélvela.



Respuestas

Ej. 3+3=6

1. _____

2. _____

3. _____

4. _____

5. _____

6. _____

7. _____

8. _____

9. _____

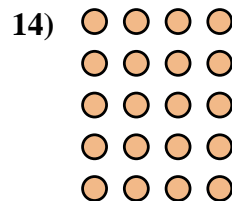
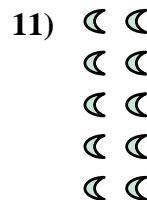



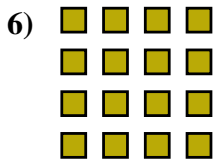
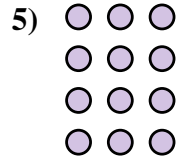

10. _____

11. _____

12. _____


13. _____

14. _____





Escribe cada agrupaciones como un problema de suma y resuélvela.



Respuestas

Ej. 3+3=6

1. 5+5+5=15

2. 3+3+3=9

3. 5+5=10

4. 2+2+2=6

5. 3+3+3+3=12

6. 4+4+4+4=16

7. 2+2+2+2=8

8. 4+4+4=12

9. 5+5+5+5+5=25

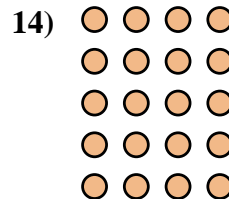
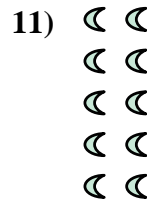



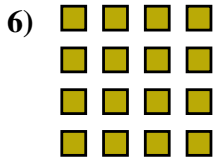
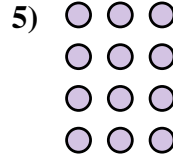

10. 5+5+5+5=20

11. 2+2+2+2+2=10

12. 4+4=8

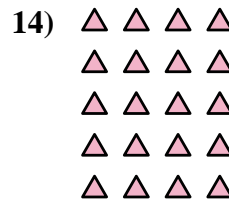
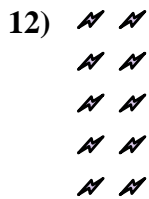
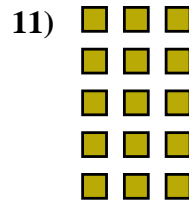




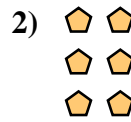
13. 2+2=4

14. 4+4+4+4+4=20





Escribe cada agrupaciones como un problema de suma y resuélvela.



Respuestas

Ej. $2+2=4$

1. _____

2. _____

3. _____

4. _____

5. _____

6. _____

7. _____

8. _____

9. _____

10. _____

11. _____


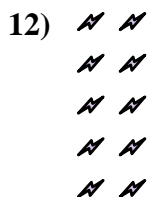
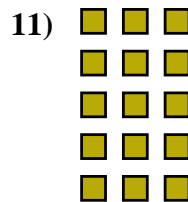



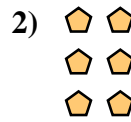
12. _____

13. _____

14. _____



Escribe cada agrupaciones como un problema de suma y resuélvela.



Respuestas

Ej. 2+2=4

1. 3+3+3=9

2. 2+2+2=6

3. 3+3+3+3=12

4. 4+4+4=12

5. 2+2+2+2=8

6. 4+4+4+4=16

7. 5+5+5=15

8. 5+5+5+5=20

9. 4+4=8

10. 3+3=6

11. 3+3+3+3+3=15

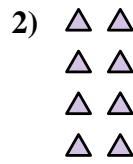
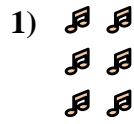
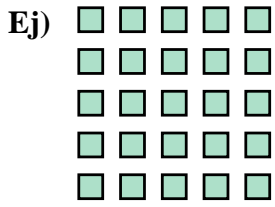
12. 2+2+2+2+2=10

13. 5+5=10

14. 4+4+4+4+4=20



Escribe cada agrupaciones como un problema de suma y resuélvela.



Respuestas

Ej. $5+5+5+5+5=25$

1. _____

2. _____

3. _____

4. _____

5. _____

6. _____

7. _____

8. _____

9. _____

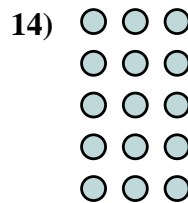
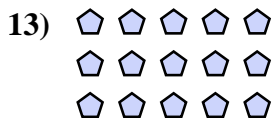
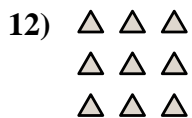
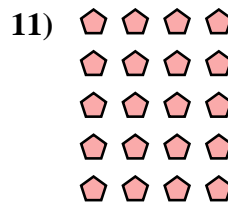
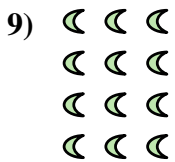


10. _____

11. _____

12. _____

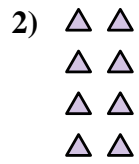
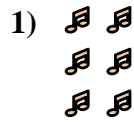
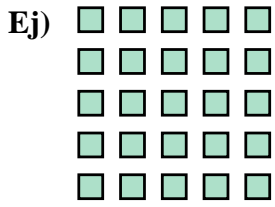
13. _____

14. _____





Escribe cada agrupaciones como un problema de suma y resuélvela.



Respuestas

Ej. $5+5+5+5+5=25$

1. $2+2+2=6$

2. $2+2+2+2=8$

3. $3+3=6$

4. $5+5+5+5=20$

5. $2+2+2+2+2=10$

6. $2+2=4$

7. $4+4+4=12$

8. $5+5=10$

9. $3+3+3+3=12$

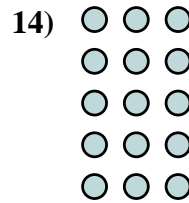
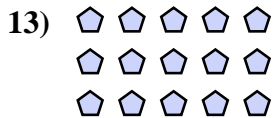
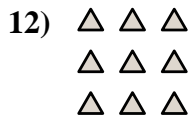
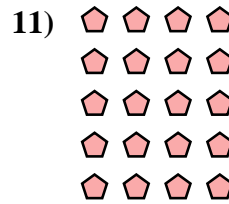
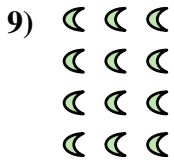


10. $4+4+4+4=16$

11. $4+4+4+4+4=20$

12. $3+3+3=9$

13. $5+5+5=15$

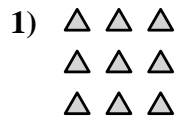
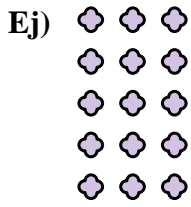
14. $3+3+3+3+3=15$





Escribe cada agrupaciones como un problema de suma y resuélvela.

Respuestas

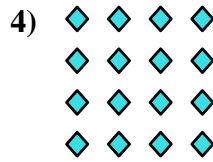



Ej. 3+3+3+3+3=15

1. _____

2. _____

3. _____

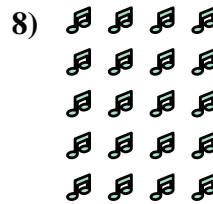


4. _____

5. _____

6. _____

7. _____


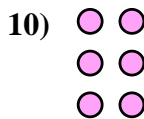
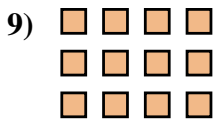


8. _____

9. _____

10. _____

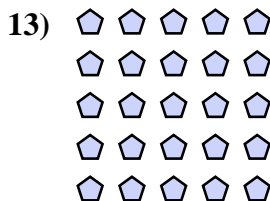
11. _____



12. _____

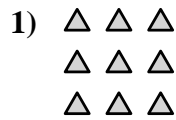
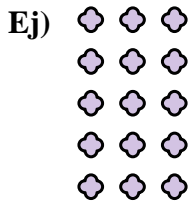
13. _____

14. _____



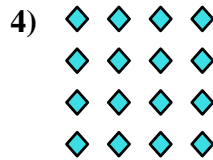



Escribe cada agrupaciones como un problema de suma y resuélvela.



Respuestas

Ej. $3+3+3+3+3=15$



1. $3+3+3=9$

2. $3+3=6$

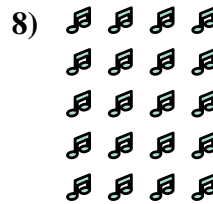
3. $2+2+2+2=8$

4. $4+4+4+4=16$

5. $5+5=10$

6. $4+4=8$

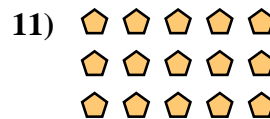
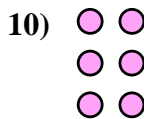
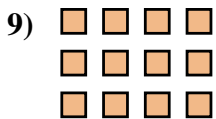
7. $3+3+3+3=12$



8. $4+4+4+4+4=20$

9. $4+4+4=12$

10. $2+2+2=6$

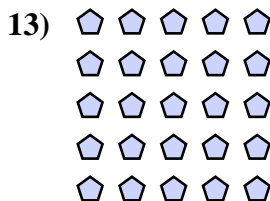


11. $5+5+5=15$

12. $5+5+5+5=20$

13. $5+5+5+5+5=25$

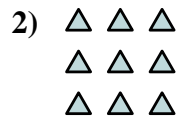

14. $2+2=4$





Escribe cada agrupaciones como un problema de suma y resuélvela.

Respuestas

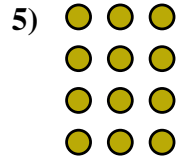
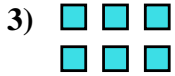


Ej. 2+2=4

1. _____

2. _____

3. _____


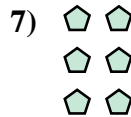


4. _____

5. _____

6. _____


7. _____



8. _____

9. _____

10. _____


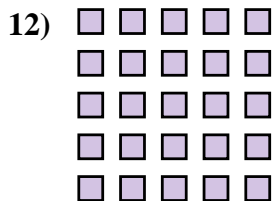


11. _____

12. _____

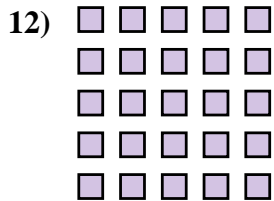


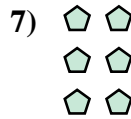
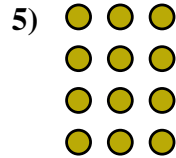
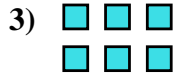
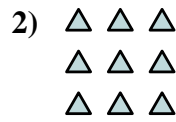

13. _____

14. _____





Escribe cada agrupaciones como un problema de suma y resuélvela.



Respuestas

Ej. 2+2=4

1. 2+2+2+2+2=10

2. 3+3+3=9

3. 3+3=6

4. 4+4+4=12

5. 3+3+3+3=12

6. 4+4+4+4+4=20

7. 2+2+2=6

8. 3+3+3+3+3=15

9. 5+5=10

10. 2+2+2+2=8

11. 5+5+5=15

12. 5+5+5+5+5=25


13. 4+4=8

14. 4+4+4+4=16



Escribe cada agrupaciones como un problema de suma y resuélvela.

Respuestas

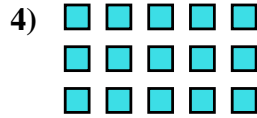


Ej. $4+4+4+4=16$

1. _____

2. _____

3. _____

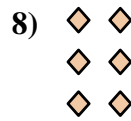



4. _____

5. _____

6. _____

7. _____



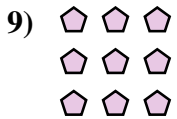


8. _____

9. _____

10. _____


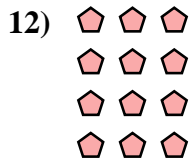
11. _____



12. _____


13. _____

14. _____





Escribe cada agrupaciones como un problema de suma y resuélvela.



Respuestas

Ej. 4+4+4+4=16

1. 4+4=8

2. 2+2+2+2+2=10

3. 4+4+4=12

4. 5+5+5=15

5. 3+3=6

6. 5+5+5+5=20

7. 3+3+3+3+3=15

8. 2+2+2=6

9. 3+3+3=9


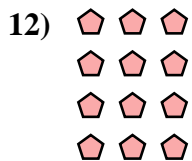


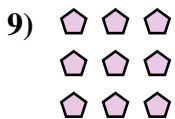
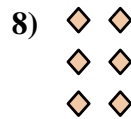

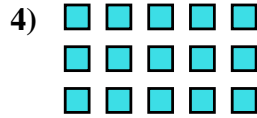
10. 5+5+5+5+5=25

11. 4+4+4+4+4=20

12. 3+3+3+3=12

13. 2+2=4


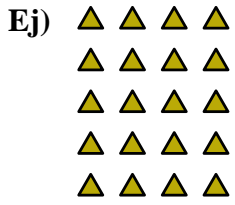
14. 5+5=10





Escribe cada agrupaciones como un problema de suma y resuélvela.

Respuestas

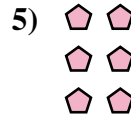


Ej. $4+4+4+4+4=20$

1. _____

2. _____

3. _____


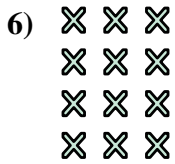


4. _____

5. _____

6. _____

7. _____

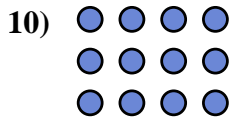



8. _____

9. _____

10. _____

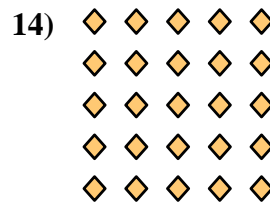
11. _____



12. _____

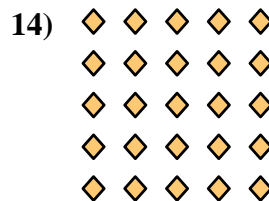



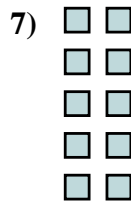
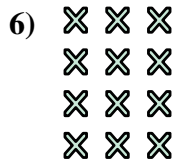
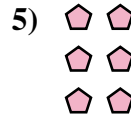
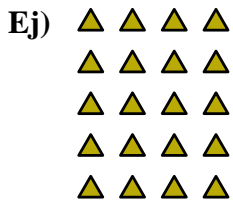
13. _____

14. _____





Escribe cada agrupaciones como un problema de suma y resuélvela.



Respuestas

Ej. $4+4+4+4+4=20$

1. $2+2+2+2=8$

2. $2+2=4$

3. $3+3+3+3+3=15$

4. $4+4+4+4=16$

5. $2+2+2=6$

6. $3+3+3+3=12$

7. $2+2+2+2+2=10$

8. $3+3+3=9$

9. $3+3=6$

10. $4+4+4=12$

11. $5+5=10$

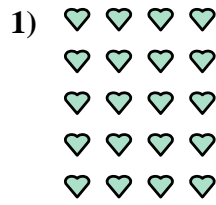

12. $4+4=8$

13. $5+5+5=15$

14. $5+5+5+5+5=25$



Escribe cada agrupaciones como un problema de suma y resuélvela.



Respuestas

Ej. $4+4+4+4=16$

1. _____

2. _____

3. _____

4. _____

5. _____

6. _____

7. _____

8. _____

9. _____



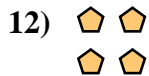
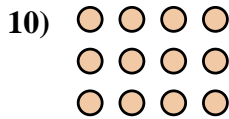
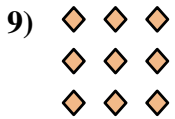
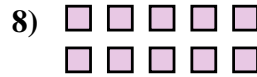
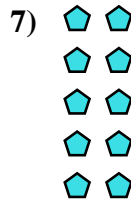
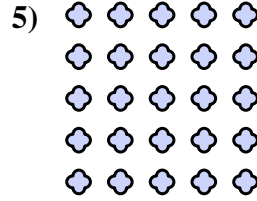

10. _____

11. _____

12. _____



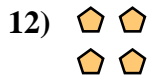

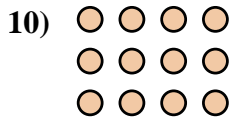
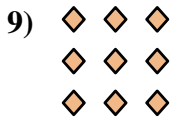
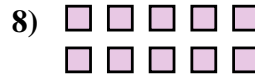
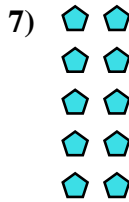
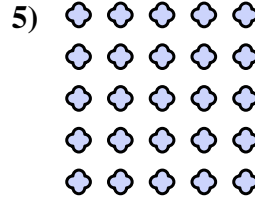

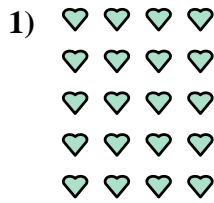

13. _____

14. _____





Escribe cada agrupaciones como un problema de suma y resuélvela.



Respuestas

Ej. 4+4+4+4=16

1. 4+4+4+4+4=20

2. 5+5+5+5=20

3. 3+3=6

4. 3+3+3+3=12

5. 5+5+5+5+5=25

6. 5+5+5=15

7. 2+2+2+2+2=10

8. 5+5=10

9. 3+3+3=9

10. 4+4+4=12

11. 2+2+2+2=8

12. 2+2=4

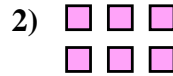
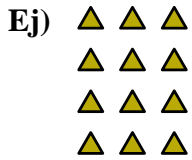
13. 2+2+2=6

14. 4+4=8



Escribe cada agrupaciones como un problema de suma y resuélvela.

Respuestas

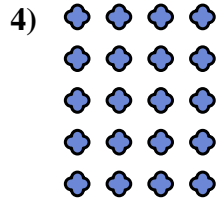



Ej. $3+3+3+3=12$

1. _____

2. _____

3. _____

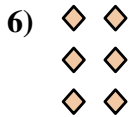


4. _____

5. _____

6. _____

7. _____

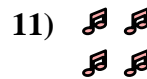
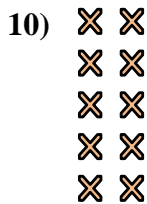
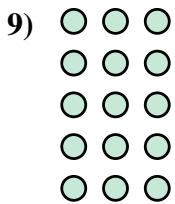


8. _____

9. _____

10. _____




11. _____



12. _____




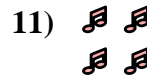


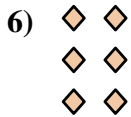
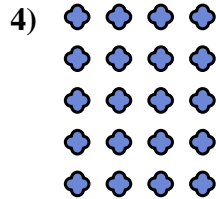

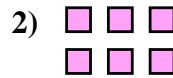
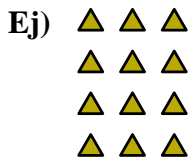
13. _____

14. _____





Escribe cada agrupaciones como un problema de suma y resuélvela.



Respuestas

Ej. 3+3+3+3=12

1. 3+3+3=9

2. 3+3=6

3. 4+4+4=12

4. 4+4+4+4+4=20

5. 5+5=10

6. 2+2+2=6

7. 4+4=8

8. 4+4+4+4=16

9. 3+3+3+3+3=15

10. 2+2+2+2+2=10

11. 2+2=4

12. 5+5+5+5=20


13. 5+5+5=15

14. 2+2+2+2=8

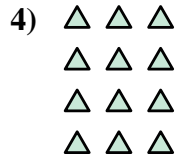



Escribe cada agrupaciones como un problema de suma y resuélvela.

Respuestas



Ej. 4+4+4=12



1. _____

2. _____


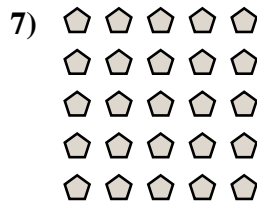
3. _____

4. _____

5. _____

6. _____

7. _____

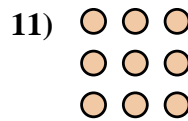

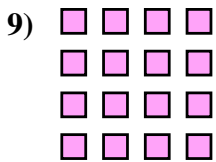


8. _____

9. _____

10. _____

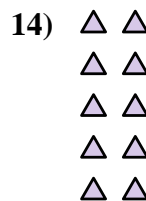
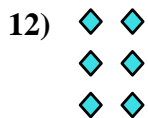
11. _____



12. _____


13. _____

14. _____





Escribe cada agrupaciones como un problema de suma y resuélvela.



Respuestas

Ej. 4+4+4=12

1. 5+5=10

2. 5+5+5=15

3. 5+5+5+5=20

4. 3+3+3+3=12

5. 3+3+3+3+3=15

6. 3+3=6

7. 5+5+5+5+5=25

8. 2+2=4

9. 4+4+4+4=16

10. 2+2+2+2=8

11. 3+3+3=9

12. 2+2+2=6

13. 4+4=8

14. 2+2+2+2+2=10

