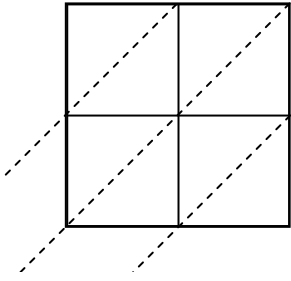


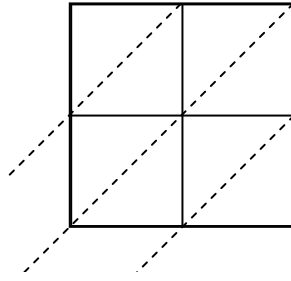


Usar la multiplicación en cuadrícula para resolver cada problema.

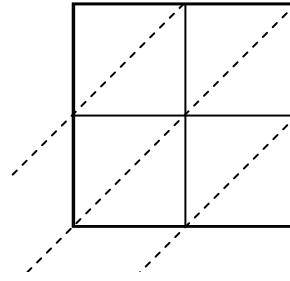
1)  $99 \times 31 =$



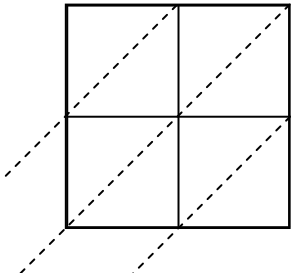
2)  $93 \times 58 =$



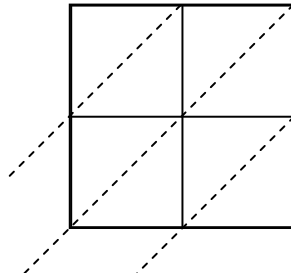
3)  $46 \times 16 =$



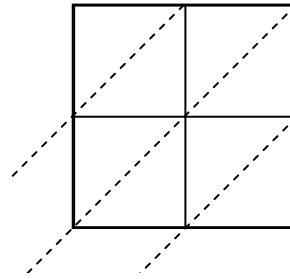
4)  $74 \times 35 =$



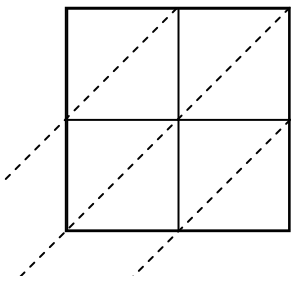
5)  $96 \times 28 =$



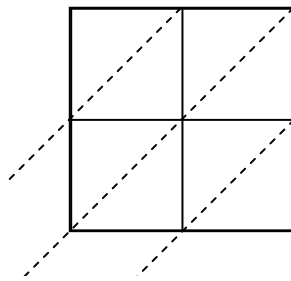
6)  $30 \times 84 =$



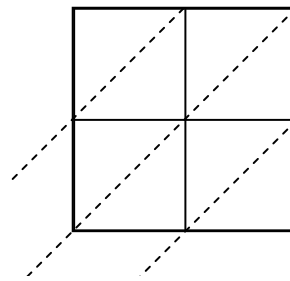
7)  $55 \times 37 =$



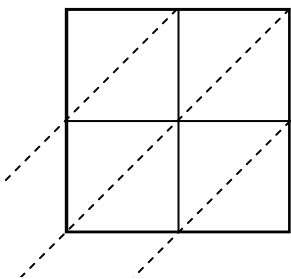
8)  $43 \times 91 =$



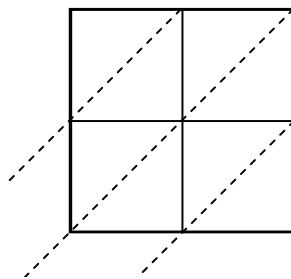
9)  $78 \times 20 =$



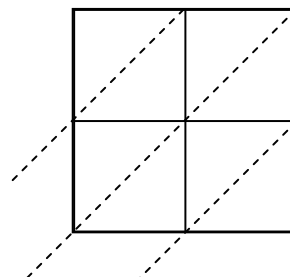
10)  $84 \times 10 =$



11)  $61 \times 10 =$



12)  $47 \times 15 =$



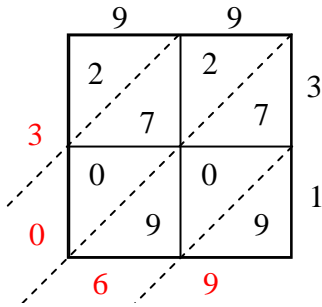
**Respuestas**

1. \_\_\_\_\_
2. \_\_\_\_\_
3. \_\_\_\_\_
4. \_\_\_\_\_
5. \_\_\_\_\_
6. \_\_\_\_\_
7. \_\_\_\_\_
8. \_\_\_\_\_
9. \_\_\_\_\_
10. \_\_\_\_\_
11. \_\_\_\_\_
12. \_\_\_\_\_

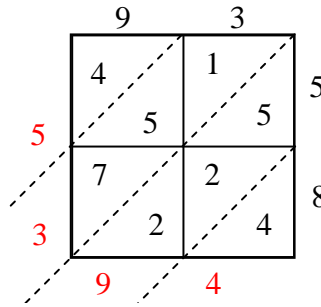


Usar la multiplicación en cuadrícula para resolver cada problema.

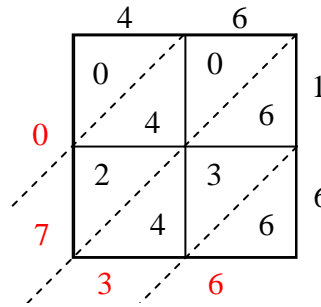
1)  $99 \times 31 =$



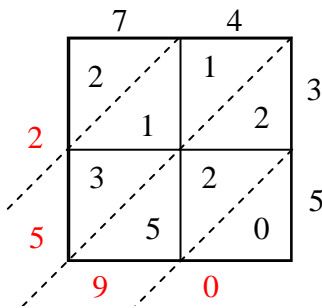
2)  $93 \times 58 =$



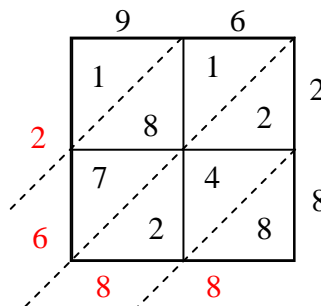
3)  $46 \times 16 =$



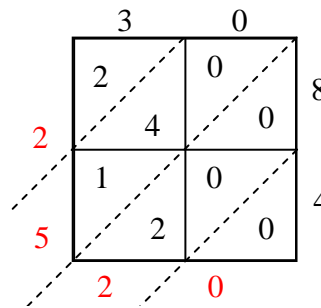
4)  $74 \times 35 =$



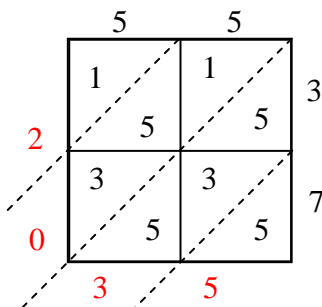
5)  $96 \times 28 =$



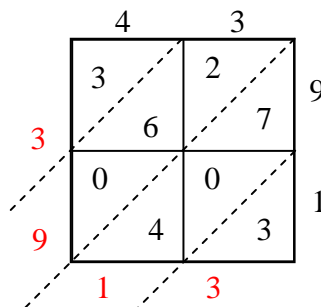
6)  $30 \times 84 =$



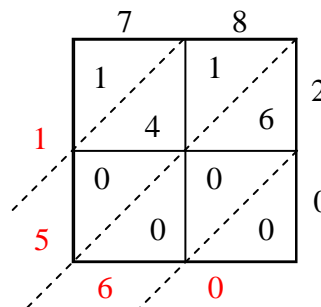
7)  $55 \times 37 =$



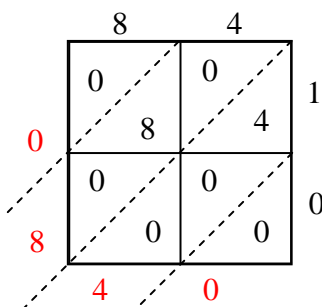
8)  $43 \times 91 =$



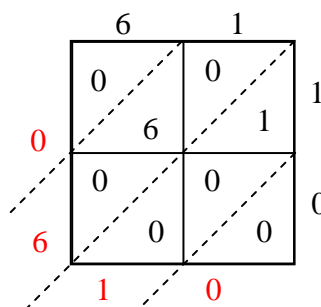
9)  $78 \times 20 =$



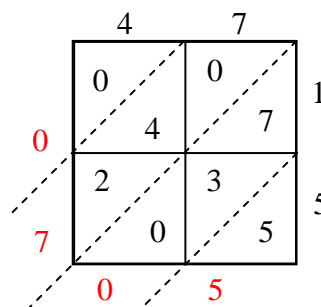
10)  $84 \times 10 =$



11)  $61 \times 10 =$



12)  $47 \times 15 =$



**Respuestas**

1. **3,069**
2. **5,394**
3. **736**
4. **2,590**
5. **2,688**
6. **2,520**
7. **2,035**
8. **3,913**
9. **1,560**
10. **840**
11. **610**
12. **705**