



Usa la multiplicación en cuadrícula para resolver cada problema.

1) $927 \times 78 =$



2) $669 \times 51 =$



3) $864 \times 95 =$



4) $709 \times 28 =$



5) $776 \times 14 =$



6) $743 \times 46 =$



7) $139 \times 10 =$



8) $139 \times 15 =$



9) $652 \times 85 =$



10) $692 \times 17 =$



11) $362 \times 41 =$



12) $355 \times 63 =$



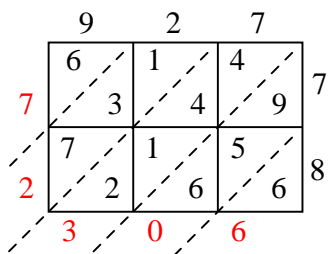
Respuestas

- 1. _____
- 2. _____
- 3. _____
- 4. _____
- 5. _____
- 6. _____
- 7. _____
- 8. _____
- 9. _____
- 10. _____
- 11. _____
- 12. _____

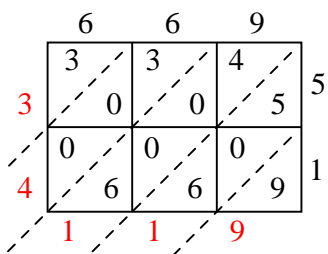


Usa la multiplicación en cuadrícula para resolver cada problema.

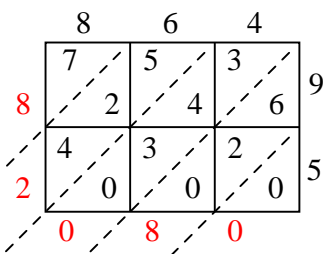
1) $927 \times 78 =$



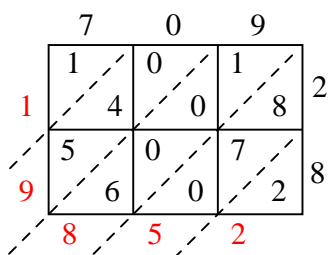
2) $669 \times 51 =$



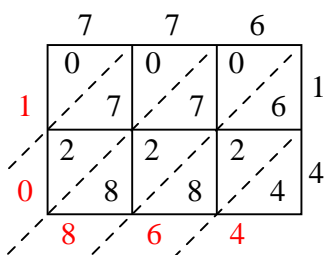
3) $864 \times 95 =$



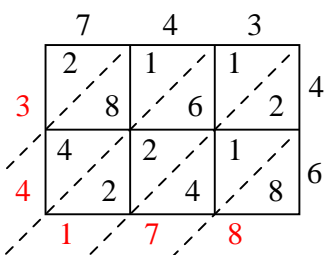
4) $709 \times 28 =$



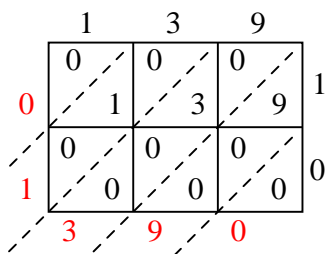
5) $776 \times 14 =$



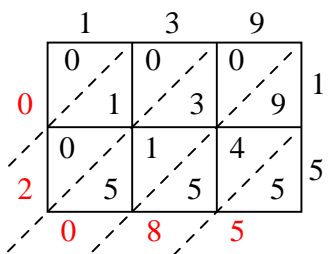
6) $743 \times 46 =$



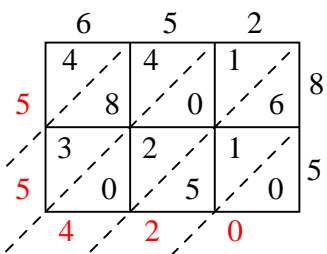
7) $139 \times 10 =$



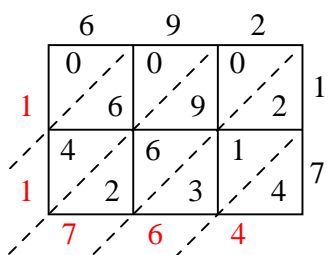
8) $139 \times 15 =$



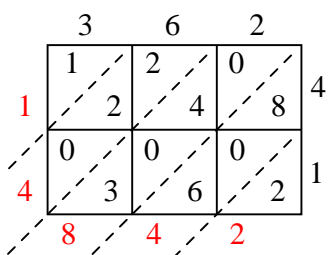
9) $652 \times 85 =$



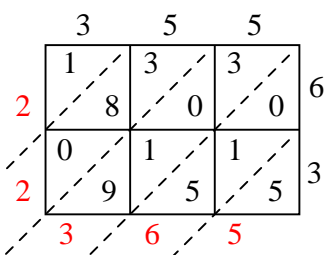
10) $692 \times 17 =$



11) $362 \times 41 =$



12) $355 \times 63 =$



Respuestas

1. **72,306**
2. **34,119**
3. **82,080**
4. **19,852**
5. **10,864**
6. **34,178**
7. **1,390**
8. **2,085**
9. **55,420**
10. **11,764**
11. **14,842**
12. **22,365**