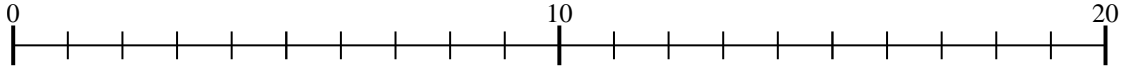




Usar la recta numérica para resolver cada problema.

Respuestas

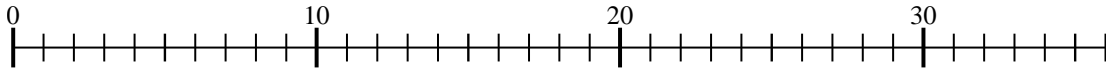
1) $3 \times 5 =$
 $5 \times 3 =$



1. _____

2. _____

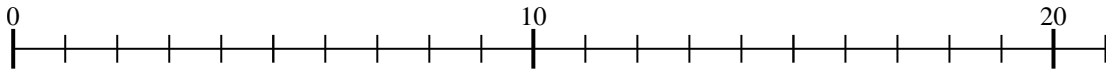
2) $4 \times 7 =$
 $7 \times 4 =$



3. _____

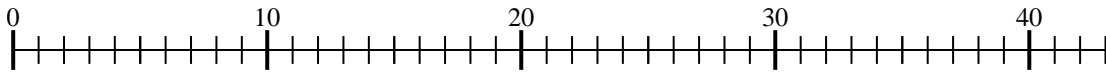
4. _____

3) $2 \times 8 =$
 $8 \times 2 =$



5. _____

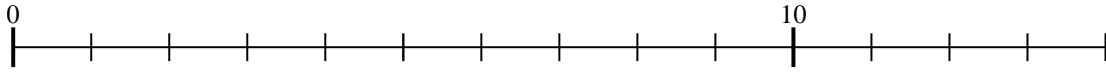
4) $4 \times 9 =$
 $9 \times 4 =$



6. _____

7. _____

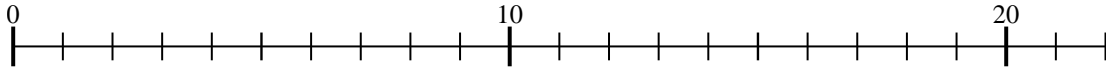
5) $4 \times 2 =$
 $2 \times 4 =$



8. _____

9. _____

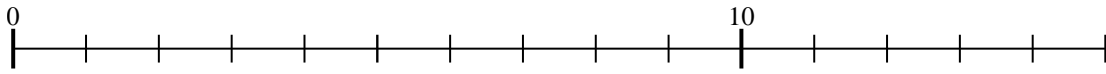
6) $4 \times 4 =$
 $4 \times 4 =$



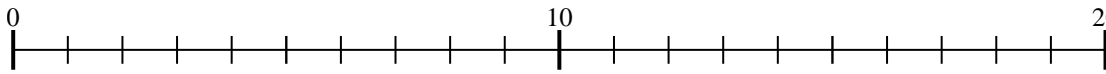
10. _____

11. _____

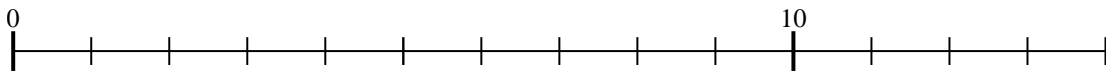
7) $3 \times 2 =$
 $2 \times 3 =$



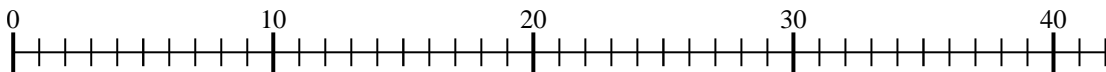
8) $2 \times 5 =$
 $5 \times 2 =$



9) $2 \times 3 =$
 $3 \times 2 =$



10) $5 \times 7 =$
 $7 \times 5 =$



11) $5 \times 2 =$
 $2 \times 5 =$

