











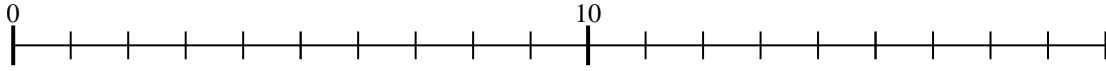




Usar la recta numérica para resolver cada problema.

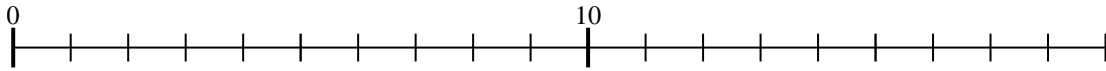
**Respuestas**

1)  $3 \times 3 =$   
 $3 \times 3 =$



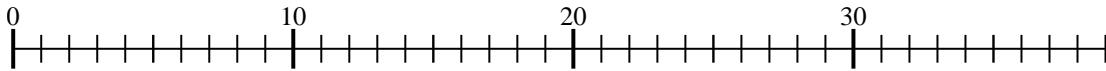
1. \_\_\_\_\_

2)  $2 \times 5 =$   
 $5 \times 2 =$



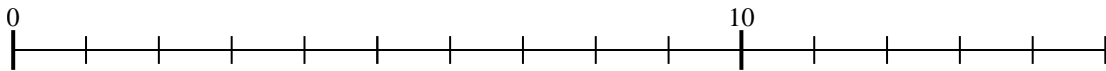
2. \_\_\_\_\_

3)  $4 \times 8 =$   
 $8 \times 4 =$



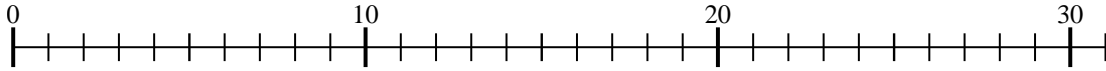
3. \_\_\_\_\_

4)  $4 \times 2 =$   
 $2 \times 4 =$



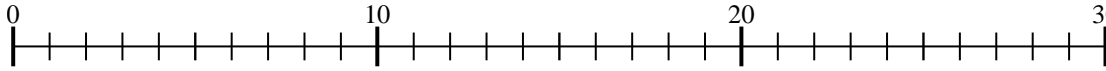
4. \_\_\_\_\_

5)  $4 \times 6 =$   
 $6 \times 4 =$



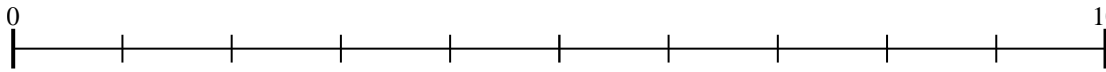
5. \_\_\_\_\_

6)  $3 \times 7 =$   
 $7 \times 3 =$



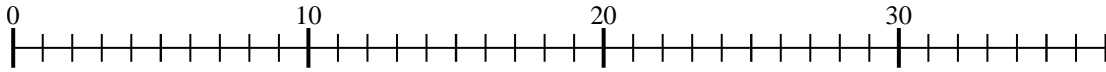
6. \_\_\_\_\_

7)  $2 \times 2 =$   
 $2 \times 2 =$



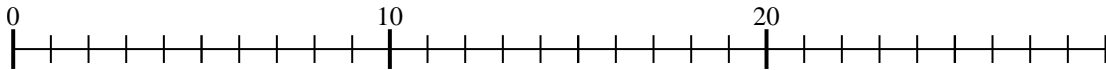
7. \_\_\_\_\_

8)  $5 \times 6 =$   
 $6 \times 5 =$



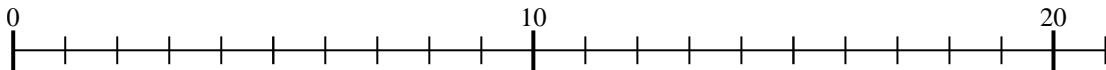
8. \_\_\_\_\_

9)  $5 \times 4 =$   
 $4 \times 5 =$



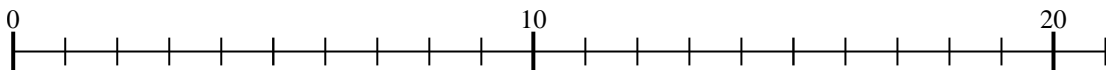
9. \_\_\_\_\_

10)  $5 \times 3 =$   
 $3 \times 5 =$



10. \_\_\_\_\_

11)  $3 \times 4 =$   
 $4 \times 3 =$



11. \_\_\_\_\_





























