





Usar las matrices proporcionadas para resolver cada problema.


1)  $20 \times 25 =$




2)  $11 \times 10 =$




3)  $13 \times 10 =$




4)  $19 \times 10 =$



5)  $10 \times 17 =$



6)  $10 \times 13 =$



**Respuestas**

1. \_\_\_\_\_

2. \_\_\_\_\_

3. \_\_\_\_\_

4. \_\_\_\_\_

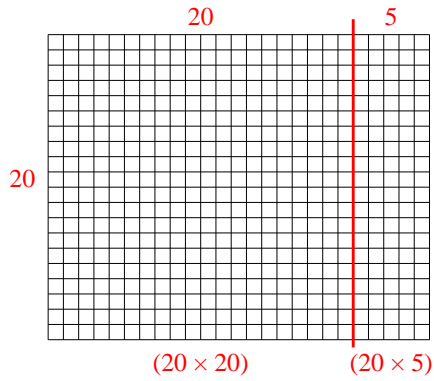
5. \_\_\_\_\_

6. \_\_\_\_\_

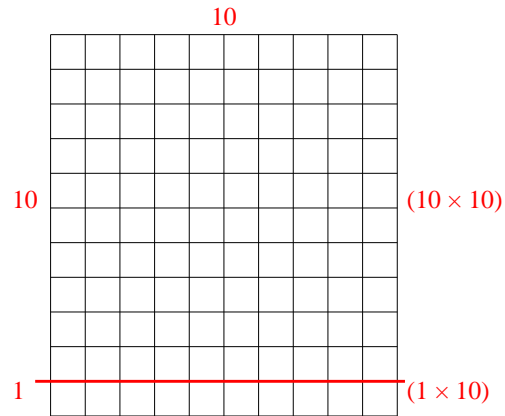


Usar las matrices proporcionadas para resolver cada problema.

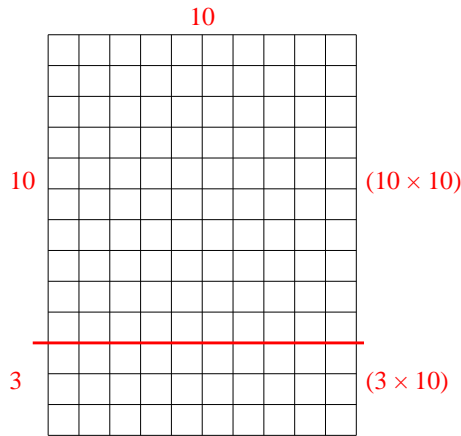
1)  $20 \times 25 =$



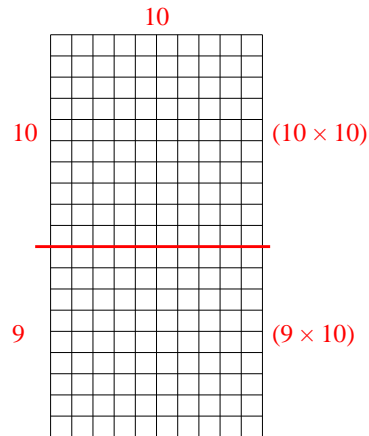
2)  $11 \times 10 =$



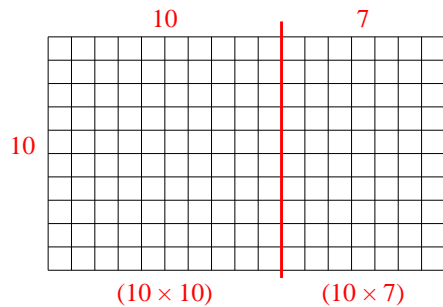
3)  $13 \times 10 =$



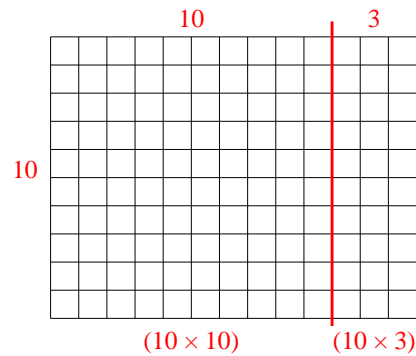
4)  $19 \times 10 =$



5)  $10 \times 17 =$



6)  $10 \times 13 =$



**Respuestas**

1. **500**

2. **110**

3. **130**

4. **190**

5. **170**

6. **130**