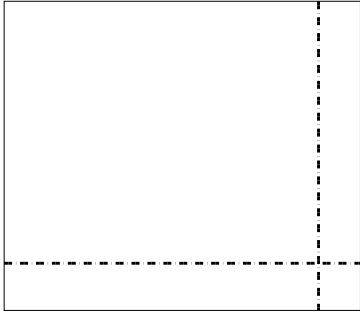


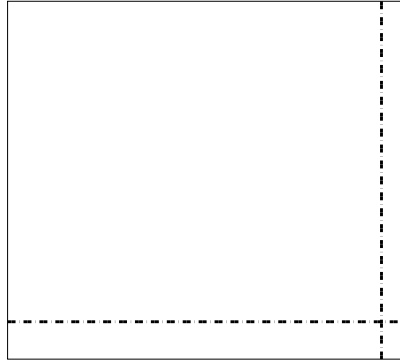


Usar la matriz proporcionada para resolver cada problema.


1)  $59 \times 68 =$



2)  $67 \times 75 =$




3)  $53 \times 36 =$




4)  $42 \times 55 =$



5)  $43 \times 66 =$



6)  $44 \times 28 =$



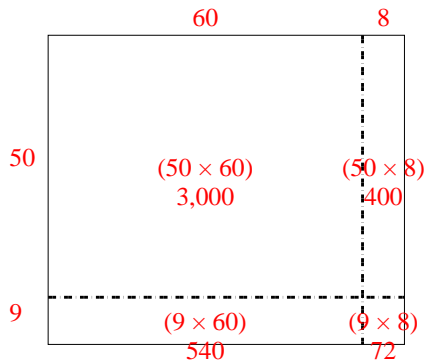
**Respuestas**

- 1. \_\_\_\_\_
- 2. \_\_\_\_\_
- 3. \_\_\_\_\_
- 4. \_\_\_\_\_
- 5. \_\_\_\_\_
- 6. \_\_\_\_\_

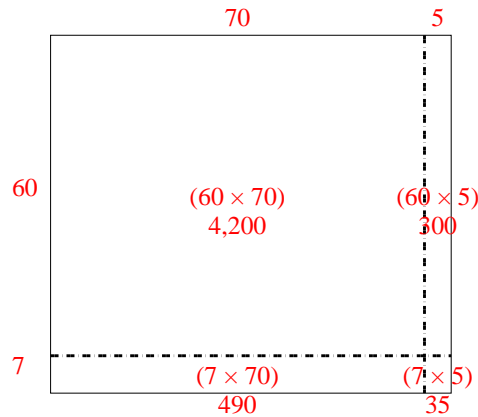


Usar la matriz proporcionada para resolver cada problema.

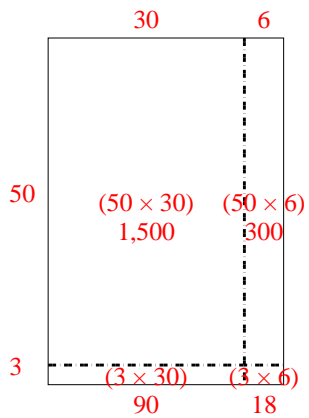
1)  $59 \times 68 =$



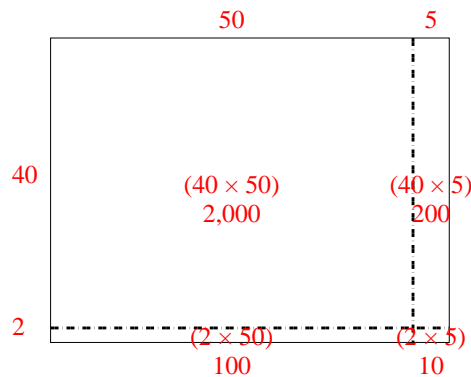
2)  $67 \times 75 =$



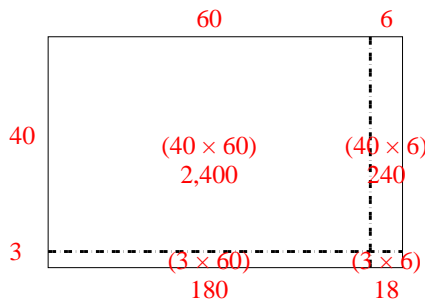
3)  $53 \times 36 =$



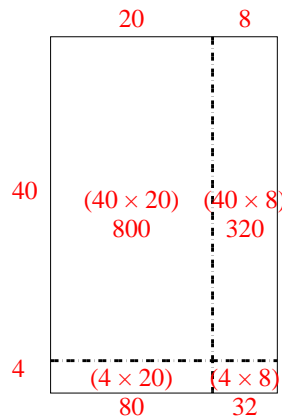
4)  $42 \times 55 =$



5)  $43 \times 66 =$



6)  $44 \times 28 =$



**Respuestas**

1. **4,012**

2. **5,025**

3. **1,908**

4. **2,310**

5. **2,838**

6. **1,232**