





Usar la matriz proporcionada para resolver cada problema.


1) $63 \times 69 =$



2) $66 \times 53 =$



3) $42 \times 53 =$




4) $53 \times 72 =$



5) $62 \times 75 =$



6) $74 \times 88 =$



Respuestas

1. _____

2. _____

3. _____

4. _____

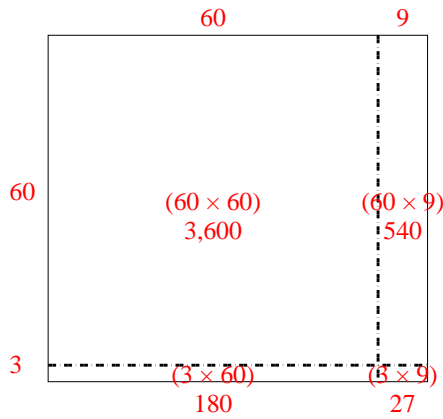
5. _____

6. _____

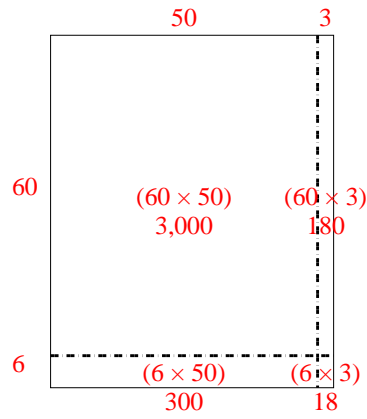


Usar la matriz proporcionada para resolver cada problema.

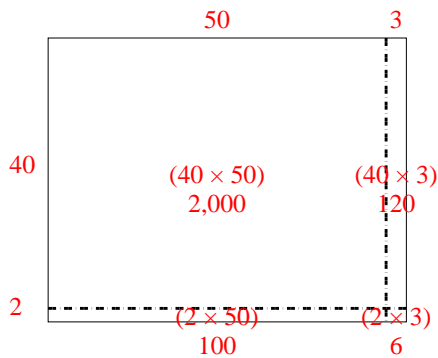
1) $63 \times 69 =$



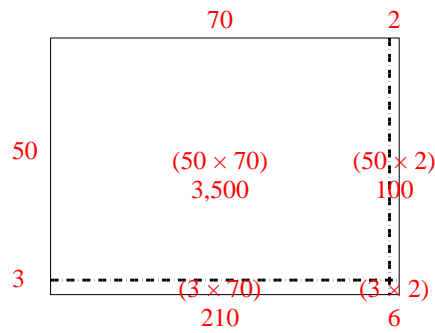
2) $66 \times 53 =$



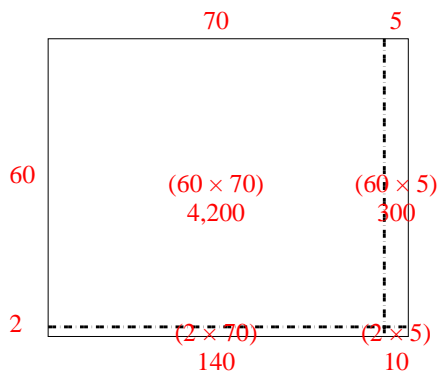
3) $42 \times 53 =$



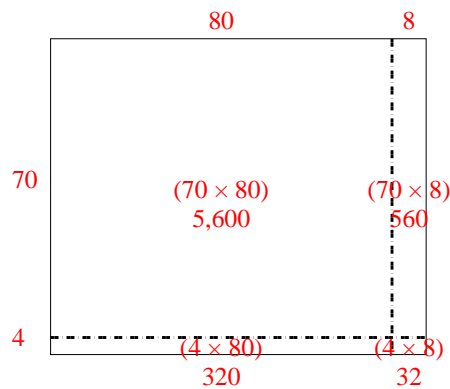
4) $53 \times 72 =$



5) $62 \times 75 =$



6) $74 \times 88 =$



Respuestas

1. **4,347**

2. **3,498**

3. **2,226**

4. **3,816**

5. **4,650**

6. **6,512**