





Usar la matriz proporcionada para resolver cada problema.


1) $54 \times 63 =$



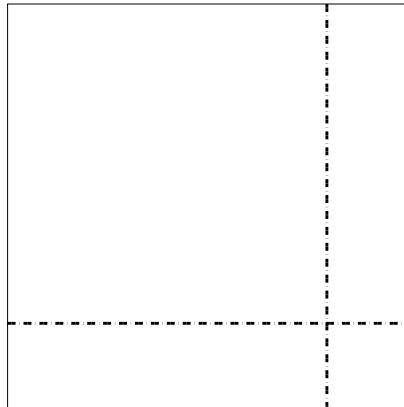
2) $44 \times 42 =$



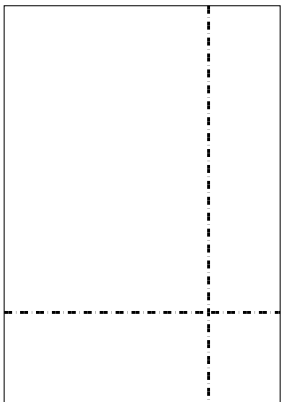
3) $35 \times 27 =$




4) $38 \times 38 =$



5) $39 \times 27 =$



6) $37 \times 14 =$



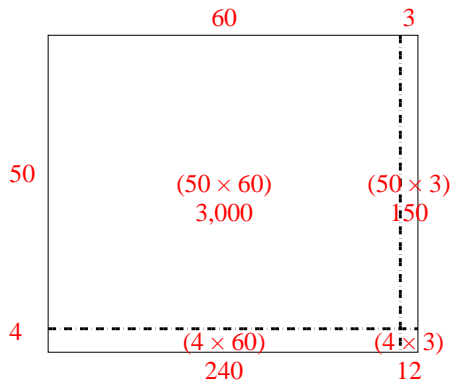
Respuestas

- 1. _____
- 2. _____
- 3. _____
- 4. _____
- 5. _____
- 6. _____

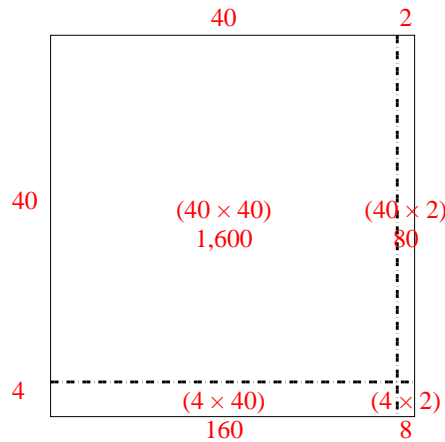


Usar la matriz proporcionada para resolver cada problema.

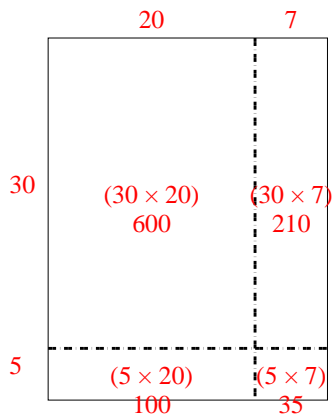
1) $54 \times 63 =$



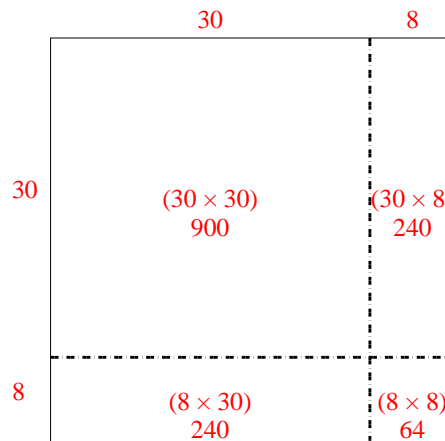
2) $44 \times 42 =$



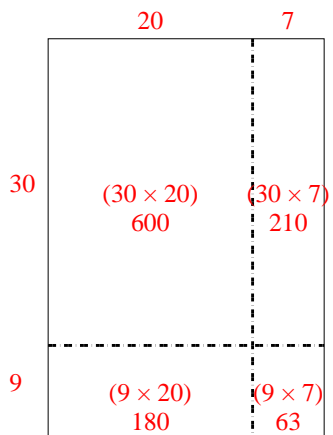
3) $35 \times 27 =$



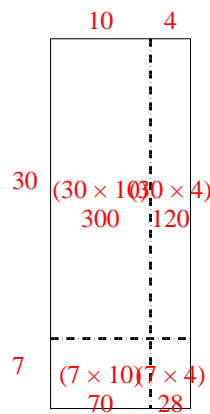
4) $38 \times 38 =$



5) $39 \times 27 =$



6) $37 \times 14 =$



Respuestas

1. **3,402**

2. **1,848**

3. **945**

4. **1,444**

5. **1,053**

6. **518**