





Usar la matriz proporcionada para resolver cada problema.


1)  $39 \times 30 =$




2)  $28 \times 20 =$




3)  $21 \times 20 =$




4)  $27 \times 20 =$



5)  $20 \times 28 =$



6)  $20 \times 21 =$



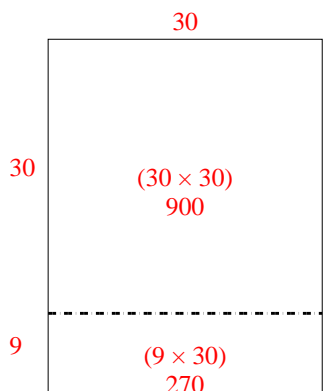
**Respuestas**

- 1. \_\_\_\_\_
- 2. \_\_\_\_\_
- 3. \_\_\_\_\_
- 4. \_\_\_\_\_
- 5. \_\_\_\_\_
- 6. \_\_\_\_\_

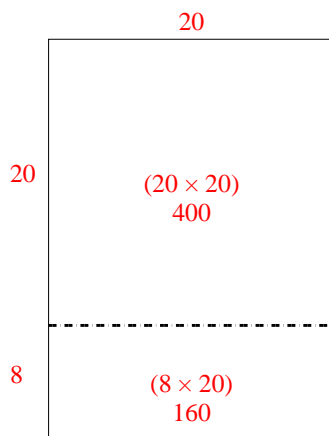


Usar la matriz proporcionada para resolver cada problema.

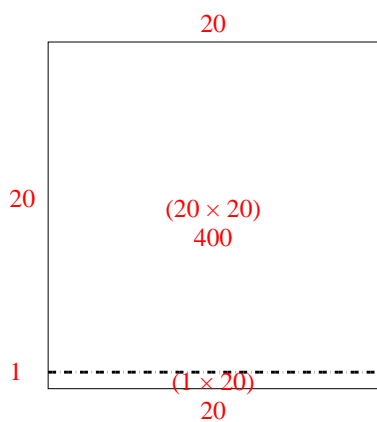
1)  $39 \times 30 =$



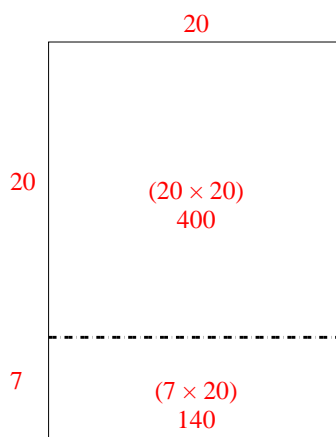
2)  $28 \times 20 =$



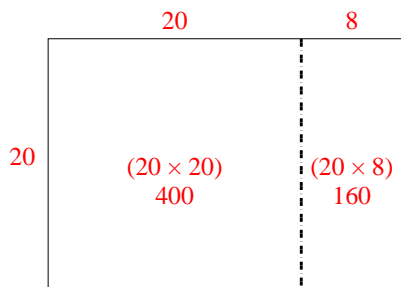
3)  $21 \times 20 =$



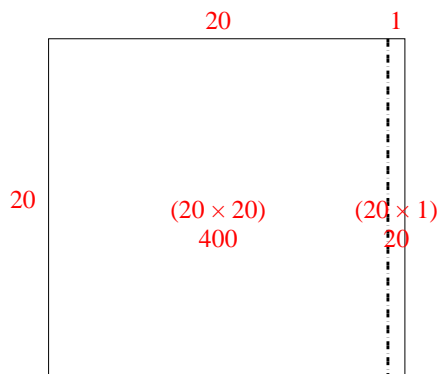
4)  $27 \times 20 =$



5)  $20 \times 28 =$



6)  $20 \times 21 =$



**Respuestas**

1. **1,170**

2. **560**

3. **420**

4. **540**

5. **560**

6. **420**